

**MULTIPLE CHOICE.** Choose the one alternative that best completes the statement or answers the question.

**Determine whether the equation in one variable is linear.**

1)  $x - 8 = 11$   
A) linear  
Answer: A

B) not linear

2)  $x^2 - 5 = 10$   
A) linear  
Answer: B

B) not linear

3)  $\frac{6}{x} = 11$   
A) linear  
Answer: B

B) not linear

4)  $10x + 19 = 14$   
A) linear  
Answer: A

B) not linear

5)  $\frac{x}{8} + 24 = 26$   
A) linear  
Answer: A

B) not linear

6)  $\sqrt{2x} + \pi = 0.\bar{7}$   
A) linear  
Answer: A

B) not linear

7)  $6\sqrt{x} - 13 = 0$   
A) linear  
Answer: B

B) not linear

8)  $38.7x = 3.1$   
A) linear  
Answer: A

B) not linear

9)  $9(x - 7) = 0$   
A) linear  
Answer: A

B) not linear

10)  $|x + 5| = 7$   
A) linear  
Answer: B

B) not linear

11)  $|12x| - 6 = 30$   
A) linear  
Answer: B

B) not linear

12)  $7x = 14x^3$   
A) linear  
Answer: B

B) not linear

**Solve the equation.**

13)  $a - 6 = -17$   
A)  $\{-23\}$   
Answer: C

B)  $\{11\}$

C)  $\{-11\}$

D)  $\{23\}$

14)  $x + 7 = -16$   
A)  $\{-23\}$   
Answer: A

B)  $\{9\}$

C)  $\{23\}$

D)  $\{-9\}$

15)  $x + 19 = 2$   
A)  $\{21\}$   
Answer: C

B)  $\{-21\}$

C)  $\{-17\}$

D)  $\{17\}$

16)  $-8 = b - 4$   
A)  $\{4\}$   
Answer: B

B)  $\{-4\}$

C)  $\{12\}$

D)  $\{-12\}$

17)  $9 = b - 12$   
A)  $\{3\}$   
Answer: D

B)  $\{-21\}$

C)  $\{-3\}$

D)  $\{21\}$

18)  $-2 + s = 14$   
A)  $\{12\}$   
Answer: D

B)  $\{-16\}$

C)  $\{-12\}$

D)  $\{16\}$

19)  $\frac{1}{4} + x = 9$   
A)  $\left\{\frac{35}{4}\right\}$   
Answer: A

B)  $\{2\}$

C)  $\left\{\frac{37}{4}\right\}$

D)  $\{35\}$

20)  $x + \frac{1}{11} = \frac{10}{11}$   
A)  $\left\{\frac{9}{10}\right\}$   
Answer: B

B)  $\left\{\frac{9}{11}\right\}$

C)  $\{1\}$

D)  $\left\{\frac{8}{11}\right\}$

21)  $x + \frac{3}{5} = -\frac{1}{10}$   
A)  $\left\{-\frac{4}{15}\right\}$   
Answer: C

B)  $\left\{-\frac{18}{25}\right\}$

C)  $\left\{-\frac{7}{10}\right\}$

D)  $\left\{-\frac{2}{5}\right\}$

$$22) x - \frac{3}{4} = \frac{3}{16}$$

$$A) \left\{ -\frac{3}{8} \right\}$$

Answer: B

$$B) \left\{ \frac{15}{16} \right\}$$

$$C) \left\{ -\frac{61}{64} \right\}$$

$$D) \left\{ -\frac{15}{16} \right\}$$

$$23) -\frac{3}{4} + z = \frac{1}{7}$$

$$A) \left\{ \frac{25}{28} \right\}$$

Answer: A

$$B) \left\{ \frac{4}{11} \right\}$$

$$C) \left\{ -\frac{25}{28} \right\}$$

$$D) \left\{ \frac{4}{7} \right\}$$

$$24) -8.9 + x = 14.2$$

$$A) \{22.6\}$$

Answer: C

$$B) \{4.8\}$$

$$C) \{23.1\}$$

$$D) \{5.3\}$$

$$25) -26.0 - z = 19.9$$

$$A) \{45.9\}$$

Answer: C

$$B) \{-6.1\}$$

$$C) \{-45.9\}$$

$$D) \{6.1\}$$

$$26) 15 + 4p = 5p$$

$$A) \{-15\}$$

Answer: C

$$B) \{4\}$$

$$C) \{15\}$$

$$D) \{6\}$$

$$27) 6y = 5y - 8.8$$

$$A) \{8.8\}$$

Answer: C

$$B) \{-19.8\}$$

$$C) \{-8.8\}$$

$$D) \{6\}$$

$$28) 17x - 3 = 6x + 85$$

$$A) \{9\}$$

Answer: D

$$B) \{11\}$$

$$C) \{6\}$$

$$D) \{8\}$$

$$29) 16x - 5 - 12x = 31$$

$$A) \{7\}$$

Answer: C

$$B) \{12\}$$

$$C) \{9\}$$

$$D) \{10\}$$

$$30) 3(y + 3) = 4(y - 3)$$

$$A) \{3\}$$

Answer: B

$$B) \{21\}$$

$$C) \{-21\}$$

$$D) \{-3\}$$

$$31) 5(2z - 3) = 9(z + 5)$$

$$A) \{35\}$$

Answer: B

$$B) \{60\}$$

$$C) \{-30\}$$

$$D) \{30\}$$

$$32) 10y = 5y + 5 + 4y$$

$$A) \{-50\}$$

Answer: C

$$B) \{-5\}$$

$$C) \{5\}$$

$$D) \{50\}$$

33)  $-2a + 3 + 3a = 15 - 24$

- A) {42}                                      B) {-12}                                      C) {-42}                                      D) {12}

Answer: B

34)  $-8b + 4 + 6b = -3b + 9$

- A) {9}    B) {-9}    C) {-4}    D) {5}

Answer: D

35)  $-8.4 + 5x - 6.4 + 4x - 2.5 = 5.7 + 10x + 1.2$

- A) {24.2}                                      B) {-10.4}                                      C) {10.4}                                      D) {-24.2}

Answer: D

**Use the given information to write an equation. Let  $x$  represent the number described in the exercise. Then solve the equation and find the number.**

36) The sum of a number and forty-four is fifty.

- A)  $44x = 50; 1.14$                                       B)  $x \div 44 = 50; 2200$                                       C)  $x - 44 = 50; 94$                                       D)  $x + 44 = 50; 6$

Answer: D

37) Twenty-nine increased by a number equals fifty-two.

- A)  $29 + 52 = x; 81$                                       B)  $29 - x = 52; -23$                                       C)  $29x = 52; 1.79$                                       D)  $29 + x = 52; 23$

Answer: D

38) If 230 is subtracted from a number, the result is 490.

- A)  $x + 230 = 490; 260$                                       B)  $x + 490 = 230; -260$   
C)  $x - 230 = 490; 720$                                       D)  $x - 230 = 490; -720$

Answer: C

39) If 276 is added to a number, the result is 564.

- A)  $x - 276 = 564; 840$                                       B)  $276 + x = 564; 288$                                       C)  $276 + x = 564; -840$                                       D)  $x + 276 = 564; -288$

Answer: B

**Solve.**

40) The cost of having a car towed is given by the formula  $C = 2x + 75$ , where  $C$  is in dollars and  $x$  is the number of miles the car is towed. Find the cost of having a car towed 15 miles.

- A) \$30    B) \$95    C) \$105    D) \$77

Answer: C

41) The monthly cost of a certain long distance service is given by the formula  $C = 0.08t + 3.95$  where  $C$  is in dollars and  $t$  is the amount of time in minutes called in a month. Find the cost of calling long distance for 60 minutes in a month.

- A) \$9.95    B) \$7.75    C) \$8.75    D) \$4.80

Answer: C

42) The amount of water in a leaky bucket is given by the formula  $f = 128 - 9t$ , where  $f$  is in ounces and  $t$  is in minutes. Find the amount of water in the bucket after 8 minutes.

- A) 56 oz    B) 200 oz    C) 72 oz    D) 119 oz

Answer: A

43) The altitude above sea level of an airplane just after taking off from an airport on a high plateau is given by the formula  $h = 400t + 2869$ , where  $h$  is in feet and  $t$  is the time in minutes since take-off. Find the altitude of the airplane after 4 minutes.

- A) 4569 ft                      B) 4469 ft                      C) 4369 ft                      D) 1600 ft

Answer: B

**Solve the equation using the multiplication property of equality.**

44)  $\frac{1}{10}a = 0$

- A) {0}                      B) {1}                      C) {-10}                      D) {10}

Answer: A

45)  $\frac{n}{4} = 8$

- A) {11}                      B) {12}                      C) {2}                      D) {32}

Answer: D

46)  $-\frac{n}{2} = -12$

- A) {24}                      B) {14}                      C) {-14}                      D) {-24}

Answer: A

47)  $\frac{v}{-4} = 5$

- A) {-20}                      B) {20}                      C) {9}                      D) {-9}

Answer: A

48)  $4x = 36$

- A) {32}                      B)  $\left\{\frac{1}{9}\right\}$                       C) {144}                      D) {9}

Answer: D

49)  $-19x = 0$

- A) {1}                      B) {19}                      C) {-19}                      D) {0}

Answer: D

50)  $3a = -21$

- A) {-24}                      B) {-7}                      C) {24}                      D) {1}

Answer: B

51)  $-7x = -63$

- A) {-56}                      B) {9}                      C) {56}                      D) {2}

Answer: B

52)  $-72x = 16$

- A)  $\left\{\frac{2}{9}\right\}$                       B)  $\left\{-\frac{2}{9}\right\}$                       C)  $\left\{\frac{9}{2}\right\}$                       D)  $\left\{-\frac{9}{2}\right\}$

Answer: B

53)  $-\frac{1}{7}x = 3$

A)  $\{-4\}$

B)  $\{-1\}$

C)  $\{-5\}$

D)  $\{-21\}$

Answer: D

54)  $16 = -\frac{4}{5}x$

A)  $\left\{-\frac{76}{5}\right\}$

B)  $\left\{-\frac{84}{5}\right\}$

C)  $\{-20\}$

D)  $\left\{-\frac{64}{5}\right\}$

Answer: C

55)  $\frac{9}{10}x = 81$

A)  $\left\{\frac{801}{10}\right\}$

B)  $\left\{\frac{729}{10}\right\}$

C)  $\left\{\frac{819}{10}\right\}$

D)  $\{90\}$

Answer: D

56)  $-\frac{1}{2}m = -\frac{2}{9}$

A)  $\left\{\frac{9}{4}\right\}$

B)  $\left\{\frac{4}{3}\right\}$

C)  $\left\{-\frac{4}{9}\right\}$

D)  $\left\{\frac{4}{9}\right\}$

Answer: D

57)  $8x + x = 45$

A)  $\left\{\frac{23}{4}\right\}$

B)  $\left\{\frac{45}{8}\right\}$

C)  $\{5\}$

D)  $\{4\}$

Answer: C

58)  $-9x + x = -80$

A)  $\{11\}$

B)  $\{10\}$

C)  $\{-10\}$

D)  $\{-11\}$

Answer: B

59)  $2x + 13x = 17$

A)  $\{2\}$

B)  $\left\{\frac{15}{17}\right\}$

C)  $\left\{\frac{17}{15}\right\}$

D)  $\{255\}$

Answer: C

**Solve the equation.**

60)  $-x = -4$

A)  $\{-1\}$

B)  $\{4\}$

C)  $\{-4\}$

D)  $\{0\}$

Answer: B

61)  $-x = 14$

A)  $\{0\}$

B)  $\{-1\}$

C)  $\{-14\}$

D)  $\{14\}$

Answer: C

Solve the equation using both the addition and multiplication properties of equality.

62)  $8r + 7 = 47$

- A) {32}                      B) {36}                      C) {5}                      D) {1}

Answer: C

63)  $8n - 9 = 39$

- A) {44}                      B) {40}                      C) {13}                      D) {6}

Answer: D

64)  $15 = -3x + 9$

- A) {13}                      B) {14}                      C) {-2}                      D) {9}

Answer: C

65)  $1 = -2x - 5$

- A) {8}                      B) {4}                      C) {-3}                      D) {12}

Answer: C

66)  $-6x - 23 = -95$

- A) {-66}                      B) {12}                      C) {-12}                      D)  $\left\{\frac{59}{3}\right\}$

Answer: B

67)  $-31 = -4x + 1$

- A) {32}                      B) {28}                      C) {8}                      D) {-8}

Answer: C

68)  $-7x = -75 + 8x$

- A) {-60}                      B) {-5}                      C) {6}                      D) {5}

Answer: D

69)  $10y - 9 = 7y$

- A)  $\left\{-\frac{9}{17}\right\}$                       B)  $\left\{\frac{9}{17}\right\}$                       C) {3}                      D) {-3}

Answer: C

70)  $-4y + 24 = -7y$

- A) {8}                      B) {-8}                      C)  $\left\{\frac{24}{11}\right\}$                       D)  $\left\{-\frac{24}{11}\right\}$

Answer: B

71)  $13x - 9 = 10x + 3$

- A) {5}                      B) {4}                      C) {7}                      D) {2}

Answer: B

72)  $2y + 7 = -5 - 4y$

- A)  $\left\{\frac{1}{2}\right\}$                       B)  $\left\{-\frac{1}{2}\right\}$                       C) {-2}                      D) {-1}

Answer: C

73)  $10x - 7 = 89 - 2x$

A)  $\{-8\}$

B)  $\{12\}$

C)  $\{8\}$

D)  $\left\{\frac{41}{4}\right\}$

Answer: C

74)  $3x - 8x + 2 = 8x$

A)  $\left\{-\frac{2}{13}\right\}$

B)  $\left\{\frac{2}{3}\right\}$

C)  $\left\{-\frac{13}{2}\right\}$

D)  $\left\{\frac{2}{13}\right\}$

Answer: D

**Use the given information to write an equation. Let  $x$  represent the number described in the exercise. Then solve the equation and find the number.**

75) The product of three-fourths and a number is six.

A)  $\frac{3}{4} = 6x; \frac{1}{8}$

B)  $\frac{3}{4} - x = 6; \frac{-21}{4}$

C)  $\frac{3}{4} + x = 6; \frac{21}{4}$

D)  $\frac{3}{4}x = 6; 8$

Answer: D

76) If thirty is divided by a number, the result is five.

A)  $30 - x = 5; 25$

B)  $\frac{x}{30} = 5; 150$

C)  $\frac{30}{x} = 5; 6$

D)  $\frac{30}{5} = x; 6$

Answer: C

77) A number subtracted from eighteen is four.

A)  $18 - x = 4; 14$

B)  $18 + x = 4; -14$

C)  $x - 18 = 4; 22$

D)  $18 - 4 = x; 14$

Answer: A

**Solve the problem.**

78) The time it takes to travel a given distance at constant speed is given by the formula  $t = \frac{d}{r}$ , where  $t$  is the time,  $d$

is the distance, and  $r$  is the rate of travel. At 30 miles per hour, what distance can be traveled in 4 hours?

A) 24 mi

B) 120 mi

C) 240 mi

D) 60 mi

Answer: B

79) The time it takes to travel a given distance at constant speed is given by the formula  $t = \frac{d}{r}$ , where  $t$  is the time,  $d$

is the distance, and  $r$  is the rate of travel. At 0.6 mile per minute, what distance can be traveled in 20 minutes?

A) 12 mi

B) 24 mi

C) 2.4 mi

D) 6 mi

Answer: A

80) To convert meters to feet, you can use the formula  $f = \frac{m}{0.3038}$ , where  $f$  is the distance in feet and  $m$  is the

distance in meters. How many meters (to the nearest tenth) is 10 feet?

A) 30.4 m

B) 3.0 m

C) 32.9 m

D) 3.3 m

Answer: B



81) Power is the time rate of doing work and is commonly measured in watts. Power is given by the formula  $P = \frac{W}{t}$ , where P is power, W is work (in joules), and t is time in seconds. If 900 watts of power are used in 10 seconds, how much work (in joules) was done?

- A) 90 joules                      B) 9 joules                      C) 900 joules                      D) 9000 joules

Answer: D

82) The speed of a ball dropped from a tower is given by the formula  $f = 32t$  where f is in feet per second and t is the number of seconds since the ball was dropped. Find the speed of the ball after 8 seconds.

- A) 246 ft/sec                      B) 8 ft/sec                      C) 32 ft/sec                      D) 256 ft/sec

Answer: D

83) The formula  $C = 412x + 181$  models the data for the cost to produce x units of a product, where C is given in dollars. How many units can be produced for a cost of \$164,981?

- A) 800 units                      B) 300 units                      C) 200 units                      D) 400 units

Answer: D

84) The weekly production cost C of manufacturing x calendars is given by  $C = 32 + 5x$ , where the variable C is in dollars. What is the cost of producing 266 calendars?

- A) \$298.00                      B) \$1330.00                      C) \$1362.00                      D) \$8517.00

Answer: C

**Solve the equation.**

85)  $6 - 9x = 5x - 8x - 12$

- A) {1}                      B)  $\left\{\frac{1}{2}\right\}$                       C) {2}                      D) {3}

Answer: D

86)  $7x - 9x - 10x = -9 - 99$

- A) {9}                      B)  $\left\{\frac{45}{4}\right\}$                       C)  $\left\{\frac{33}{4}\right\}$                       D)  $\left\{\frac{99}{8}\right\}$

Answer: A

87)  $-4a + 2 + 5a = 14 - 26$

- A) {-14}                      B) {42}                      C) {-42}                      D) {14}

Answer: A

88)  $-6b + 9 + 4b = -3b + 14$

- A) {-14}                      B) {5}                      C) {14}                      D) {-9}

Answer: B

89)  $8x - 4 + 5x = 9x + 68 - 4x$

- A) {9}                      B) {8}                      C) {10}                      D) {11}

Answer: A

90)  $-9(x + 8) = -45$

- A) {-53}                      B) {-37}                      C) {-3}                      D) {13}

Answer: C

91)  $5(4x - 1) = 20$

A)  $\left\{\frac{19}{20}\right\}$

B)  $\left\{\frac{3}{4}\right\}$

C)  $\left\{\frac{5}{4}\right\}$

D)  $\left\{\frac{21}{20}\right\}$

Answer: C

92)  $7x - (4x + 9) = 15$

A) {10}

B) {9}

C) {7}

D) {8}

Answer: D

93)  $3(5t - 19) - 7 = 71$

A) {8}

B) {9}

C) {10}

D) {11}

Answer: B

94)  $3x - 7 = 4(x + 8)$

A) {-25}

B) {39}

C) {-39}

D) {25}

Answer: C

95)  $3(4x + 1) - 5 = 10x - 4$

A) {1}

B) {-2}

C) {-4}

D) {-1}

Answer: D

96)  $2(y + 6) = 3(y - 5)$

A) {3}

B) {-3}

C) {27}

D) {-27}

Answer: C

97)  $2(2z - 4) = 3(z + 3)$

A) {3}

B) {1}

C) {17}

D) {-1}

Answer: C

98)  $2x - 6 + 2(x + 1) = -5x - 1$

A)  $\left\{\frac{1}{3}\right\}$

B) {-5}

C)  $\left\{-\frac{1}{8}\right\}$

D)  $\left\{-\frac{9}{10}\right\}$

Answer: A

99)  $4(4x + 3) - 7 = 10x - 1$

A) {-1}

B) {-6}

C) {1}

D) {-36}

Answer: A

100)  $8 - 2(y - 1) = 1 - 7y$

A)  $\left\{-\frac{11}{9}\right\}$

B)  $\left\{-\frac{9}{5}\right\}$

C) {-1}

D)  $\left\{-\frac{6}{5}\right\}$

Answer: B

101)  $5(x + 2) + 13 = 2(x + 5) + 10$

A) {11}

B) {9}

C) {13}

D) {-1}

Answer: D

102)  $7 - 3(x + 5) = 9 - 5(x + 3)$

A) {17}

B) {1}

C) {12}

D) {7}

Answer: B

103)  $16 - (2y - 2) = 3(y - 2) + 3y$

A) {3}

B) {6}

C) {2}

D)  $\left\{\frac{1}{3}\right\}$

Answer: A

104)  $3x + 5(-2x - 4) = -21 - 6x$

A) {1}

B) {41}

C) {-1}

D)  $\left\{\frac{41}{13}\right\}$

Answer: A

105)  $\frac{f}{2} - 4 = 1$

A) {-6}

B) {-10}

C) {6}

D) {10}

Answer: D

106)  $\frac{a}{2} - \frac{1}{2} = -2$

A) {5}

B) {3}

C) {-5}

D) {-3}

Answer: D

107)  $\frac{2x}{5} - \frac{x}{3} = 5$

A) {-75}

B) {150}

C) {75}

D) {-150}

Answer: C

108)  $\frac{1}{4}x - \frac{3}{8}x = 4$

A) {32}

B) {-32}

C) {-28}

D) {28}

Answer: B

109)  $\frac{5}{6} + \frac{1}{7}x = 1$

A)  $\left\{-\frac{24}{7}\right\}$

B)  $\left\{\frac{7}{6}\right\}$

C)  $\left\{-\frac{14}{3}\right\}$

D)  $\left\{-\frac{7}{6}\right\}$

Answer: B

110)  $\frac{x}{3} - \frac{x}{4} = 5$

A) {60}

B) {15}

C) {12}

D) {20}

Answer: A

$$111) \frac{x}{9} = \frac{x}{4} + \frac{1}{9}$$

$$A) \left\{ -\frac{1}{9} \right\}$$

Answer: C

$$B) \{0\}$$

$$C) \left\{ -\frac{4}{5} \right\}$$

$$D) \left\{ -\frac{5}{4} \right\}$$

$$112) \frac{1}{3} - \frac{x}{5} = \frac{1}{15}$$

$$A) \left\{ \frac{4}{3} \right\}$$

Answer: A

$$B) \left\{ -\frac{4}{5} \right\}$$

$$C) \left\{ -\frac{4}{3} \right\}$$

$$D) \left\{ \frac{4}{5} \right\}$$

$$113) \frac{13}{14}x + \frac{1}{7} = \frac{6}{7}x$$

$$A) \{2\}$$

Answer: B

$$B) \{-2\}$$

$$C) \{-14\}$$

$$D) \{14\}$$

$$114) \frac{x}{3} + 1 = \frac{x}{4} + 8$$

$$A) \left\{ -\frac{7}{12} \right\}$$

Answer: B

$$B) \{84\}$$

$$C) \{-84\}$$

$$D) \left\{ \frac{7}{12} \right\}$$

$$115) \frac{3x}{5} + 3 = \frac{1}{3}$$

$$A) \left\{ \frac{5}{3} \right\}$$

Answer: D

$$B) \left\{ -\frac{44}{9} \right\}$$

$$C) \left\{ \frac{4}{9} \right\}$$

$$D) \left\{ -\frac{40}{9} \right\}$$

$$116) \frac{r}{3} + \frac{6}{3} = \frac{r}{6} + \frac{8}{6}$$

$$A) \{4\}$$

Answer: B

$$B) \{-4\}$$

$$C) \{-12\}$$

$$D) \{3\}$$

$$117) \frac{x+4}{3} + \frac{x-2}{4} = \frac{17}{12}$$

$$A) \{0\}$$

Answer: D

$$B) \left\{ \frac{15}{2} \right\}$$

$$C) \{17\}$$

$$D) \{1\}$$

$$118) 1.1x + 19.2 = 2.7x$$

$$A) \{-21\}$$

Answer: B

$$B) \{12\}$$

$$C) \{7.5\}$$

$$D) \{7.1\}$$

$$119) 1.1 - 3x = -4.5 - 1.6x$$

$$A) \{2.4\}$$

Answer: B

$$B) \{4\}$$

$$C) \{1.9\}$$

$$D) \{-7\}$$

- 120)  $1.3x + 3.3 = 0.8x - 0.35$   
 A)  $\{-8.03\}$                       B)  $\{-7.4\}$                       C)  $\{-7.3\}$                       D)  $\{0.137\}$   
 Answer: C
- 121)  $0.83x + 0.87(14 - x) = 11.9$   
 A)  $\{-0.07\}$                       B)  $\{0.07\}$                       C)  $\{7\}$                       D)  $\{-7\}$   
 Answer: C
- 122)  $0.07y + 0.13(700 - y) = 0.19y$   
 A)  $\{22.75\}$                       B)  $\{728\}$                       C)  $\{364\}$                       D)  $\{227.5\}$   
 Answer: C
- 123)  $0.80x - 0.60(x + 50) = -0.48(50)$   
 A)  $\{15\}$                       B)  $\{30\}$                       C)  $\{20\}$                       D)  $\{40\}$   
 Answer: B
- 124)  $0.4(x + 80) + 0.46(x + 15) = -42.8$   
 A)  $\{65\}$                       B)  $\{95\}$                       C)  $\{-95\}$                       D)  $\{-65\}$   
 Answer: C

**Solve the equation. Use words or set notation to identify equations that have no solution, or equations that are true for all real numbers.**

- 125)  $4(x + 5) = 4x + 20$   
 A)  $\{0\}$                       B)  $\{x \mid x \text{ is a real number}\}$   
 C)  $\{40\}$                       D)  $\emptyset$   
 Answer: B
- 126)  $2(x + 6) = 2x - 24$   
 A)  $\emptyset$                       B)  $\{0\}$   
 C)  $\{24\}$                       D)  $\{x \mid x \text{ is a real number}\}$   
 Answer: A
- 127)  $-8x + 8 + 6x = -2x + 13$   
 A)  $\emptyset$                       B)  $\{x \mid x \text{ is a real number}\}$   
 C)  $\{5\}$                       D)  $\{-8\}$   
 Answer: A
- 128)  $5x - 4 + 5x + 6 = 3x + 7x - 1$   
 A)  $\{160\}$                       B)  $\{0\}$   
 C)  $\{x \mid x \text{ is a real number}\}$                       D)  $\emptyset$   
 Answer: D
- 129)  $-3(x + 7) + 33 = 3x - 6(x + 5)$   
 A)  $\{63\}$                       B)  $\emptyset$   
 C)  $\{3\}$                       D)  $\{x \mid x \text{ is a real number}\}$   
 Answer: B

130)  $18(x + 3) = 3(6x + 1) + 51$

A)  $\emptyset$

C)  $\{0\}$

Answer: B

B)  $\{x \mid x \text{ is a real number}\}$

D)  $\{54\}$

131)  $4(x + 1) = 23x + 23 - 19x - 19$

A)  $\{0\}$

C)  $\emptyset$

Answer: B

B)  $\{x \mid x \text{ is a real number}\}$

D)  $\{1\}$

132)  $7x + 9(x + 1) = 16(x + 1) - 7$

A)  $\{x \mid x \text{ is a real number}\}$

C)  $\{0\}$

Answer: A

B)  $\{1\}$

D)  $\emptyset$

133)  $3(x + 4) + 5 = 3x + 2$

A)  $\{11\}$

C)  $\{x \mid x \text{ is a real number}\}$

Answer: D

B)  $\{15\}$

D)  $\emptyset$

134)  $4(5x - 1) - 6 = 16x - 2$

A)  $\{2\}$

C)  $\emptyset$

Answer: A

B)  $\{-2\}$

D)  $\{x \mid x \text{ is a real number}\}$

135)  $\frac{x}{5} - 3 = \frac{x}{5}$

A)  $\{\frac{15}{2}\}$

C)  $\emptyset$

Answer: C

B)  $\{0\}$

D)  $\{x \mid x \text{ is a real number}\}$

136)  $\frac{1}{3}(6x - 9) = 6\left(\frac{1}{3}x - \frac{1}{2}\right) + 9$

A)  $\left\{\frac{9}{4}\right\}$

C)  $\emptyset$

Answer: C

B)  $\{0\}$

D)  $\{x \mid x \text{ is a real number}\}$

137)  $3x + 12 = 12 - x$

A)  $\{18\}$

C)  $\emptyset$

Answer: D

B)  $\{x \mid x \text{ is a real number}\}$

D)  $\{0\}$

$$138) \frac{2x}{5} - \frac{x}{3} + 4 = 4 + x$$

A)  $\emptyset$

C)  $\{x \mid x \text{ is a real number}\}$

B)  $\{60\}$

D)  $\{0\}$

Answer: D

$$139) \frac{1}{4}x - \frac{3}{8}x = 4$$

A)  $\{x \mid x \text{ is a real number}\}$

C)  $\emptyset$

B)  $\{32\}$

D)  $\{-32\}$

Answer: D

**Use the given information to write an equation. Let  $x$  represent the number described in the exercise. Then solve the equation and find the number.**

140) Four times a number added to 7 times the number equals 44. Find the number.

A)  $4(x + 7) = 44x$ ; 0.7

B)  $4x - 7x = 44$ ; -6.3

C)  $4x + 7x = 44$ ; 4

D)  $4x(7 + x) = 44$ ; 6.3

Answer: C

141) When 4 times a number is subtracted from 7 times the number, the result is 21. Find the number.

A)  $4x + 7x = 21$ ; 3

B)  $7x - 4x = 21$ ; 7

C)  $4(x - 7) = 21x$ ; 0.6

D)  $4x(7 - x) = 21$ ; -7

Answer: B

142) If 6 times a number is added to -3, the result is equal to 9 times the number. Find the number.

A)  $15x - 9x = 3$ ; 1

B)  $6x + (-3) = 9x$ ; -1

C)  $9(6x - 3) = -3$ ; -1

D)  $4x + (-3) = 9x$ ; 1

Answer: B

143) Three-fourths of a number is  $\frac{7}{8}$ . Find the number in lowest terms.

A)  $\frac{3}{4}x = \frac{7}{8}$ ;  $\frac{7}{6}$

B)  $\frac{3}{4}x = \frac{7}{8}$ ;  $\frac{28}{24}$

C)  $\frac{3}{4} + x = \frac{7}{8}$ ;  $\frac{1}{7}$

D)  $\frac{3}{4}x = \frac{7}{8}$ ;  $\frac{21}{32}$

Answer: A

144) The sum of four times a number and 8 is equal to the difference of twice the number and 1. Find the number.

A)  $4x + 8 = 2x - 1$ ;  $-\frac{9}{2}$

B)  $4(x + 8) = 2x - 1$ ;  $-\frac{33}{2}$

C)  $4x + 8 = 2x + 1$ ;  $-\frac{7}{2}$

D)  $4x + 8 = 2x - 1$ ;  $\frac{9}{2}$

Answer: A

**Solve the problem.**

145) Forensic scientists use the lengths of certain bones to calculate the height of a person. When the femur (the bone from the knee to the hip socket) is used, the following formula applies for men:  $h = 69.09 + 2.24f$ , where  $h$  is the height and  $f$  is the length of the femur (both in centimeters). Find the height of a man with a femur measuring 66 centimeters.

A) 1.38 cm

B) 135.09 cm

C) 216.93 cm

D) 4707.78 cm

Answer: C

146) There is a formula that gives a correspondence between women's shoe sizes in the United States and those in Italy. The formula is  $S = 2(x + 12)$ , where  $S$  is the size in Italy and  $x$  is the size in the United States. What would be the US size for an Italian size of 38?

- A) 14                                      B) 88                                      C) 7                                      D) 3.5

Answer: C

147) In one state, speeding fines are determined by the formula  $F = 8(x - 65) + 100$ , where  $F$  is the cost, in dollars, of the fine if a person is caught driving  $x$  miles per hour. If the fine comes to \$212, how fast was the person driving?

- A) 77 mph                                      B) 89 mph                                      C) 81 mph                                      D) 79 mph

Answer: D

148) To convert a Fahrenheit temperature to Celsius, one formula to use is  $F = \frac{9}{5}C + 32$ , where  $F$  is the Fahrenheit temperature (in degrees) and  $C$  is the Celsius temperature. What is the Celsius temperature (to the nearest degree) when Fahrenheit temperature is  $77^\circ$ ?

- A)  $145^\circ$                                       B)  $39^\circ$                                       C)  $171^\circ$                                       D)  $25^\circ$

Answer: D

**Solve the formula for the specified variable.**

149)  $A = \frac{1}{2}bh$  for  $b$

- A)  $b = \frac{h}{2A}$                                       B)  $b = \frac{2A}{h}$                                       C)  $b = \frac{Ah}{2}$                                       D)  $b = \frac{A}{2h}$

Answer: B

150)  $S = 2\pi rh + 2\pi r^2$  for  $h$

- A)  $h = \frac{S}{2\pi r} - 1$                                       B)  $h = S - r$                                       C)  $h = 2\pi(S - r)$                                       D)  $h = \frac{S - 2\pi r^2}{2\pi r}$

Answer: D

151)  $V = \frac{1}{3}Bh$  for  $h$

- A)  $h = \frac{B}{3V}$                                       B)  $h = \frac{V}{3B}$                                       C)  $h = \frac{3V}{B}$                                       D)  $h = \frac{3B}{V}$

Answer: C

152)  $P = s_1 + s_2 + s_3$  for  $s_3$

- A)  $s_3 = s_1 + s_2 - P$                                       B)  $s_3 = s_1 + P - s_2$                                       C)  $s_3 = P + s_1 + s_2$                                       D)  $s_3 = P - s_1 - s_2$

Answer: D

153)  $F = \frac{9}{5}C + 32$  for  $C$

- A)  $C = \frac{5}{9}(F - 32)$                                       B)  $C = \frac{F - 32}{9}$                                       C)  $C = \frac{5}{F - 32}$                                       D)  $C = \frac{9}{5}(F - 32)$

Answer: A



154)  $d = rt$  for  $t$

A)  $t = d - r$

B)  $t = \frac{d}{r}$

C)  $t = \frac{r}{d}$

D)  $t = dr$

Answer: B

155)  $P = 2L + 2W$  for  $L$

A)  $L = \frac{P - 2W}{2}$

B)  $L = \frac{P - W}{2}$

C)  $L = d - 2W$

D)  $L = P - W$

Answer: A

**Solve the equation for  $y$ .**

156)  $2x + y = 4$

A)  $y = 2 - x$

B)  $y = \frac{4 - x}{2}$

C)  $y = 2x + 4$

D)  $y = 4 - 2x$

Answer: D

157)  $19x + 9y = 14$

A)  $y = 19x - 14$

B)  $y = \frac{14 - 19x}{9}$

C)  $y = \frac{19 + 14x}{9}$

D)  $y = \frac{14 + 19x}{9}$

Answer: B

158)  $x = 3y + 2$

A)  $y = \frac{x - 2}{3}$

B)  $y = \frac{1}{3}x - 2$

C)  $y = x - \frac{2}{3}$

D)  $y = 3x - 2$

Answer: A

159)  $-5x + 20y = 0$

A)  $y = \frac{x}{4}$

B)  $y = -4x$

C)  $y = 4x$

D)  $y = 4x + 5$

Answer: A

**Use the percent formula,  $A = PB$ : A is P percent of B, to solve.**

160) What number is 2% of 130?

A) 0.26

B) 260

C) 26

D) 2.6

Answer: D

161) What number is 60% of 18?

A) 10.8

B) 1080

C) 108

D) 1.08

Answer: A

162) What number is 37% of 90?

A) 333

B) 3.33

C) 3330

D) 33.3

Answer: D

163) 30% of what number is 1.8?

A) 54

B) 6

C) 0.54

D) 0.06

Answer: B

- 164) What percent of 0.2 is 0.6?  
 A) 300%                      B) 0.12%                      C) 12%                      D) 3%  
 Answer: A
- 165) 1200 is what percent of 300?  
 A) 4%                      B) 0.4%                      C) 25%                      D) 400%  
 Answer: D
- 166) 24% of what number is 28.8?  
 A) 12                      B) 120                      C) 1200                      D) 1.2  
 Answer: B
- 167) What percent of 2.5 is 0.2?  
 A) 4%                      B) 0.8%                      C) 8%                      D) 80%  
 Answer: C
- 168) 88 is 10% of what number?  
 A) 8800                      B) 880                      C) 88                      D) 8.8  
 Answer: B
- 169) 22 is 1% of what number?  
 A) 2200                      B) 220                      C) 22,000                      D) 22  
 Answer: A
- 170) 10% of what number is 93?  
 A) 9300                      B) 930                      C) 9.3                      D) 93  
 Answer: B

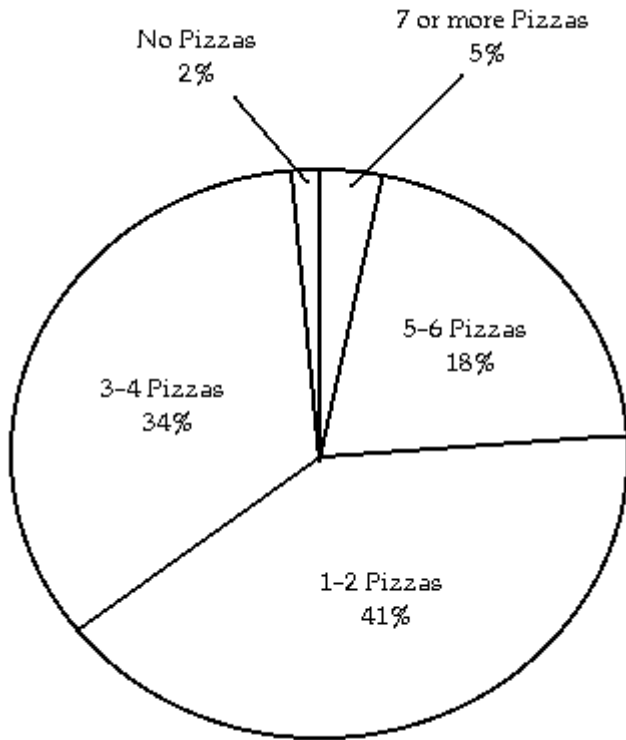
**Solve the problem.**

- 171) Jeans are on sale at the local department store for 30% off. If the jeans originally cost \$54, find the sale price. (Round to the nearest cent, if necessary.)  
 A) \$70.20                      B) \$37.80                      C) \$52.38                      D) \$16.20  
 Answer: B
- 172) Sales at a local ice cream shop went up 30% in 5 years. If 43,000 ice cream cones were sold in the current year, find the number of ice cream cones sold 5 years ago. (Round to the nearest integer, if necessary.)  
 A) 12,900 ice cream cones                      B) 143,333 ice cream cones  
 C) 30,100 ice cream cones                      D) 33,077 ice cream cones  
 Answer: D
- 173) Attendance this year at the homecoming football game is 133% of what it was last year. If last year's homecoming football game attendance was 37,000, what is this year's attendance? (Round to the nearest integer, if necessary.)  
 A) 492,100 people                      B) 49,210 people                      C) 278 people                      D) 3595 people  
 Answer: B
- 174) Of the 60 students in an algebra class, 5 of them received an F on the mid-term exam. What percent of the algebra students received an F on the exam? (Round to the nearest tenth of a percent, if necessary.)  
 A) 12%                      B) 120%                      C) 8.3%                      D) 83.3%  
 Answer: C

- 175) 10% of students at a university attended a lecture. If 3000 students are enrolled at the university, about how many students attended the lecture?  
A) 3000 students                      B) 30,000 students                      C) 300 students                      D) 30 students

Answer: C

The pie chart below shows the number of pizzas consumed by college students in a typical month. Use the chart to answer the question.



- 176) What percent of college students consume 1-2 pizzas in a typical month?  
A) 34%                      B) 41%                      C) 2%                      D) 18%

Answer: B

- 177) What percent of college students consume no pizzas in a typical month?  
A) 34%                      B) 5%                      C) 18%                      D) 2%

Answer: D

- 178) What percent of college students consume 3 or more pizzas in a typical month?  
A) 57%                      B) 34%                      C) 98%                      D) 52%

Answer: A

- 179) What percent of college students consume 4 pizzas or less in a typical month?  
A) 43%                      B) 82%                      C) 77%                      D) 75%

Answer: C

- 180) If State University has approximately 47,000 students, about how many would you expect to consume 5–6 pizzas in a typical month?  
A) 15,980 students      B) 1598 students      C) 846 students      D) 8460 students

Answer: D

**Solve the problem.**

- 181) Due to a lack of funding, the number of students enrolled at City College went from 9000 last year to 5000 this year. Find the percent decrease in enrollment. (Round to the nearest tenth of a percent, if necessary.)  
A) 55.6%      B) 180%      C) 80%      D) 44.4%

Answer: D

- 182) If 3 is increased to 6, the increase is what percent of the original number?  
A) 10%      B) 1%      C) 0.01%      D) 100%

Answer: D

- 183) If 10 is decreased to 5, the decrease is what percent of the original number?  
A) 0.5%      B) 50%      C) 5%      D) 0.005%

Answer: B

**Let  $x$  represent the number. Write the English phrase as an algebraic expression.**

- 184) The product of 10 and a number, added to 16.  
A)  $160 + x$       B)  $10 + 16x$       C)  $160x$       D)  $16 + 10x$

Answer: D

- 185) Ten times a number, decreased by 67.  
A)  $10(x - 67)$       B)  $10x + 67$       C)  $10x - 67$       D)  $10(x + 67)$

Answer: C

- 186) The quotient of 29 and the product of a number and  $-10$ .  
A)  $\frac{29}{-10x}$       B)  $\frac{29}{x} - 10$       C)  $\frac{-10x}{29}$       D)  $-290x$

Answer: A

- 187) The product of  $-38$  and the sum of a number and 8.  
A)  $-38 + 8x$       B)  $-304x$       C)  $-38x + 8$       D)  $-38(x + 8)$

Answer: D

- 188) Twice the sum of a number and  $-10$ .  
A)  $2(x + (-10))$       B)  $2x + (-10)$       C)  $2 + x + (-10)$       D)  $2x - (-10)$

Answer: A

- 189) The quotient of 28 times a number and  $-3$ .  
A)  $\frac{28x}{-3}$       B)  $\frac{1}{-84x}$       C)  $28x + 3$       D)  $28x - 3$

Answer: A

190) Four times a number decreased by one-half of the same number.

A)  $4x - \frac{x}{2}$

B)  $4x - \frac{1}{2}$

C)  $\frac{x}{2} - 4x$

D)  $4(x - \frac{1}{2})$

Answer: A

**Let x represent the number. Use the given conditions to write an equation. Solve the equation and find the number.**

191) Four times a number added to 9 times the number equals 65. Find the number.

A)  $4x + 9x = 65; 5$

B)  $4(x + 9) = 65x; 0.6$

C)  $4x - 9x = 65; -7.2$

D)  $4x(9 + x) = 65; 7.2$

Answer: A

192) When 4 times a number is subtracted from 7 times the number, the result is 30. Find the number.

A)  $4(x - 7) = 30x; 0.9$

B)  $4x(7 - x) = 30; -10$

C)  $4x + 10x = 30; 3$

D)  $7x - 4x = 30; 10$

Answer: D

193) If 6 times a number is added to -6, the result is equal to 12 times the number. Find the number.

A)  $12(6x - 6) = -6; -1$

B)  $6x + (-6) = 12x; -1$

C)  $4x + (-6) = 12x; 1$

D)  $18x - 12x = 6; 1$

Answer: B

194) Three-fourths of a number is  $\frac{5}{6}$ . Find the number in lowest terms.

A)  $\frac{3}{4}x = \frac{5}{6}; \frac{5}{8}$

B)  $\frac{3}{4}x = \frac{5}{6}; \frac{20}{18}$

C)  $\frac{3}{4}x = \frac{5}{6}; \frac{10}{9}$

D)  $\frac{3}{4} + x = \frac{5}{6}; \frac{1}{10}$

Answer: C

195) The sum of four times a number and 4 is equal to the difference of twice the number and 8. Find the number.

A)  $4x + 4 = 2x - 8; -6$

B)  $4x + 4 = 2x + 8; 2$

C)  $4(x + 4) = 2x - 8; -12$

D)  $4x + 4 = 2x - 8; 6$

Answer: A

**Solve the problem.**

196) The president of a certain university makes three times as much money as one of the department heads. If the total of their salaries is \$270,000, find each worker's salary.

A) president's salary = \$135,000; department head's salary = \$67,500

B) president's salary = \$20,250; department head's salary = \$6750

C) president's salary = \$202,500; department head's salary = \$67,500

D) president's salary = \$67,500; department head's salary = \$202,500

Answer: C

197) 30 marbles are to be divided into three bags so that the second bag has three times as many marbles as the first bag and the third bag has twice as many as the first bag. If x is the number of marbles in the first bag, find the number of marbles in each bag.

A) 1st bag = 5 marbles; 2nd bag = 10 marbles; 3rd bag = 15 marbles

B) 1st bag = 6 marbles; 2nd bag = 18 marbles; 3rd bag = 12 marbles

C) 1st bag = 5 marbles; 2nd bag = 15 marbles; 3rd bag = 10 marbles

D) 1st bag = 6 marbles; 2nd bag = 14 marbles; 3rd bag = 10 marbles

Answer: C

198) A promotional deal for long distance phone service charges a \$15 basic fee plus \$0.05 per minute for all calls. If Joe's phone bill was \$66 under this promotional deal, how many minutes of phone calls did he make? Round to the nearest integer, if necessary.

- A) 3 minutes                      B) 1020 minutes                      C) 1620 minutes                      D) 10 minutes

Answer: B

199) Two angles are complementary if their sum is  $90^\circ$ . If the measure of the first angle is  $x^\circ$ , and the measure of the second angle is  $(3x - 2)^\circ$ , find the measure of each angle.

- A) 1st angle =  $23^\circ$ ; 2nd angle =  $67^\circ$                       B) 1st angle =  $22^\circ$ ; 2nd angle =  $68^\circ$   
C) 1st angle =  $22^\circ$ ; 2nd angle =  $64^\circ$                       D) 1st angle =  $31^\circ$ ; 2nd angle =  $59^\circ$

Answer: A

200) Rooms in Dormitory A each have 124 square feet of floor space. These rooms have twice as much floor space as each room in Dormitory B. About how much floor space does a room in Dormitory B have?

- A) 126 sq. feet                      B) 122 sq. feet                      C) 248 sq. feet                      D) 62 sq. feet

Answer: D

201) An isosceles triangle contains two angles of the same measure. If the measure of the third angle is  $54^\circ$  less than the measure of either of the other two identical angles, find the measure of one of the identical angles. (Hint: The sum of the angles of a triangle is  $180^\circ$ .)

- A)  $58^\circ$                       B)  $24^\circ$                       C)  $117^\circ$                       D)  $78^\circ$

Answer: D

202) There are 14 more sophomores than juniors in an algebra class. If there are 72 students in this class, find the number of sophomores and the number of juniors in the class.

- A) 86 sophomores; 58 juniors                      B) 43 sophomores; 29 juniors  
C) 72 sophomores; 58 juniors                      D) 29 sophomores; 43 juniors

Answer: B

203) A car rental agency advertised renting a luxury, full-size car for \$29.95 per day and \$0.49 per mile. If you rent this car for 2 days, how many whole miles can you drive if you only have \$200 to spend?

- A) 342 miles                      B) 285 miles                      C) 100 miles                      D) 9 miles

Answer: B

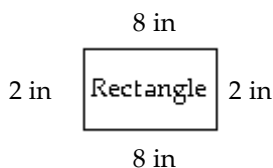
204) A 12-ft. board is cut into 2 pieces so that one piece is 4 feet longer than 3 times the shorter piece. If the shorter piece is  $x$  feet long, find the lengths of both pieces.

- A) shorter piece: 2 ft.; longer piece: 10 ft.                      B) shorter piece: 32 ft.; longer piece: 36 ft.  
C) shorter piece: 6 ft.; longer piece: 36 ft.                      D) shorter piece: 12 ft.; longer piece: 40 ft.

Answer: A

**Use a formula for perimeter or area to solve the problem.**

205)

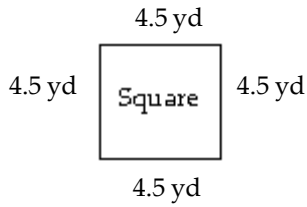


Find the perimeter of the figure.

- A) 10 in                      B) 20 in                      C) 12 in                      D) 8 in

Answer: B

206)

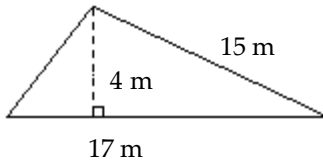


Find the perimeter of the figure.

- A) 18 yd                      B) 28 yd                      C) 9 yd                      D) 40.5 yd

Answer: A

207)

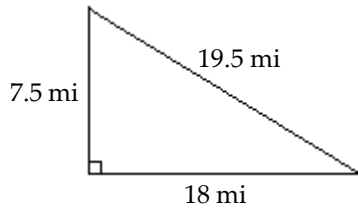


Find the area of the triangle.

- A)  $30 \text{ m}^2$                       B)  $127.5 \text{ m}^2$                       C)  $68 \text{ m}^2$                       D)  $34 \text{ m}^2$

Answer: D

208)

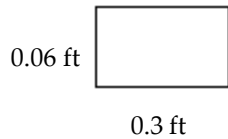


Find the area of the triangle.

- A)  $45 \text{ mi}^2$                       B)  $135 \text{ mi}^2$                       C)  $67.5 \text{ mi}^2$                       D)  $73.125 \text{ mi}^2$

Answer: C

209)

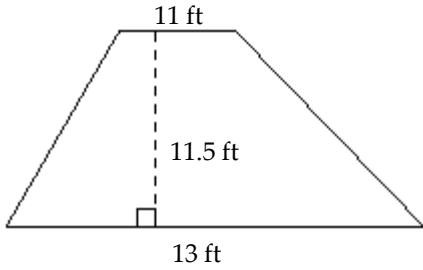


Find the area of the rectangle.

- A)  $0.18 \text{ ft}^2$                       B)  $0.72 \text{ ft}^2$                       C)  $0.018 \text{ ft}^2$                       D)  $0.36 \text{ ft}^2$

Answer: C

210)



Find the area of the trapezoid.

A)  $276 \text{ ft}^2$

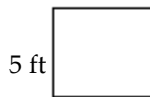
B)  $126.5 \text{ ft}^2$

C)  $138 \text{ ft}^2$

D)  $149.5 \text{ ft}^2$

Answer: C

211)



Find the area of the square.

A)  $20 \text{ ft}^2$

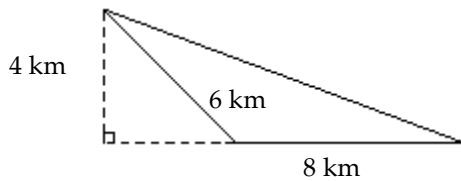
B)  $9 \text{ ft}^2$

C)  $25 \text{ ft}^2$

D)  $10 \text{ ft}^2$

Answer: C

212)



Find the area of the triangle.

A)  $12 \text{ km}^2$

B)  $16 \text{ km}^2$

C)  $36 \text{ km}^2$

D)  $32 \text{ km}^2$

Answer: B

213) The length of a rectangle is 106 in. and the width is 60 in. Find its perimeter.

A) 6360 in.

B) 272 in.

C) 166 in.

D) 332 in.

Answer: D

214) The width of a room is 7 feet, and the area of the room is 98 square feet. Find the room's length.

A) 91 feet

B) 42 feet

C) 686 feet

D) 14 feet

Answer: D



**Solve.**

215) To trim the edges of a rectangular table cloth, 30 feet of lace are needed. The length of the table cloth is exactly one-half its width. What are the dimensions of the table cloth?

A) length:  $2\frac{1}{2}$  feet; width: 5 feet

B) length: 10 feet; width: 5 feet

C) length: 10 feet; width: 20 feet

D) length: 5 feet; width: 10 feet

Answer: D

216) A rectangular carpet has a perimeter of 186 inches. The length of the carpet is 63 inches more than the width. What are the dimensions of the carpet?

A) 85.5 by 93 inches

B) 54 by 69 inches

C) 78 by 93 inches

D) 78 by 15 inches

Answer: D

217) The length of a rectangular room is 5 feet longer than twice the width. If the room's perimeter is 154 feet, what are the room's dimensions?

A) Width = 48 ft; length = 106 ft

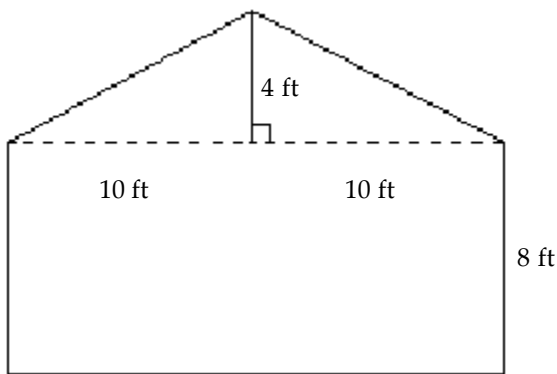
B) Width = 36 ft; length = 41 ft

C) Width = 24 ft; length = 53 ft

D) Width = 29 ft; length = 63 ft

Answer: C

218)



The drawing shows the end of a building that is to be bricked. If the area of the side of a brick used is  $\frac{1}{8}$  sq. ft,

find the number of bricks needed to completely cover the side of the building.

A) 1600 bricks

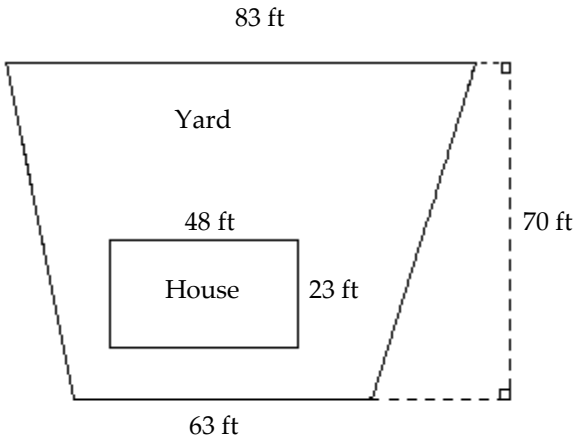
B) 1920 bricks

C) 25 bricks

D) 200 bricks

Answer: A

219)



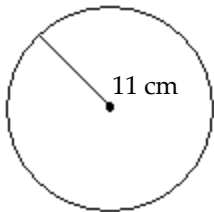
A homeowner wants to know how much grass seed to buy. First the size of the yard must be determined. Use the drawing to determine how many square feet are in the yard.

- A)  $9116 \text{ ft}^2$       B)  $5110 \text{ ft}^2$       C)  $4006 \text{ ft}^2$       D)  $4706 \text{ ft}^2$

Answer: C

Use the formula for the area or circumference of a circle to solve the problem. Where applicable, express answers in terms of  $\pi$ .

220)

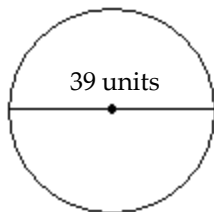


Find the area of the circle.

- A)  $15\pi \text{ cm}^2$       B)  $121\pi \text{ cm}^2$       C)  $22\pi \text{ cm}^2$       D)  $44\pi \text{ cm}^2$

Answer: B

221)

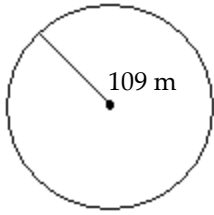


Give the exact circumference.

- A)  $39\pi$  units      B)  $1521\pi$  units      C)  $78\pi$  units      D)  $19.5\pi$  units

Answer: A

222)



Give the exact circumference.

- A)  $54.5\pi$  m                      B)  $218\pi$  m                      C)  $109\pi$  m                      D)  $11,881\pi$  m

Answer: B

223) The circumference of a circle is  $16\pi$  meters. Find the circle's radius.

- A)  $\pi$  m                      B) 8 m                      C) 16 m                      D)  $8\pi$  m

Answer: B

224) The circumference of a circle is  $32\pi$  meters. Find the circle's diameter.

- A)  $16\pi$  m                      B)  $\pi$  m                      C) 16 m                      D) 32 m

Answer: D

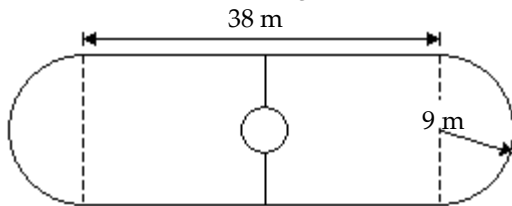
**Solve.**

225) Which one of the following is a better buy: a 14-inch pizza for \$10 or two 6-inch pizzas for \$9.

- A) 14-in. pizza                      B) two 6-in. pizzas                      C) equivalent buys

Answer: A

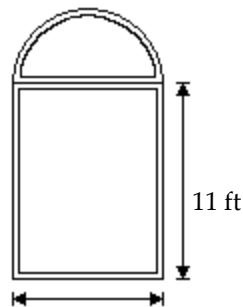
226) Find the area of the skating rink. Use  $\pi = 3.14$  and round to the nearest tenth.



- A) 938.3 sq. m                      B) 1192.7 sq. m                      C) 596.3 sq. m                      D) 850.7 sq. m

Answer: A

227) Find the area of the window. Use  $\pi = 3.14$  and round to the nearest tenth.



- A) 69.1 sq. ft                      B) 50.3 sq. ft                      C) 45.6 sq. ft                      D) 94.2 sq. ft

Answer: B

228) The rectangular part of the field shown below is 152 yd long and the diameter of each semicircle is 12 yd. Find the cost of fertilizing the field at \$0.50 per square yard. Use  $\pi = 3.14$  and round to the nearest cent.

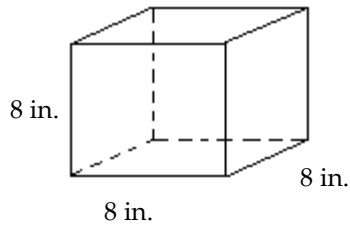


- A) \$512.52                      B) \$921.42                      C) \$968.52                      D) \$1138.08

Answer: C

Find the volume of the figure. Where applicable, express answers in terms of  $\pi$ .

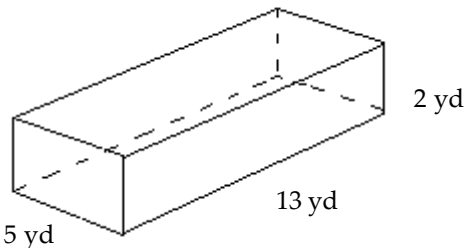
229)



- A) 512 in.<sup>3</sup>                      B) 128 in.<sup>3</sup>                      C) 24 in.<sup>3</sup>                      D) 64 in.<sup>3</sup>

Answer: A

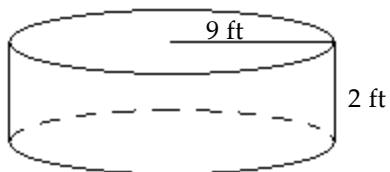
230)



- A) 50 yd<sup>3</sup>                      B) 130 yd<sup>3</sup>                      C) 845 yd<sup>3</sup>                      D) 52 yd<sup>3</sup>

Answer: B

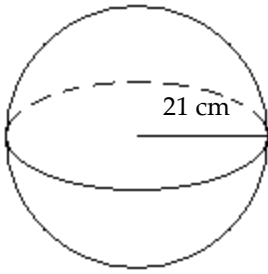
231)



- A)  $162\pi$  ft<sup>3</sup>                      B)  $81\pi$  ft<sup>3</sup>                      C)  $18\pi$  ft<sup>3</sup>                      D) 162 ft<sup>3</sup>

Answer: A

232)



A)  $1372\pi \text{ cm}^3$

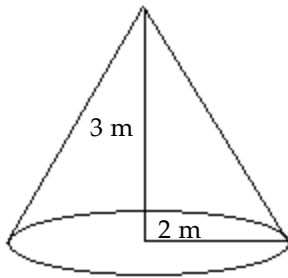
B)  $12,348\pi \text{ cm}^3$

C)  $37,044\pi \text{ cm}^3$

D)  $9261\pi \text{ cm}^3$

Answer: B

233)



A)  $6\pi \text{ m}^3$

B)  $2\pi \text{ m}^3$

C)  $12\pi \text{ m}^3$

D)  $4\pi \text{ m}^3$

Answer: D

**Solve.**

234) A water reservoir is shaped like a rectangular solid with a base that is 6 meters by 2 meters, and a vertical height of 9 meters. How much water is in the reservoir if it is completely full?

A)  $324 \text{ m}^3$

B)  $24 \text{ m}^3$

C)  $108 \text{ m}^3$

D)  $162 \text{ m}^3$

Answer: C

235) Find the volume of an aluminum can that has a radius of 5 centimeters and a height of 13 centimeters. Use  $\pi = 3.14$  and round to the nearest tenth.

A)  $4082 \text{ cm}^3$

B)  $1020.5 \text{ cm}^3$

C)  $408.2 \text{ cm}^3$

D)  $204.1 \text{ cm}^3$

Answer: B

236) The outside of a water storage tank is in the shape of a sphere. If the radius is 19.4 feet, approximate the volume of the tank in cubic feet. Use  $\pi = 3.14$  and round to the nearest hundredth, if necessary.

A)  $1181.77 \text{ ft}^3$

B)  $30,568.46 \text{ ft}^3$

C)  $1575.69 \text{ ft}^3$

D)  $22,926.35 \text{ ft}^3$

Answer: B

**Use the relationship among the three angles of any triangle to solve the problem.**

237) Two angles of a triangle are  $10^\circ$  and  $50^\circ$ . Find the third angle.

A)  $60^\circ$

B)  $120^\circ$

C)  $300^\circ$

D)  $30^\circ$

Answer: B

- 238) Two angles of a triangle are  $39^\circ$  and  $91^\circ$ . Find the third angle.  
A)  $40^\circ$                       B)  $50^\circ$                       C)  $230^\circ$                       D)  $130^\circ$

Answer: B

- 239) One of the base angles of an isosceles triangle is  $24^\circ$ . Find the measures of the other two angles. (An isosceles triangle has two equal base angles.)  
A)  $24^\circ, 42^\circ$                       B)  $24^\circ, 312^\circ$                       C)  $24^\circ, 48^\circ$                       D)  $24^\circ, 132^\circ$

Answer: D

- 240) One angle of a triangle is 3 times as large as another. The measure of the third angle is  $55^\circ$  greater than that of the smallest angle. Find the measure of each angle.  
A)  $35^\circ, 105^\circ, 40^\circ$                       B)  $25^\circ, 75^\circ, 80^\circ$                       C)  $25^\circ, 75^\circ, 55^\circ$                       D)  $30^\circ, 90^\circ, 60^\circ$

Answer: B

- 241) A triangle has angles of  $(4x)^\circ$ ,  $(3x + 8)^\circ$ , and  $(2x + 19)^\circ$ . Find the measure of each angle.  
A)  $53^\circ, 59^\circ, 68^\circ$                       B)  $53^\circ, 51^\circ, 68^\circ$                       C)  $17^\circ, 59^\circ, 68^\circ$                       D)  $17^\circ, 53^\circ, 68^\circ$

Answer: A

**Find the measure of the indicated angle.**

- 242) Find the measure of the complement of  $27^\circ$ .  
A)  $333^\circ$                       B)  $243^\circ$                       C)  $153^\circ$                       D)  $63^\circ$

Answer: D

- 243) Find the measure of the supplement of  $32^\circ$ .  
A)  $148^\circ$                       B)  $328^\circ$                       C)  $238^\circ$                       D)  $58^\circ$

Answer: A

- 244) Find the measure of the supplement of  $133^\circ$ .  
A)  $227^\circ$                       B)  $47^\circ$                       C) not possible                      D)  $137^\circ$

Answer: B

- 245) The angle's measure is  $40^\circ$  more than that of its complement.  
A)  $110^\circ$                       B)  $70^\circ$                       C)  $25^\circ$                       D)  $65^\circ$

Answer: D

- 246) The angle's measure is  $20^\circ$  more than that of its supplement.  
A)  $35^\circ$                       B)  $100^\circ$                       C)  $55^\circ$                       D)  $80^\circ$

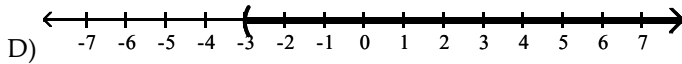
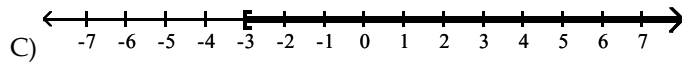
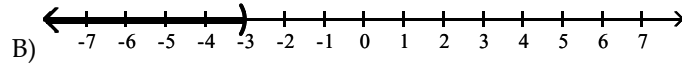
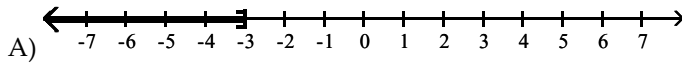
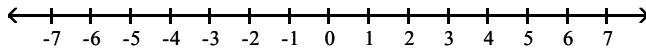
Answer: B

- 247) The angle's measure is  $20^\circ$  more than triple that of its supplement.  
A)  $95^\circ$                       B)  $140^\circ$                       C)  $130^\circ$                       D)  $85^\circ$

Answer: B

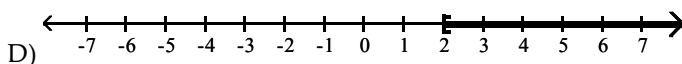
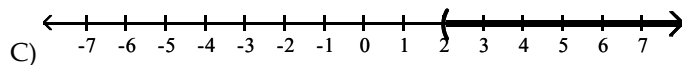
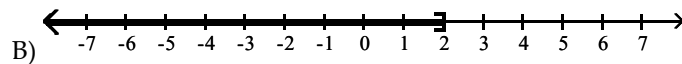
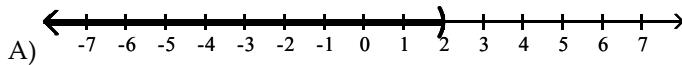
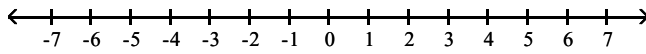
Graph the solution of the inequality on a number line.

248)  $x > -3$



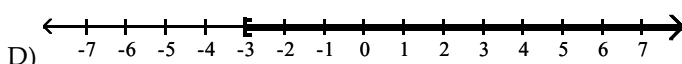
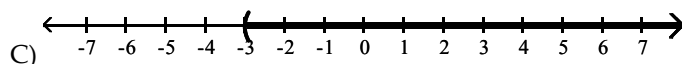
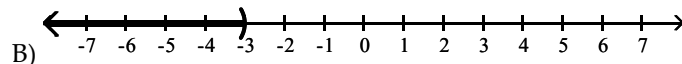
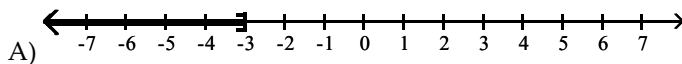
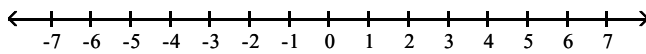
Answer: D

249)  $x < 2$



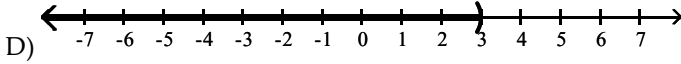
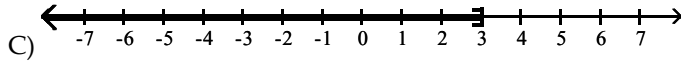
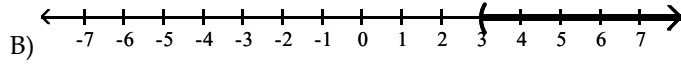
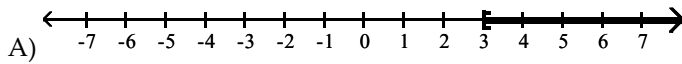
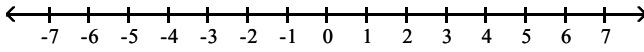
Answer: A

250)  $x \geq -3$



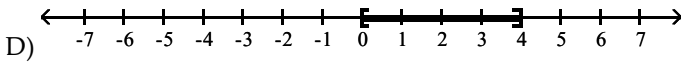
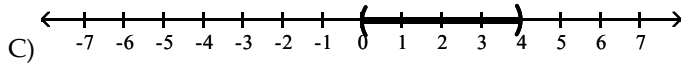
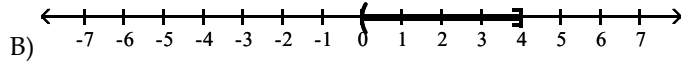
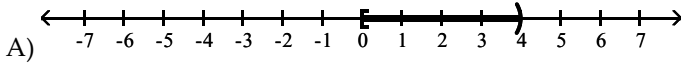
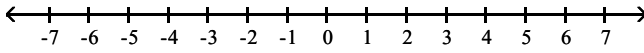
Answer: D

251)  $x \leq 3$



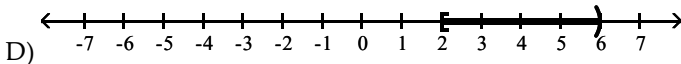
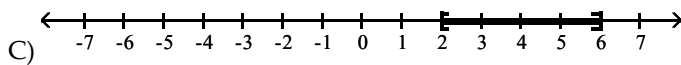
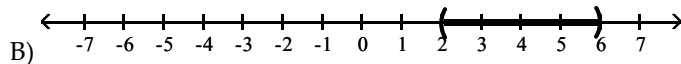
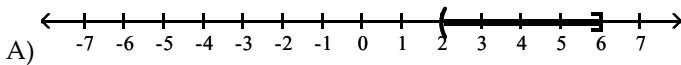
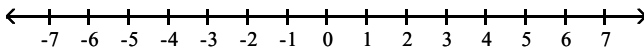
Answer: C

252)  $0 \leq x \leq 4$



Answer: D

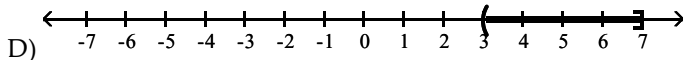
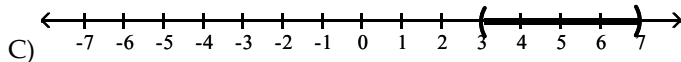
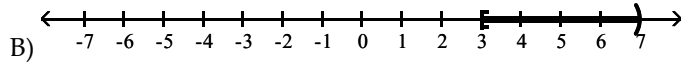
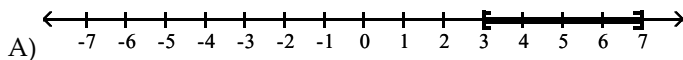
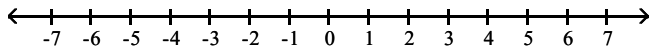
253)  $2 < x < 6$



Answer: B



254)  $3 \leq x < 7$



Answer: B

Express the solution set of the inequality in interval notation.

255)  $x \geq 4$

A)  $(4, \infty)$

B)  $(-\infty, 4]$

C)  $[4, \infty)$

D)  $(-\infty, 4)$

Answer: C

256)  $x > 22$

A)  $[22, \infty)$

B)  $(22, \infty)$

C)  $(-\infty, 22]$

D)  $(-\infty, 22)$

Answer: B

257)  $x > -5$

A)  $[-5, \infty)$

B)  $(-\infty, -5]$

C)  $(-\infty, -5)$

D)  $(-5, \infty)$

Answer: D

258)  $x \geq -18$

A)  $(-\infty, -18]$

B)  $(-\infty, -18)$

C)  $(-18, \infty)$

D)  $[-18, \infty)$

Answer: D

259)  $x < 6$

A)  $(6, \infty)$

B)  $[6, \infty)$

C)  $(-\infty, 6)$

D)  $(-\infty, 6]$

Answer: C

260)  $x \leq 11$

A)  $(-\infty, 11]$

B)  $[11, \infty)$

C)  $(11, \infty)$

D)  $(-\infty, 11)$

Answer: A

261)  $x \leq -3$

A)  $(-\infty, -3)$

B)  $(-\infty, -3]$

C)  $[-3, \infty)$

D)  $(-3, \infty)$

Answer: B

262)  $x < -18$

A)  $[-18, \infty)$

B)  $(-\infty, -18]$

C)  $(-18, \infty)$

D)  $(-\infty, -18)$

Answer: D

263)  $x < \frac{4}{9}$

A)  $\left[\frac{4}{9}, \infty\right)$

B)  $\left(-\infty, \frac{4}{9}\right]$

C)  $\left(-\infty, \frac{4}{9}\right]$

D)  $\left[\frac{4}{9}, \infty\right)$

Answer: B

264)  $x \geq \frac{5}{4}$

A)  $\left(-\infty, \frac{5}{4}\right]$

B)  $\left(-\infty, \frac{5}{4}\right]$

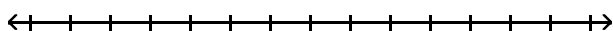
C)  $\left[\frac{5}{4}, \infty\right)$

D)  $\left[\frac{5}{4}, \infty\right)$

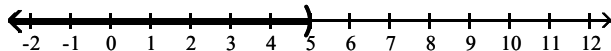
Answer: D

Use the addition property of inequality to solve the inequality and graph the solution set on a number line.

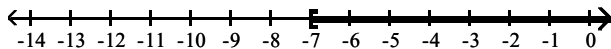
265)  $x + 6 \leq -1$



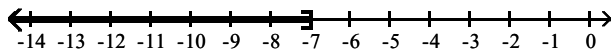
A)  $(-\infty, 5)$



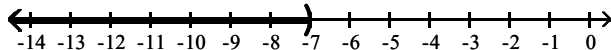
B)  $[-7, \infty)$



C)  $(-\infty, -7]$

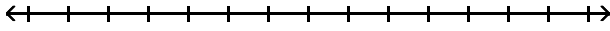


D)  $(-\infty, -7)$

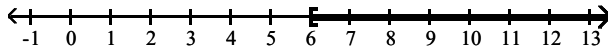


Answer: C

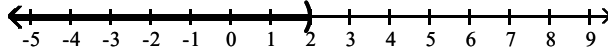
266)  $x - 2 \geq 4$



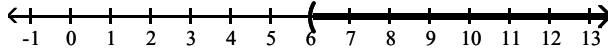
A)  $[6, \infty)$



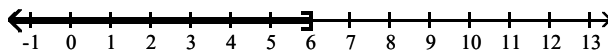
B)  $(-\infty, 2)$



C)  $(6, \infty)$

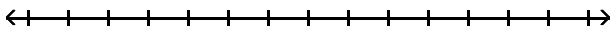


D)  $(-\infty, 6]$

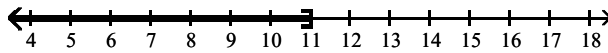


Answer: A

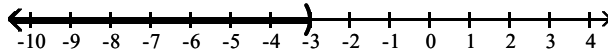
267)  $x + 7 < 4$



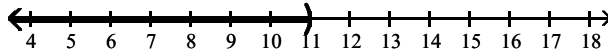
A)  $(-\infty, 11]$



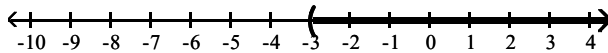
B)  $(-\infty, -3)$



C)  $(-\infty, 11)$

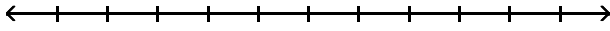


D)  $(-3, \infty)$

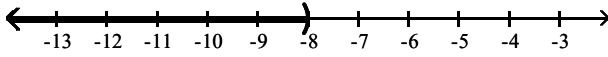


Answer: B

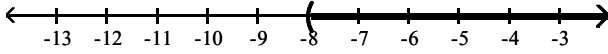
268)  $7 - x > -1$



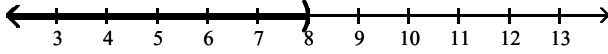
A)  $(-\infty, -8)$



B)  $(-8, \infty)$



C)  $(-\infty, 8)$

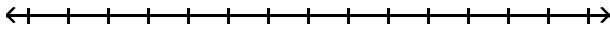


D)  $(8, \infty)$

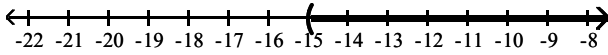


Answer: C

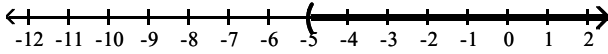
269)  $4x - 5 > 3x - 10$



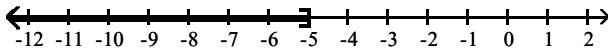
A)  $(-15, \infty)$



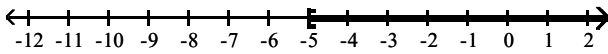
B)  $(-5, \infty)$



C)  $(-\infty, -5]$

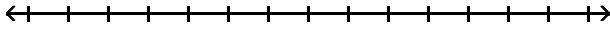


D)  $[-5, \infty)$

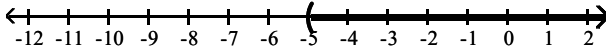


Answer: B

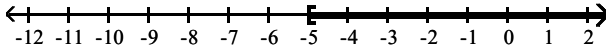
270)  $5x - 6 \geq 4x - 11$



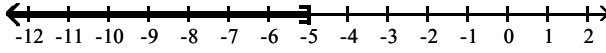
A)  $(-5, \infty)$



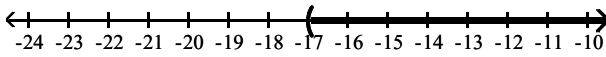
B)  $[-5, \infty)$



C)  $(-\infty, -5]$

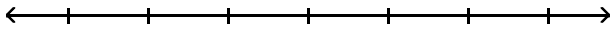


D)  $(-17, \infty)$

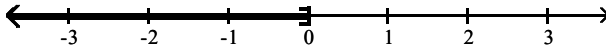


Answer: B

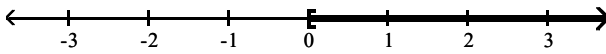
271)  $12x + 6 > 11x - 6$



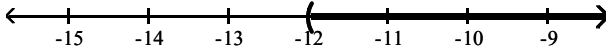
A)  $(-\infty, 0]$



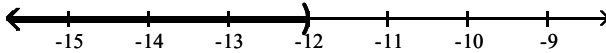
B)  $[0, \infty)$



C)  $(-12, \infty)$

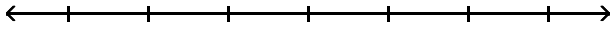


D)  $(-\infty, -12)$

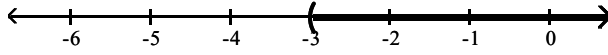


Answer: C

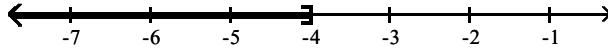
272)  $-3x - 12 \leq -4x - 16$



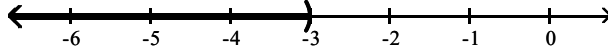
A)  $(-3, \infty)$



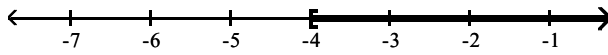
B)  $(-\infty, -4]$



C)  $(-\infty, -3)$



D)  $[-4, \infty)$



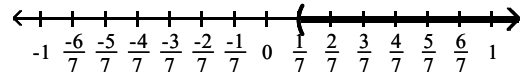
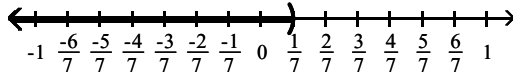
Answer: B

273)  $x + \frac{1}{21} > \frac{4}{21}$



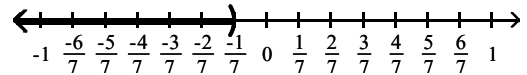
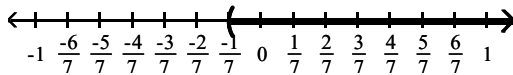
A)  $(-\infty, \frac{1}{7}]$

B)  $(\frac{1}{7}, \infty)$



C)  $(-\frac{1}{7}, \infty)$


D)  $(-\infty, -\frac{1}{7}]$



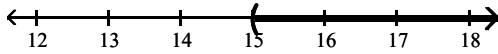
Answer: B

Use the multiplication property of inequality to solve the inequality and graph the solution set on a number line.

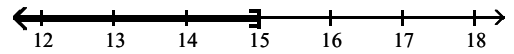
274)  $\frac{x}{3} \geq 5$



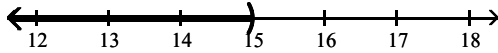
A)  $(15, \infty)$



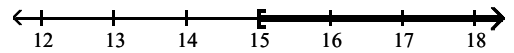
B)  $(-\infty, 15]$



C)  $(-\infty, 15)$

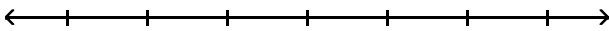


D)  $[15, \infty)$

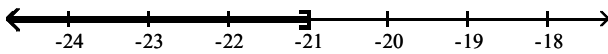


Answer: D

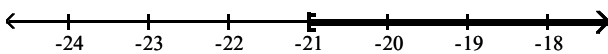
275)  $\frac{y}{3} \leq -7$



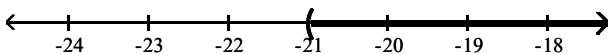
A)  $(-\infty, -21]$



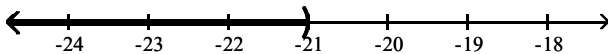
B)  $[-21, \infty)$



C)  $(-21, \infty)$

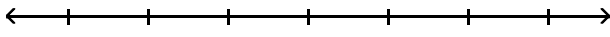


D)  $(-\infty, -21)$

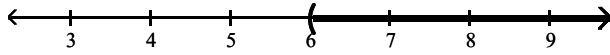


Answer: A

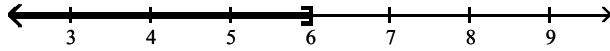
276)  $\frac{y}{3} > 2$



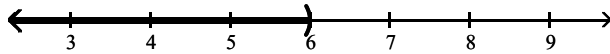
A)  $(6, \infty)$



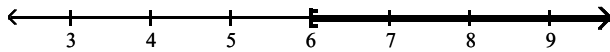
B)  $(-\infty, 6]$



C)  $(-\infty, 6)$

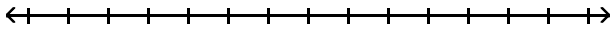


D)  $[6, \infty)$

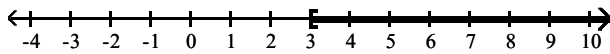


Answer: A

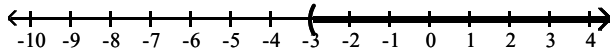
277)  $4x \geq 12$



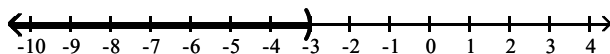
A)  $[3, \infty)$



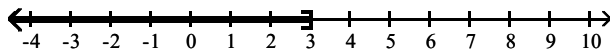
B)  $(-3, \infty)$



C)  $(-\infty, -3)$



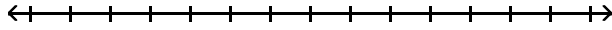
D)  $(-\infty, 3]$



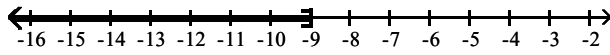
Answer: A



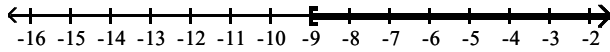
278)  $9x < -81$



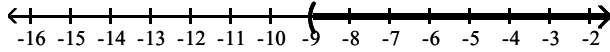
A)  $(-\infty, -9]$



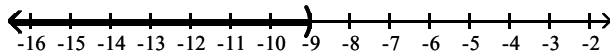
B)  $[-9, \infty)$



C)  $(-9, \infty)$

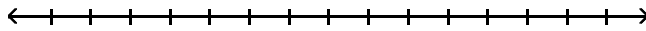


D)  $(-\infty, -9)$

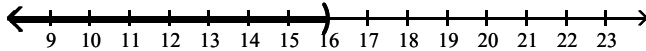


Answer: D

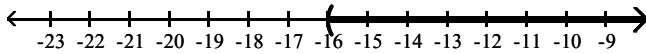
279)  $-6x > 96$



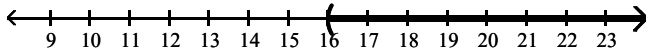
A)  $(-\infty, 16)$



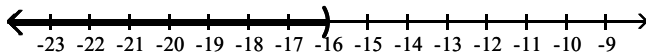
B)  $(-16, \infty)$



C)  $(16, \infty)$

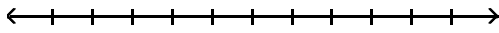


D)  $(-\infty, -16)$



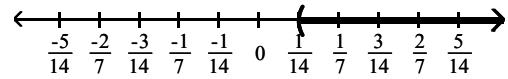
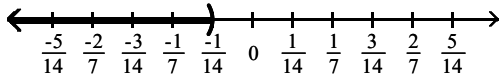
Answer: D

280)  $-2x < -\frac{1}{7}$



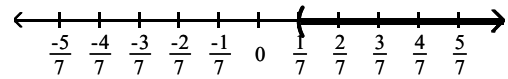
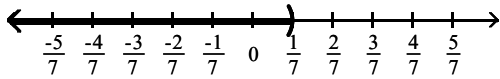
A)  $\left(-\infty, -\frac{1}{14}\right)$

B)  $\left(\frac{1}{14}, \infty\right)$



C)  $\left(-\infty, \frac{1}{7}\right)$

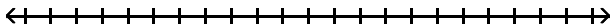
D)  $\left(\frac{1}{7}, \infty\right)$



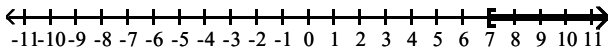
Answer: B

Use both the addition and multiplication properties of inequality to solve the inequality. Graph the solution set on a number line.

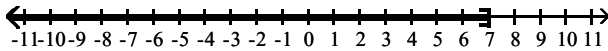
281)  $2x + 9 < 23$



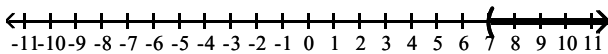
A)  $[7, \infty)$



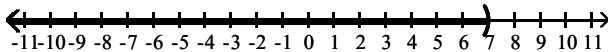
B)  $(-\infty, 7]$



C)  $(7, \infty)$

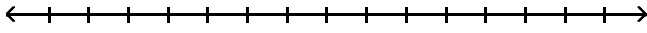


D)  $(-\infty, 7)$

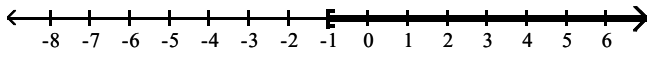


Answer: D

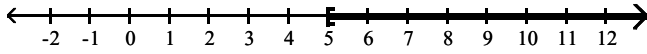
282)  $2x - 6 \geq 4$



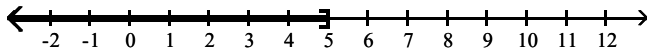
A)  $[-1, \infty)$



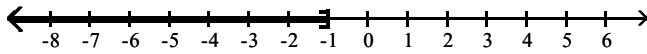
B)  $[5, \infty)$



C)  $(-\infty, 5]$

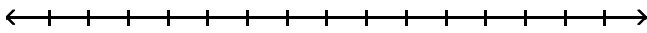


D)  $(-\infty, -1]$

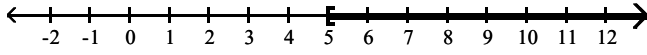


Answer: B

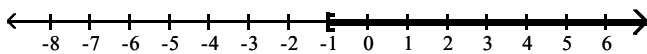
283)  $9 - 3x \geq -6$



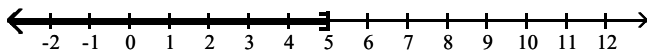
A)  $[5, \infty)$



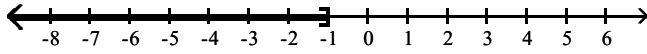
B)  $[-1, \infty)$



C)  $(-\infty, 5]$

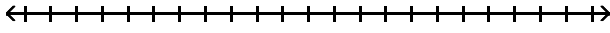


D)  $(-\infty, -1]$

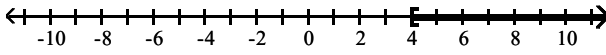


Answer: C

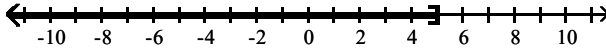
284)  $6 - 2(2 - x) \leq 10$



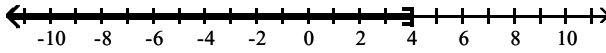
A)  $[4, \infty)$



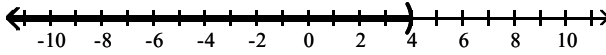
B)  $(-\infty, 5]$



C)  $(-\infty, 4]$

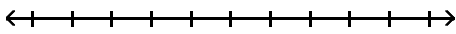


D)  $(-\infty, 4)$

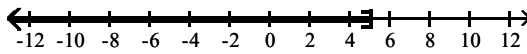


Answer: C

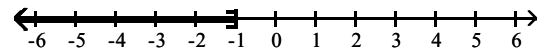
285)  $8x - 8 \leq 3x - 13$



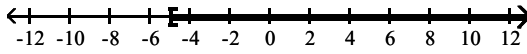
A)  $(-\infty, 5]$



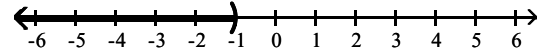
B)  $(-\infty, -1]$



C)  $[-5, \infty)$

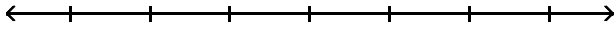


D)  $(-\infty, -1)$

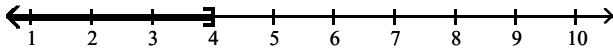


Answer: B

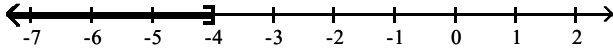
286)  $13t + 5 \geq 11t - 3$



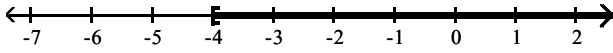
A)  $(-\infty, 4]$



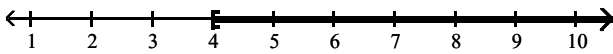
B)  $(-\infty, -4]$



C)  $[-4, \infty)$

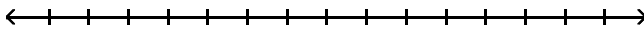


D)  $[4, \infty)$

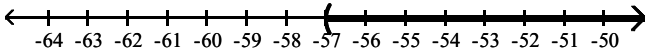


Answer: C

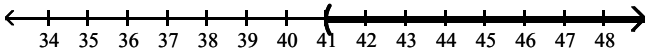
287)  $6x - 8 < 7(x - 7)$



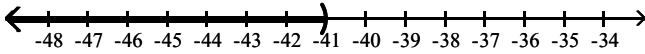
A)  $(-57, \infty)$



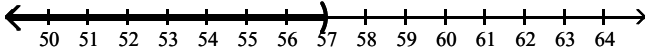
B)  $(41, \infty)$



C)  $(-\infty, -41)$

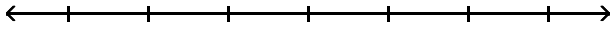


D)  $(-\infty, 57)$

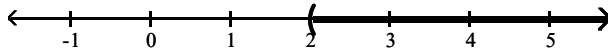


Answer: B

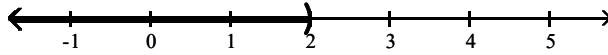
288)  $12x - 2 > 2(5x + 1)$



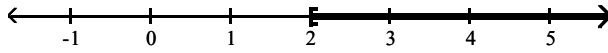
A)  $(2, \infty)$



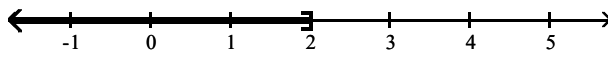
B)  $(-\infty, 2)$



C)  $[2, \infty)$

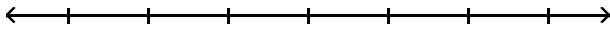


D)  $(-\infty, 2]$

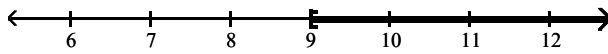


Answer: A

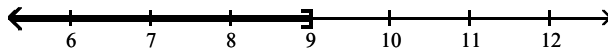
289)  $-5(4x + 15) < -25x - 30$



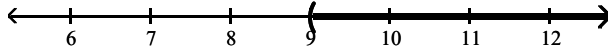
A)  $[9, \infty)$



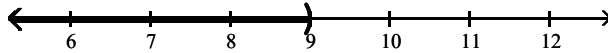
B)  $(-\infty, 9]$



C)  $(9, \infty)$

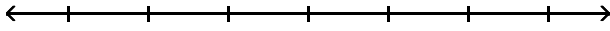


D)  $(-\infty, 9)$

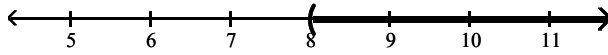


Answer: D

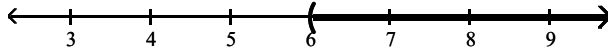
290)  $-9x + 2 + 8x < 6 - 3x + 8$



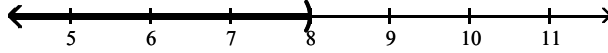
A)  $(8, \infty)$



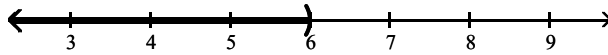
B)  $(6, \infty)$



C)  $(-\infty, 8)$

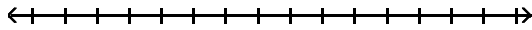


D)  $(-\infty, 6)$

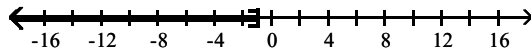


Answer: D

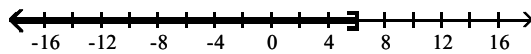
291)  $\frac{x}{2} + 5 \leq 8$



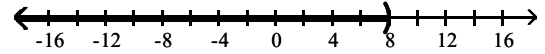
A)  $(-\infty, -1]$



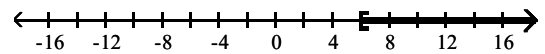
C)  $(-\infty, 6]$



B)  $(-\infty, 8)$

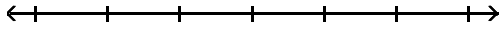


D)  $[6, \infty)$

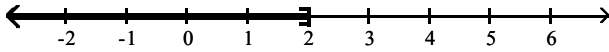


Answer: C

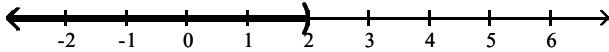
292)  $15n + 24 \leq 3(4n + 10)$



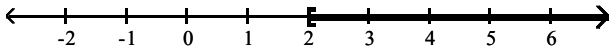
A)  $(-\infty, 2]$



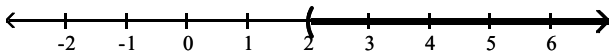
B)  $(-\infty, 2)$



C)  $[2, \infty)$

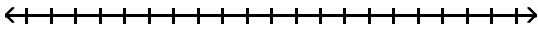


D)  $(2, \infty)$

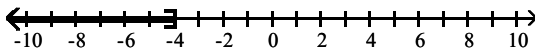


Answer: A

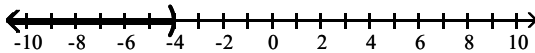
293)  $\frac{2}{3}(2x - 1) < -6$



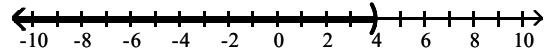
A)  $(-\infty, -4]$



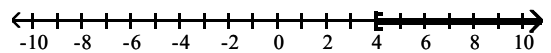
C)  $(-\infty, -4)$



B)  $(-\infty, 4)$



D)  $[4, \infty)$



Answer: C

**Solve the inequality.**

294)  $x + 5 \geq x - 2$

A)  $\left[-\frac{7}{2}, \infty\right)$

B)  $\left[-\infty, -\frac{7}{2}\right]$

C)  $(-\infty, \infty)$

D)  $\emptyset$

Answer: C

295)  $10x + 13 > 10(x + 11)$

A)  $(-\infty, \infty)$

B)  $\emptyset$

C)  $(13, \infty)$

D)  $(-\infty, 13)$

Answer: B

296)  $4x - 11 > 4(x - 9)$

A)  $(-\infty, \infty)$

B)  $(11, \infty)$

C)  $(-\infty, 11)$

D)  $\emptyset$

Answer: A



- 297)  $3x \leq 3(x + 9)$   
 A)  $(-\infty, \infty)$                       B)  $(-\infty, 9]$                       C)  $\emptyset$                       D)  $(-\infty, 3]$   
 Answer: A
- 298)  $6x - 5 \geq 5(x - 1)$   
 A)  $(-\infty, \infty)$                       B)  $(-\infty, 0]$                       C)  $\emptyset$                       D)  $[0, \infty)$   
 Answer: D
- 299)  $-3(-3 - x) < 5x + 21 - 12 - 2x$   
 A)  $(-\infty, \infty)$                       B)  $(-\infty, 0)$                       C)  $\emptyset$                       D)  $(-\infty, 9)$   
 Answer: C

**Solve the problem.**

- 300) Claire has received scores of 85, 88, 87, and 75 on her algebra tests. What is the minimum score she must receive on the fifth test to have an overall test score average of at least 83? (Hint: The average of a list of numbers is their sum divided by the number of numbers in the list.)  
 A) 80                      B) 78                      C) 81                      D) 79  
 Answer: A
- 301) A certain car has a weight limit for all passengers and cargo of 1151 pounds. The four passengers in the car weigh an average of 160 pounds. Use an inequality to find the maximum weight of the cargo that the car can handle.  
 A) at most  $\frac{1151}{2}$  lb                      B) at most 511 lb                      C) at most  $\frac{1151}{160}$  lb                      D) at most 991 lb  
 Answer: B
- 302) A certain store has a fax machine available for use by its customers. The store charges \$2.05 to send the first page and \$0.60 for each subsequent page. Use an inequality to find the maximum number of pages that can be faxed for \$10.45  
 A) at most 55 pages                      B) at most 5 pages                      C) at most 17 pages                      D) at most 14 pages  
 Answer: D
- 303) An archery set containing a bow and three arrows costs \$74. Additional arrows can be purchased for \$10 each. Gerri has \$234 to spend on the set and additional arrows. Including the arrows in the set, what is the maximum total number of arrows Gerri can purchase?  
 A) at most 23 arrows                      B) at most 16 arrows                      C) at most 3 arrow(s)                      D) at most 19 arrows  
 Answer: D
- 304) When making a long distance call from a certain pay phone, the first three minutes of a call cost \$1.75. After that, each additional minute or portion of a minute of that call costs \$0.30. Use an inequality to find the maximum number of minutes one can call long distance for \$4.75.  
 A) at most 10 min                      B) at most 13 min                      C) at most 16 min                      D) at most 3 min  
 Answer: B
- 305) It takes 23 minutes to set up a candy making machine. Once the machine is set up, it produces 15 candies per minute. Use an inequality to find the number of candies that can be produced in 2 hours if the machine has not yet been set up.  
 A) at most 1455 candies                      B) at most 2415 candies  
 C) at most 30 candies                      D) at most 690 candies  
 Answer: A

**Solve the equation.**

306)  $-9x + 5 = -76$

A) {3}

B) {-72}

C) {-68}

D) {9}

Answer: D

307)  $8x + 10 = 6x - 4$

A) {-7}

B)  $\left\{\frac{7}{3}\right\}$

C)  $\left\{\frac{1}{7}\right\}$

D)  $\left\{-\frac{1}{7}\right\}$

Answer: A

308)  $-2x + 7(3x - 3) = 3 - 5x$

A) {-1}

B)  $\left\{-\frac{3}{4}\right\}$

C)  $\left\{-\frac{9}{7}\right\}$

D) {1}

Answer: D

309)  $5(2y - 3) = 9(y + 4)$

A) {-21}

B) {21}

C) {26}

D) {51}

Answer: D

310)  $\frac{1}{8}x = 8$

A) {1}

B) {64}

C) {15}

D) {16}

Answer: B

311)  $\frac{x}{5} + \frac{6}{5} = \frac{x}{7} + \frac{8}{7}$

A) {1}

B) {-1}

C) {-2}

D) {2}

Answer: B

312)  $1.3 - 3.3x = -12.7 - 1.3x$

A) {4.6}

B) {7}

C) {-16}

D) {4.2}

Answer: B

**Solve the problem.**

313) In one state, speeding fines are determined by the formula  $F = 6(x - 60) + 75$ , where F is the cost, in dollars, of the fine if a person is caught driving x miles per hour. If the fine comes to \$129, how fast was the person driving?

A) 69 mph

B) 79 mph

C) 71 mph

D) 67 mph

Answer: A

**Solve the formula for the specified variable.**

314)  $V = lwh$  for h

A)  $h = \frac{Vl}{w}$

B)  $h = \frac{lw}{V}$

C)  $h = \frac{V}{lw}$

D)  $h = Vlw$

Answer: C

315)  $w = \frac{P - 2l}{2}$  for  $l$

A)  $l = 2P - 4w$

B)  $l = \frac{2}{P - 2w}$

C)  $l = \frac{P + 2w}{2}$

D)  $l = \frac{P - 2w}{2}$

Answer: D

**Solve the problem.**

316) What is 9% of 50?

A) 450

B) 0.45

C) 4.5

D) 45

Answer: C

317) 21 is 150% of what?

A) 31.5

B) 14

C) 0.14

D) 3150

Answer: B

318) 1.8 is what percent of 2 ?

A) 3.6%

B) 360%

C) 90%

D) 0.9%

Answer: C

319) Four times a number added to 7 times the number is 55. What is the number?

A) 0.5

B) 7.9

C) -7.9

D) 5

Answer: D

320) The president of a certain university makes three times as much money as one of the department heads. If the total of their salaries is \$260,000, find each worker's salary.

A) president's salary = \$65,000; department head's salary = \$195,000

B) president's salary = \$19,500; department head's salary = \$6500

C) president's salary = \$195,000; department head's salary = \$65,000

D) president's salary = \$130,000; department head's salary = \$65,000

Answer: C

321) A promotional deal for long distance phone service charges a \$15 basic fee plus \$0.05 per minute for all calls. If Joe's phone bill was \$46 under this promotional deal, how many minutes of phone calls did he make? Round to the nearest integer, if necessary.

A) 2 min

B) 620 min

C) 6 min

D) 1220 min

Answer: B

322) A rectangular carpet has a perimeter of 248 inches. The length of the carpet is 72 inches more than the width. What are the dimensions of the carpet?

A) length: 101 in.; width: 75 in.

B) length: 124 in.; width: 111 in.

C) length: 124 in.; width: 98 in.

D) length: 98 in.; width: 26 in.

Answer: D

323) Sales at a local ice cream shop went up 30% in 5 years. If 18,000 ice cream cones were sold in the current year, find the number of ice cream cones sold 5 years ago. Round to the nearest cone when necessary.

A) 12,600 ice cream cones

B) 60,000 ice cream cones

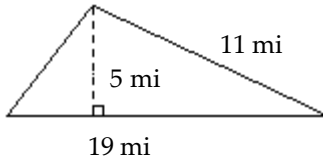
C) 5400 ice cream cones

D) 13,846 ice cream cones

Answer: D

Find the area of the figure.

324)



A)  $27.5 \text{ mi}^2$

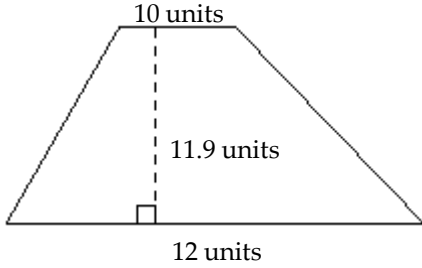
B)  $104.5 \text{ mi}^2$

C)  $95 \text{ mi}^2$

D)  $47.5 \text{ mi}^2$

Answer: D

325)



A)  $261.8 \text{ units}^2$

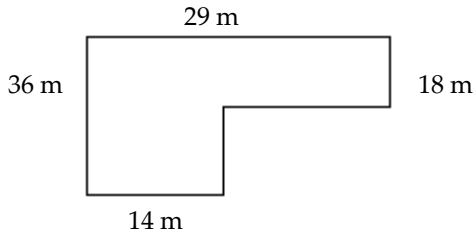
B)  $142.8 \text{ units}^2$

C)  $130.9 \text{ units}^2$

D)  $119 \text{ units}^2$

Answer: C

326)



A)  $720 \text{ m}^2$

B)  $774 \text{ m}^2$

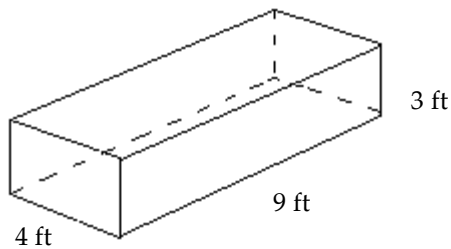
C)  $792 \text{ m}^2$

D)  $990 \text{ m}^2$

Answer: B

Find the volume of the figure. Where applicable, express answers in terms of  $\pi$ .

327)



A)  $108 \text{ ft}^3$

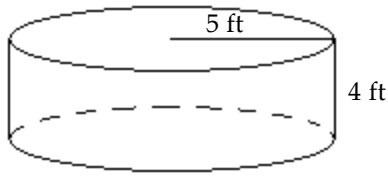
B)  $324 \text{ ft}^3$

C)  $48 \text{ ft}^3$

D)  $81 \text{ ft}^3$

Answer: A

328)



A)  $20\pi \text{ ft}^3$

B)  $100\pi \text{ ft}^3$

C)  $25\pi \text{ ft}^3$

D)  $100 \text{ ft}^3$

Answer: B

**Solve the problem.**

329) What will it cost to cover a rectangular floor measuring 90 feet by 70 feet with square tiles that measure 3 feet on each side if a box of 10 tiles costs \$16 per box?

A) \$560

B) \$1120

C) \$53

D) \$3360

Answer: B

330) A sailboat has a triangular sail with an area of 144 square feet and a base that measures 12 feet. Find the height of the sail.

A) 48 ft

B) 24 ft

C) 12 ft

D) 72 ft

Answer: B

331) In a triangle, one angle is 2 times as large as another. The measure of the third angle is  $100^\circ$  greater than that of the smallest angle. Find the measure of each angle.

A)  $25^\circ, 50^\circ, 105^\circ$

B)  $20^\circ, 40^\circ, 100^\circ$

C)  $20^\circ, 40^\circ, 120^\circ$

D)  $30^\circ, 60^\circ, 90^\circ$

Answer: C

332) How many degrees are there in an angle that measures  $24^\circ$  more than the measure of its complement?

A)  $102^\circ$

B)  $78^\circ$

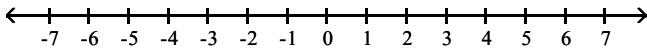
C)  $57^\circ$

D)  $33^\circ$

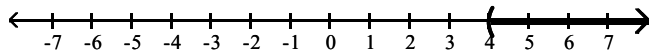
Answer: C

Express the solution set of the inequality in interval notation and graph the interval.

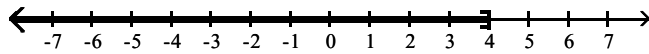
333)  $x > 4$



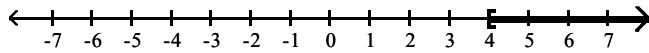
A)  $(4, \infty)$



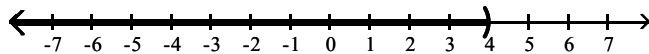
B)  $(-\infty, 4]$



C)  $[4, \infty)$

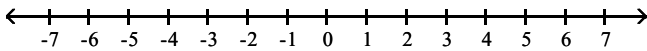


D)  $(-\infty, 4)$

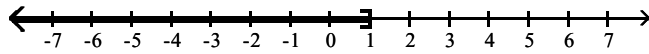


Answer: A

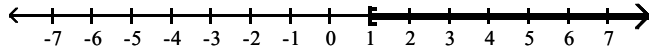
334)  $x \leq 1$



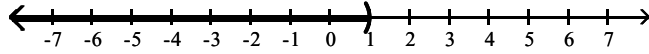
A)  $(-\infty, 1]$



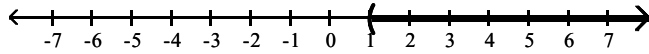
B)  $[1, \infty)$



C)  $(-\infty, 1)$



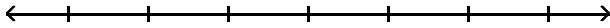
D)  $(1, \infty)$



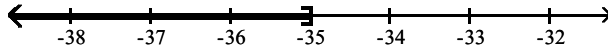
Answer: A

Solve the inequality and graph the solution set on a number line.

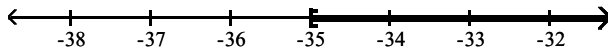
335)  $\frac{x}{5} \leq -7$



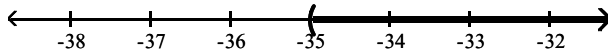
A)  $(-\infty, -35]$



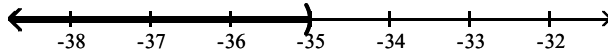
B)  $[-35, \infty)$



C)  $(-35, \infty)$

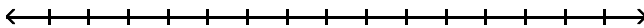


D)  $(-\infty, -35)$

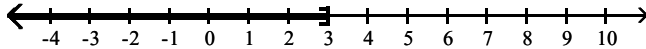


Answer: A

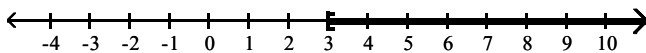
336)  $6 - 2x \geq -12$



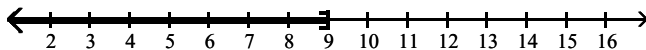
A)  $(-\infty, 3]$



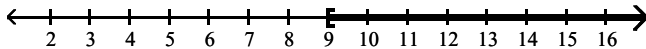
B)  $[3, \infty)$



C)  $(-\infty, 9]$

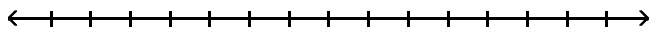


D)  $[9, \infty)$

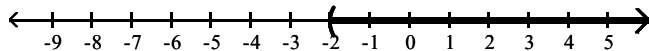


Answer: C

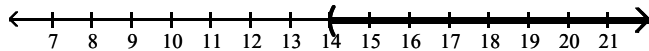
337)  $3x + 6 < 4(x + 2)$



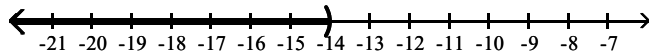
A)  $(-2, \infty)$



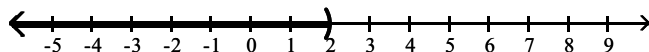
B)  $(14, \infty)$



C)  $(-\infty, -14)$



D)  $(-\infty, 2)$



Answer: A

**Solve the problem.**

338) Claire received scores of 85, 88, 87, and 75 on her algebra tests. What score must she receive on the fifth test to have an overall test score average of at least 83?

- A) at most 81                      B) at least 80                      C) at most 80                      D) at least 81

Answer: B

339) The length of a rectangle is 32 feet. For what widths is the perimeter less than 82 feet?

- A) widths less than 25 ft                      B) widths less than 50 ft  
 C) widths less than 18 ft                      D) widths less than 9 ft

Answer: D