

## CHAPTER 12

NAME \_\_\_\_\_

## TEST FORM A

CLASS \_\_\_\_\_ SCORE \_\_\_\_\_ GRADE \_\_\_\_\_

	ANSWERS
1. For the sequence whose $n$ th term is $a_n = (-1)^{n+1} \left(2 - \frac{1}{n}\right)^2$ , find $a_8$ .	1. _____
2. Find the first 5 terms of the sequence with general term $a_n = (-1)^{n+1}(3n - 4)$ .	2. _____
3. Find and evaluate: $\sum_{k=1}^4 (k^2 + k)$ .	3. _____
Write sigma notation. Answers may vary.	4. _____
4. $8 + 16 + 24 + 32 + 40$	5. _____
5. $\frac{1}{2} + \frac{1}{4} + \frac{1}{8} + \frac{1}{16} + \frac{1}{32} + \dots$	6. _____
6. Find the first 4 terms of the recursively defined sequence $a_1 = 2, a_{n+1} = 3a_n + 5$ .	7. _____
7. Find the 20th term of the arithmetic sequence $32, 28, 24, \dots$ .	8. _____
8. The 1st term of an arithmetic sequence is $-5$ and the 12th term is $\frac{1}{2}$ . Find the 10th term.	9. _____
9. Find the sum of the first 20 terms of the series $2 + 12 + 22 + \dots$ .	10. _____
10. Find the sum: $\sum_{k=1}^{24} (-2k - 1)$ .	11. _____
11. Find the 7th term of the geometric sequence $3, 15, 75, 375, \dots$ .	

## TEST FORM A

ANSWERS	
12. _____	12. For a geometric sequence, $r = 2$ and $S_6 = 315$ . Find $a_1$ .
13. _____	Find the sum, if it exists.
14. _____	13. $\sum_{k=1}^{10} 2^k$ 14. $100,000 + 80,000 + 64,000 + \dots$
15. _____	15. Find fraction notation for $5.\overline{01}$ .
16. _____	16. <i>Salvage Value.</i> The value of a piece of home care equipment is \$3000. Its salvage value each year is 75% of its value the year before. Give a sequence that lists the salvage value of the piece of equipment for each year of a 5-year period.
17. _____	17. <i>Hourly Wage.</i> Jayden accepts a job with a starting hourly wage of \$10.25, and is promised a raise of 20¢ per hour every month for two years. What will Jayden's hourly wage be at the end of the two-year period?
18. _____	18. <i>Amount of an Annuity.</i> To create a college fund, a parent makes a sequence of 15 yearly deposits of \$1200 each in a savings account on which interest is compounded annually at 3.5%. Find the amount of the annuity.
19. <u>See work.</u>	19. Use mathematical induction to prove that, for every natural number $n$ , $5 + 10 + 15 + \dots + 5n = \frac{5n(n+1)}{2}.$

TEST FORM A

Evaluate.

20.  ${}_{12}P_3$                       21.  ${}_{13}C_7$                       22.  $\binom{n}{4}$

23. How many 4-letter code symbols can be formed with the letters P, R, O, D, U, C, and T without repetition?

24. How many 4-digit codes can be formed using the digits 2, 4, 6, 8, and 0 if the digits:  
 a) can be repeated?  
 b) are not repeated and must begin with 4?

25. *Class Representatives.* A class has 80 members. How many sets of 3 representatives can be selected from this group?

26. *Work crews.* There are 9 seniors and 6 juniors in a class. In how many ways can a clean-up crew of 3 seniors and 2 juniors be selected?

27. Expand:  $(x - a)^6$ .

28. Find the 3rd term of the binomial expansion of  $(2x + y)^5$ .

29. Determine the number of subsets of a set containing 8 members.

30. *Chocolates.* Suppose we select, without looking or otherwise inspecting, a chocolate from a box that contains 14 cream-filled chocolates and 10 caramel-filled chocolates. What is the probability that we choose a cream-filled chocolate?

ANSWERS

20. \_\_\_\_\_

21. \_\_\_\_\_

22. \_\_\_\_\_

23. \_\_\_\_\_

24. a) \_\_\_\_\_

b) \_\_\_\_\_

25. \_\_\_\_\_

26. \_\_\_\_\_

27. \_\_\_\_\_

28. \_\_\_\_\_

29. \_\_\_\_\_

30. \_\_\_\_\_

TEST FORM A

ANSWERS

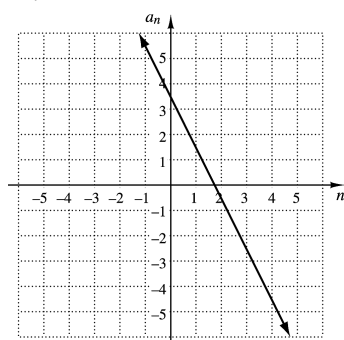
31. \_\_\_\_\_

31. *Marbles.* Suppose Jay selects four marbles without looking from a bag containing 4 white marbles, 2 blue marbles, 8 red marbles, and 6 green marbles. What is the probability of getting 1 white marble and 3 red marbles?

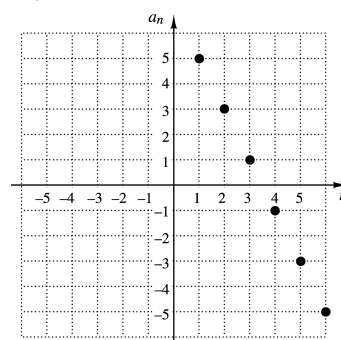
32. \_\_\_\_\_

32. The graph of the sequence whose general term is  $a_n = -2n + 7$  is which of the following?

A.

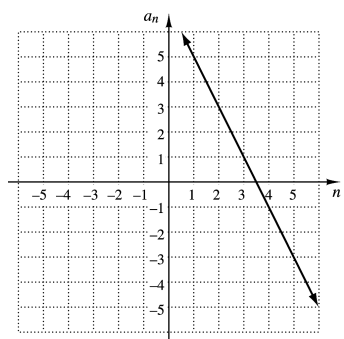


B.

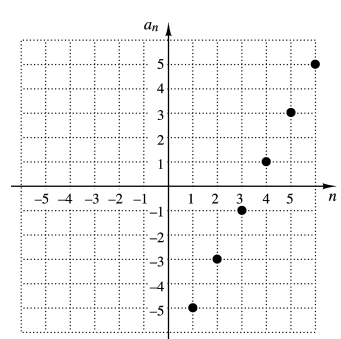


33. \_\_\_\_\_

C.



D.



33. Solve for  $n$ :  ${}_n P_{10} = 3 \cdot {}_n P_9$ .

1. For the sequence whose  $n$ th term is  $a_n = (-2)^{n-2}(n-1)$ , find  $a_8$ .

2. Find the first 5 terms of the sequence with general term

$$a_n = \frac{(n-1)(n+2)}{3}.$$

3. Find and evaluate:  $\sum_{k=1}^4 \frac{2^k}{k+1}$ .

Write sigma notation. Answers may vary.

4.  $5+10+15+20+25+\dots$

5.  $3+9+27+81+243$

6. Find the first 4 terms of the recursively defined sequence

$$a_1 = 4, a_{n+1} = 2a_n - 1.$$

7. Find the 18th term of the arithmetic sequence 3, 7, 11, ... .

8. The 1st term of an arithmetic sequence is  $-8$  and the 15th term is 34. Find the 7th term.

9. Find the sum of the first 20 terms of the series

$$100 + 75 + 50 + 25 + \dots .$$

10. Find the sum:  $\sum_{k=1}^{24} (3k - 4)$ .

11. Find the 6<sup>th</sup> term of the geometric sequence  $50, 10, 2, \frac{2}{5}, \dots$  .

**ANSWERS**

1. \_\_\_\_\_

2. \_\_\_\_\_

3. \_\_\_\_\_

4. \_\_\_\_\_

5. \_\_\_\_\_

6. \_\_\_\_\_

7. \_\_\_\_\_

8. \_\_\_\_\_

9. \_\_\_\_\_

10. \_\_\_\_\_

11. \_\_\_\_\_



TEST FORM B

Evaluate.

- |   | ANSWERS                    |
|---|----------------------------|
| 20. ${}_{13}P_5$ 21. ${}_{10}C_7$ 22. $\binom{n}{3}$  | 20. _____                  |
| 23. How many 5-letter code symbols can be formed with the letters F, A, C, T, O, and R without repetition?  | 21. _____                  |
| 24. How many 4-digit codes can be formed using the digits 2, 4, 6, 8, and 0 if the digits:<br>a) can be repeated?<br>b) are not repeated and must end with 6?         | 22. _____<br><br>23. _____ |
| 25. <i>Class Representatives.</i> A class has 35 members. How many sets of 2 representatives can be selected from this group?   | 24. a) _____<br>b) _____   |
| 26. <i>Youth Sports.</i> A youth sports team has 7 defense players and 8 offense players. How many ways can the coach choose 3 defense players and 5 offense players? | 25. _____                  |
| 27. Expand: $(x - d)^5$ .   | 26. _____                  |
| 28. Find the 4th term of the binomial expansion of $(p + q)^{10}$ .   | 27. _____                  |
| 29. Determine the number of subsets of a set containing 5 members.  | 28. _____                  |
| 30. <i>Card drawing.</i> Suppose we draw a card from a well-shuffled deck of 52 cards. What is the probability of drawing a jack?                                     | 29. _____<br><br>30. _____ |

TEST FORM B

ANSWERS

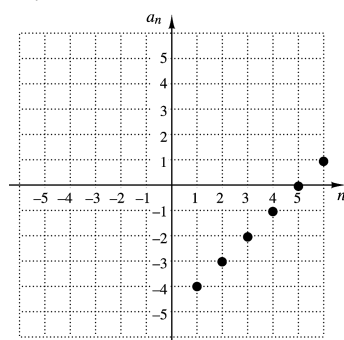
31. \_\_\_\_\_

31. *Marbles.* Suppose Jay selects three marbles without looking from a bag containing 10 white marbles, 5 blue marbles, 3 red marbles, and 6 green marbles. What is the probability of getting 1 red marble, 1 white marble, and 1 blue marble?

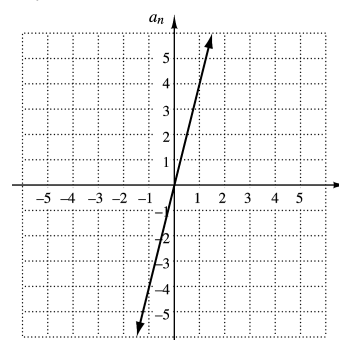
32. \_\_\_\_\_

32. The graph of the sequence whose general term is  $a_n = n - 4$  is which of the following?

A.

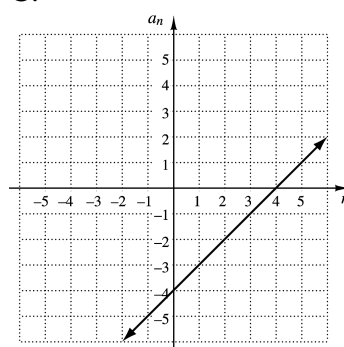


B.

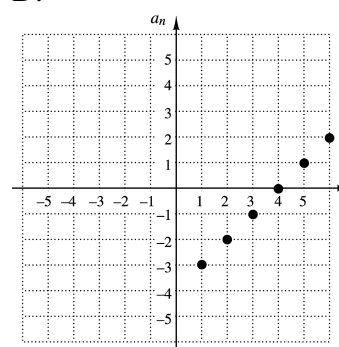


33. \_\_\_\_\_

C.



D.



33. Solve for  $n$ :  $\binom{n}{6} = 2 \binom{n-1}{5}$ .



1. For the sequence whose  $n$ th term is  $a_n = (-1)^n(3n + 2)$ , find  $a_6$ .

**ANSWERS**

1. \_\_\_\_\_

2. Find the first 5 terms of the sequence with general term

$$a_n = \frac{2n - 1}{n}.$$

2. \_\_\_\_\_

3. Find and evaluate:  $\sum_{k=1}^4 \frac{k}{2}$ .

3. \_\_\_\_\_

Write sigma notation. Answers may vary.

4.  $-3 + 6 - 9 + 12 - 15 + \dots$       5.  $\frac{3}{2} + \frac{3}{4} + \frac{3}{8} + \frac{3}{16} + \frac{3}{32}$

4. \_\_\_\_\_

6. Find the first 4 terms of the recursively defined sequence

$$a_1 = 10, a_{n+1} = \frac{1}{2}a_n + 1.$$

5. \_\_\_\_\_

6. \_\_\_\_\_

7. Find the 12th term of the arithmetic sequence  $\frac{3}{4}, \frac{5}{4}, \frac{7}{4}, \dots$ .

7. \_\_\_\_\_

8. The 1st term of an arithmetic sequence is 21 and the 12th term is 26.5. Find the 6th term.

8. \_\_\_\_\_

9. Find the sum of the first 20 terms of the series  $-5 + 5 + 15 + \dots$ .

9. \_\_\_\_\_

10. Find the sum:  $\sum_{k=1}^{24} (4k - 2)$ .

10. \_\_\_\_\_

11. Find the 6th term of the geometric sequence  $2, -6, 18, -54, \dots$ .

11. \_\_\_\_\_

## TEST FORM C

ANSWERS	
12. _____	12. For a geometric sequence, $r = 2$ and $S_4 = 45$ . Find $a_1$ . Find the sum, if it exists.
13. _____	13. $\sum_{k=1}^6 4^k$
14. _____	14. $60 + 40 + \frac{80}{3} + \dots$
15. _____	15. Find fraction notation for $0.\overline{74}$ .
16. _____	16. <i>Salvage Value.</i> The value of a piece of home care equipment is \$2000. Its salvage value each year is 60% of its value the year before. Give a sequence that lists the salvage value of the piece of equipment for each year of a 5-year period.
17. _____	17. <i>Hourly Wage.</i> Barry accepts a job with a starting hourly wage of \$12.95. He is promised a raise of 60¢ per hour every 4 months for the next two years. What will his hourly wage be at the end of the two-year period?
18. _____	18. <i>Earnings.</i> Suppose someone offered you a job for five years under the following conditions. You will be paid \$5 for the first month, \$7 for the second, and \$9.80 for the third, and so on, earning 40% more each month. How much would you earn altogether?
19. <u>See work.</u>	19. Use mathematical induction to prove that for every natural number $n$ , $1 + 2 + 2^2 + \dots + 2^{n-1} = 2^n - 1.$

TEST FORM C

Evaluate.

	ANSWERS
20. ${}_{13}P_9$ 21. ${}_{20}C_9$ 22. $\binom{n}{5}$	20. _____
23. How many 4-letter code symbols can be formed with the letters E, X, P, A, N, and D without repetition?	21. _____
24. How many 3-digit codes can be formed using the digits 2, 4, 6, 8, and 0 if the digits: a) can be repeated? b) are not repeated and must begin with 8?	22. _____ 23. _____
25. <i>Class Representatives.</i> A class has 60 members. How many sets of 3 representatives can be selected from this group?	24. a) _____ b) _____
26. <i>School Committees.</i> Suppose a school community has 9 teachers and 100 students. How many committees can be formed consisting of 2 teachers and 5 students?	25. _____
27. Expand: $(x - 2)^5$ .	26. _____
28. Find the 3rd term of the binomial expansion of $(s + t)^7$ .	27. _____
29. Determine the number of subsets of a set containing 6 members.	28. _____
30. <i>Card drawing.</i> Suppose we draw a card from a well-shuffled deck of 52 cards. What is the probability of drawing a face card (jack, queen, or king)?	29. _____
	30. _____

TEST FORM C

ANSWERS

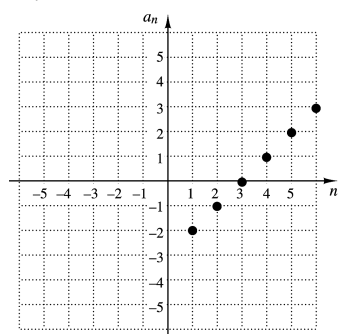
31. \_\_\_\_\_

31. *Marbles.* Suppose Jay selects four marbles without looking from a bag containing 10 white marbles, 5 red marbles, 3 blue marbles, and 2 green marbles. What is the probability of getting 3 blue marbles and 1 red marble?

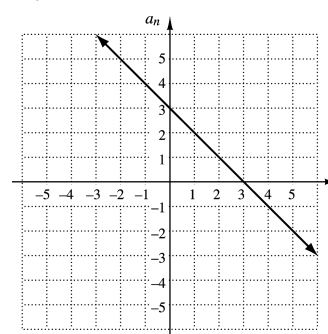
32. \_\_\_\_\_

32. The graph of the sequence whose general term is  $a_n = n - 3$  is which of the following?

A.

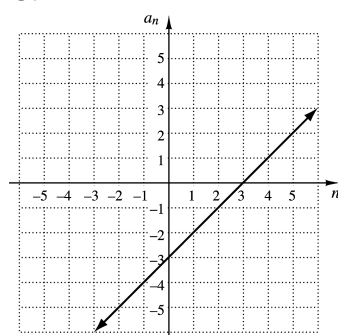


B.

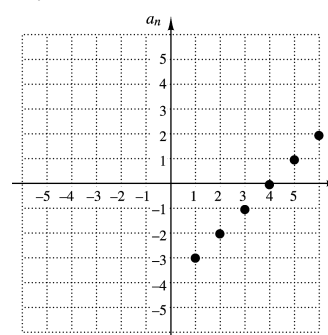


33. \_\_\_\_\_

C.



D.



33. Solve for  $n$ :  $\binom{n}{5} = \binom{n-1}{6}$ .

1. For the sequence whose  $n$ th term is  $a_n = (-1)^{n-1} \frac{n}{2}(2n+1)$ , find  $a_8$ .

2. Find the first 5 terms of the sequence with general term  $a_n = \frac{(-1)^n(4n+3)}{n}$ .

3. Find and evaluate:  $\sum_{k=1}^4 \frac{2k-1}{k^2}$ .

Write sigma notation. Answers may vary.

4.  $(-1) + 2 + (-3) + 4 + (-5) + 6$

5.  $6 + 12 + 18 + 24 + 30 + \dots$

6. Find the first 4 terms of the recursively defined sequence  $a_1 = 0.5, a_{n+1} = 4 + 2a_n$ .

7. Find the 17th term of the arithmetic sequence  $12, 7, 2, \dots$ .

8. The 1st term of an arithmetic sequence is  $-8$  and the 15th term is  $-1$ . Find the 5th term.

9. Find the sum of the first 20 terms of the series  $12 + 8 + 4 + \dots$ .

10. Find the sum:  $\sum_{k=1}^{24} (-3k + 1)$ .

11. Find the 8th term of the geometric sequence  $-4, 6, -9, \frac{27}{2}, \dots$ .

**ANSWERS**

1. \_\_\_\_\_

2. \_\_\_\_\_

3. \_\_\_\_\_

4. \_\_\_\_\_

5. \_\_\_\_\_

6. \_\_\_\_\_

7. \_\_\_\_\_

8. \_\_\_\_\_

9. \_\_\_\_\_

10. \_\_\_\_\_

11. \_\_\_\_\_

## TEST FORM D

---

ANSWERS	
12. _____	12. For a geometric sequence, $r = 2$ and $S_8 = -63.75$ . Find $a_1$ . Find the sum, if it exists.
13. _____	13. $\sum_{k=1}^{10} 3^k$ 14. $-16 + (-8) + (-4) + \dots$
14. _____	15. Find fraction notation for $2.\overline{09}$ .
15. _____	16. <i>Salvage Value.</i> The value of a piece of home care equipment is \$1200. Its salvage value each year is 75% of its value the year before. Give a sequence that lists the salvage value of the piece of equipment for each year of a 5-year period.
16. _____	17. <i>Hourly Wage.</i> Aidan accepts a job with a starting hourly wage of \$17.50. He is promised a raise of 80¢ per hour every three months for the next two years. What will his hourly wage be at the end of the two-year period?
17. _____	18. <i>Bouncing Tennis Ball.</i> A tennis ball is dropped from a height of 12 ft and always rebounds $\frac{2}{3}$ of the distance fallen. How far (up and down) will the ball have traveled when it hits the pavement for the 5 <sup>th</sup> time?
18. _____	19. Use mathematical induction to prove that for every natural number $n$ , $1^2 + 2^2 + 3^2 + \dots + n^2 = \frac{n(n+1)(2n+1)}{6}.$
19. <u>See work.</u>	

TEST FORM D

Evaluate.

- |  |  |
|--|--|
| <p>20. <math>{}_{10}P_4</math>                      21. <math>{}_{12}C_2</math>                      22. <math>\binom{n}{3}</math></p> <p>23. How many 4-letter code symbols can be formed with the letters P, R, I, M, E, and S without repetition?</p> <p>24. How many 5-digit codes can be formed using the digits 2, 4, 6, 8, and 0 if the digits:<br/> a) can be repeated?<br/> b) are not repeated and must begin with 6?</p> <p>25. <i>Class Representatives.</i> A class has 40 members. How many sets of 4 representatives can be selected from this group?</p> <p>26. <i>Dinner Specials.</i> For a particular special, a diner can choose one appetizer, one entrée, and one dessert. The restaurant offers choices from 4 appetizers, 3 entrees, and 2 desserts. In how many ways can a dinner special be formed?</p> <p>27. Expand: <math>(a - 2)^5</math>.</p> <p>28. Find the 4th term of the binomial expansion of <math>(3x + y)^4</math>.</p> <p>29. Determine the number of subsets of a set containing 7 members.</p> <p>30. <i>Socks.</i> Your sock drawer contains 8 black, 3 blue, 2 brown, and 2 white pairs of socks which are rolled into matching pairs. In the dark, you select a pair of socks. What is the probability that you select a pair that is white?</p> | <p style="text-align: center; margin-top: 0;"><b>ANSWERS</b></p> <p>20. _____</p> <p>21. _____</p> <p>22. _____</p> <p>23. _____</p> <p>24. a) _____<br/> b) _____</p> <p>25. _____</p> <p>26. _____</p> <p>27. _____</p> <p>28. _____</p> <p>29. _____</p> <p>30. _____</p> |
|--|--|

TEST FORM D

ANSWERS

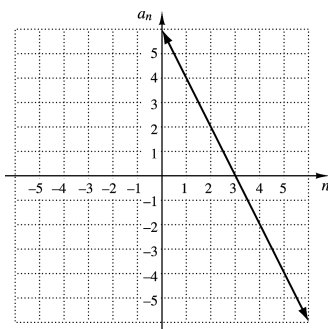
31. \_\_\_\_\_

31. *Marbles.* Suppose Jay selects four marbles without looking from a bag containing 5 white marbles, 3 blue marbles, 8 red marbles, and 2 green marbles. What is the probability of getting 1 blue marble and 3 red marbles?

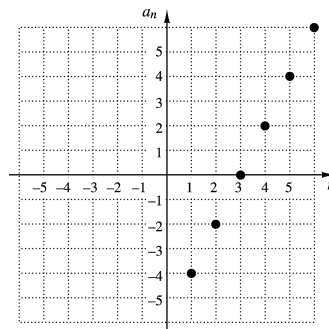
32. \_\_\_\_\_

32. The graph of the sequence whose general term is  $a_n = 6 - 2n$  is which of the following?

A.

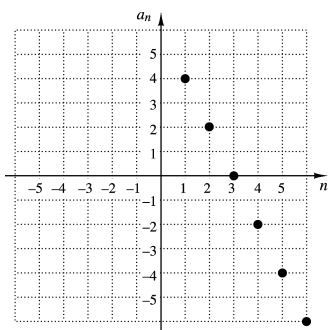


B.

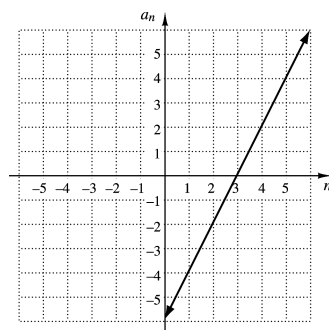


33. \_\_\_\_\_

C.



D.



33. Solve for  $n$ :  $\binom{n}{n-2} = 15$ .



1. For the sequence whose  $n$ th term is  $a_n = n(n-2)^3$ , find  $a_7$ .

- a) 875      b) 1728      c) 2345      d) 105

2. Find and evaluate:  $\sum_{k=1}^4 \frac{(-1)^{k+1}}{2k}$ .

- a)  $-\frac{1}{8}$       b)  $-\frac{7}{24}$       c)  $\frac{5}{12}$       d)  $\frac{7}{24}$

3. Find sigma notation for  $1 + 2 + 4 + 8 + 16 + 32$ .

- a)  $\sum_{k=1}^5 2^k$       b)  $\sum_{k=1}^6 2^{k-1}$       c)  $\sum_{k=1}^6 2^k$       d)  $\sum_{k=1}^{\infty} 1 \cdot 2^{k-1}$

4. Find sigma notation for  $4 - 6 + 8 - 10 + 12 - 14 + \dots$ .

- a)  $\sum_{n=2}^6 2^n$       b)  $\sum_{n=2}^{\infty} 2(n-2)$   
 c)  $\sum_{n=2}^{\infty} (-1)^n 2n$       d)  $\sum_{n=2}^{\infty} (-1)^{n+1} 2n$

5. Find the 4th term of the recursively defined sequence

$$a_1 = \frac{1}{2}, a_{n+1} = 3a_n + 2.$$

- a) 14      b)  $39\frac{1}{2}$       c) 63      d)  $3\frac{7}{8}$

6. Find the 19th term of the arithmetic sequence  $\frac{3}{4}, \frac{5}{4}, \frac{7}{4}, \dots$ .

- a)  $\frac{41}{4}$       b)  $\frac{43}{4}$       c)  $\frac{39}{4}$       d)  $\frac{19}{2}$

## ANSWERS

1. \_\_\_\_\_

2. \_\_\_\_\_

3. \_\_\_\_\_

4. \_\_\_\_\_

5. \_\_\_\_\_

6. \_\_\_\_\_

## TEST FORM E

ANSWERS	
7. _____	7. The 1st term of an arithmetic sequence is $-12$ and the 20th term is $64$ . Find the 5th term. a) $-\frac{20}{19}$ b) $4$ c) $\frac{32}{19}$ d) $-\frac{8}{5}$
8. _____	8. Find the sum of the first 20 terms of the series $20 + 15 + 10 + \dots$ . a) $-600$ b) $-1100$ c) $-750$ d) $-550$
9. _____	9. Find the sum $\sum_{k=1}^{20} (-3k + 5)$ . a) $-530$ b) $-55$ c) $-1060$ d) $990$
10. _____	10. Find the 6th term of the geometric sequence $100, 80, 64, \dots$ . a) $\frac{16,384}{625}$ b) $\frac{1024}{25}$ c) $\frac{4096}{125}$ d) $\frac{8192}{25}$
11. _____	11. For a geometric sequence, $r = \frac{1}{4}$ and $S_4 = -2.65625$ . Find $a_1$ . a) $-\frac{8}{3}$ b) $-2$ c) $-8$ d) $-\frac{85}{12}$
12. _____	12. Find the sum: $\sum_{k=1}^8 (-1)^k 3^k$ . a) $4920$ b) $-9840$ c) $-1641$ d) $-4920$
13. _____	13. Find the sum, if it exists: $4 + 1 + \frac{1}{4} + \dots$ . a) $16$ b) $\frac{16}{3}$ c) $6$ d) Does not exist

TEST FORM E

14. When  $0.\overline{72}$  is expressed in simplified fraction notation, what is the denominator?  
 a) 72            b) 8            c) 11            d) 9
15. *The Economic Multiplier.* The government is making a \$3,200,000 expenditure for restoration of covered bridges. If 45% of this is spent again, and so on, what is the total effect on the economy? Round to the nearest dollar.  
 a) \$7,111,111            b) \$1,760,000  
 c) \$4,640,000            d) \$5,818,182
16. A garden has 4 plants in the first row, 5 in the second row, 6 in the third row, and so on for 10 rows. How many plants are there altogether?  
 a) 14 plants    b) 17 plants    c) 85 plants    d) 170 plants
17. *Bouncing Ball.* A ball is dropped from a height of 250 cm and always rebounds  $\frac{3}{5}$  of the distance fallen. How far does it reach the 6th time it rebounds?  
 a) 6.9984 cm            b) 19.44 cm  
 c) 11.664 cm            d) 150 cm
18. If possible, evaluate the statement:  
 $2n < n^2$ , for  $n = 1, 2, 3, \dots$   
 a) It is sometimes true.    b) It is never true.  
 c) It is always true.        d) It is not possible to evaluate.
19. Find  $S_{k+1}$ , the  $(k+1)^{\text{st}}$  statement in the mathematical induction proof of  $4 + 8 + 12 + \dots + 4n = 2n(n+1)$  for  $n = 1, 2, 3, \dots$   
 a)  $4 + 4k = 2k(k+1)$   
 b)  $4 + 8 + 12 + \dots + 4k - 2k(k+1) = 2(k+1)(k+2)$   
 c)  $4 + 8 + 12 + \dots + 4k = 2k(k+1)$   
 d)  $4 + 8 + 12 + \dots + 4(k+1) = 2(k+1)(k+2)$

ANSWERS

14. \_\_\_\_\_

15. \_\_\_\_\_

16. \_\_\_\_\_

17. \_\_\_\_\_

18. \_\_\_\_\_

19. \_\_\_\_\_

## TEST FORM E

ANSWERS	
20. _____	20. Evaluate: ${}_8P_2$ . a) 28                      b) 56                      c) 20,160                      d) 112
21. _____	21. Evaluate: ${}_{12}C_5$ . a) 95,040                      b) 3,991,680 c) 792                      d) 5040
22. _____	22. Evaluate: $\binom{n}{2}$ . a) $\frac{n!}{3!}$ b) $\frac{(n-2)!}{2!}$ c) $\frac{2!n!}{(n-2)!}$ d) $\frac{n!}{(n-2)!2!}$
23. _____	23. <i>Test answers.</i> A true-false test contains 25 questions. How many possible completed answer sheets are there? a) 33,554,432                      b) 300 c) 625                      d) 600
24. _____	24. <i>Class Representatives.</i> A class has 100 members. How many different ways can it choose four representatives? a) 3,921,225                      b) 94,109,400 c) 25                      d) 12,650

TEST FORM E

25. *Menu Options.* In planning a morning reception, the host must choose two of five fruit options, three of six bagel options, and two of four muffin options. In how many way can this be done?

- a) 12            b) 1200        c) 10            d) 28,800

26. Expand:  $(x^2 - 1)^4$ .

- a)  $x^8 - 1$   
 b)  $x^8 - 4x^6 + 16x^4 - 4x^2 + 1$   
 c)  $x^8 - 4x^6 + 6x^4 - 4x^2 + 1$   
 d)  $x^8 + 4x^6 - 6x^4 + 4x^2 - 1$

27. Find the 3rd term of the binomial expansion of  $(c + d)^8$ .

- a)  $24c^6d^2$     b)  $28c^6d^2$     c)  $28c^4d^4$     d)  $56c^4d^4$

28. Determine the number of subsets of a set containing 8 members.

- a) 16            b) 128          c) 64            d) 256

29. *Card Drawing.* Suppose we draw a card from a well-shuffled deck of 52 cards. What is the probability of drawing a red king?

- a)  $\frac{1}{26}$             b)  $\frac{2}{13}$             c)  $\frac{1}{24}$             d)  $\frac{1}{104}$

ANSWERS

25. \_\_\_\_\_

26. \_\_\_\_\_

27. \_\_\_\_\_

28. \_\_\_\_\_

29. \_\_\_\_\_

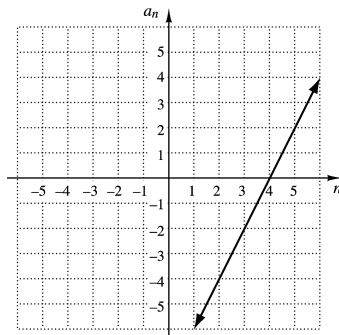
TEST FORM E

ANSWERS

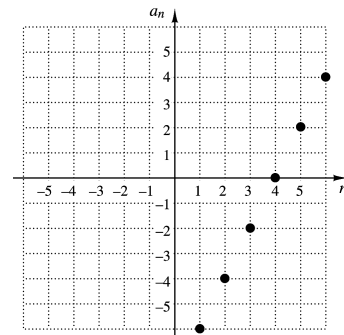
30. \_\_\_\_\_

30. The graph of the sequence whose general term is  $a_n = 2n - 8$  is which of the following?

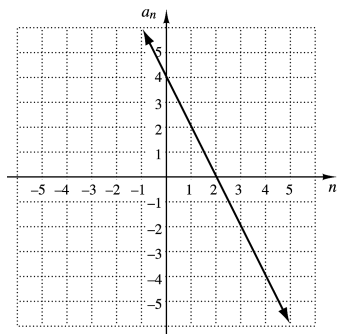
a)



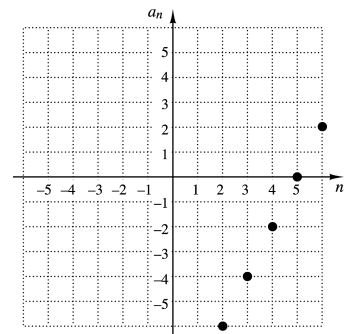
b)



c)



d)



31. \_\_\_\_\_

31. Solve for  $n$ :  ${}_n P_5 = \frac{1}{42} \cdot {}_n P_7$ .

a) 10

b) 14

c) 12

d) 11

1. For the sequence whose  $n$ th term is  $a_n = 5(2n+1)^2$ , find  $a_6$ .  
 a) 845      b) 65      c) 725      d) 605

2. Find and evaluate:  $\sum_{k=1}^3 \frac{k^2}{k+1}$ .

- a)  $\frac{9}{4}$       b)  $\frac{23}{6}$       c)  $\frac{181}{144}$       d)  $\frac{49}{12}$

3. Find sigma notation for  $3+15+75+375+1875$ .

- a)  $\sum_{k=1}^{\infty} 3 \cdot 5^k$     b)  $\sum_{k=1}^5 3 \cdot 5^k$     c)  $\sum_{k=1}^5 3 \cdot 5^{k-1}$     d)  $\sum_{k=1}^5 5 \cdot 3^k$

4. Find sigma notation for  $1 + \frac{1}{2} + \frac{1}{3} + \frac{1}{4} + \frac{1}{5} + \dots$ .

- a)  $\sum_{n=1}^5 \frac{1}{n}$       b)  $\sum_{n=1}^6 \frac{1}{n-1}$     c)  $\sum_{n=1}^{\infty} n$       d)  $\sum_{n=1}^{\infty} \frac{1}{n}$

5. Find the 4th term of the recursively defined sequence  
 $a_1 = 3, a_{n+1} = 2a_n - 5$ .

- a) -23      b) -9      c) -11      d) 3

6. Find the 16th term of the arithmetic sequence 14, 8, 2, ... .

- a) -82      b) 104      c)  $\frac{38}{7}$       d) -76

7. The 1st term of an arithmetic sequence is 7 and the 20th term is -50. Find the 5th term.

- a) -8      b) -5      c)  $-\frac{22}{5}$       d)  $-\frac{29}{4}$

**ANSWERS**

1. \_\_\_\_\_

2. \_\_\_\_\_

3. \_\_\_\_\_

4. \_\_\_\_\_

5. \_\_\_\_\_

6. \_\_\_\_\_

7. \_\_\_\_\_

## TEST FORM F

ANSWERS	
8. _____	8. Find the sum of the first 20 terms of the series $\frac{1}{3} + \frac{4}{3} + \frac{7}{3} + \dots$ . a) $\frac{580}{3}$ b) $\frac{1180}{3}$ c) $\frac{590}{3}$ d) $\frac{640}{3}$
9. _____	9. Find the sum $\sum_{k=1}^{24} (4k + 8)$ . a) 104      b) 1392      c) 2784      d) 2496
10. _____	10. Find the 8th term of the geometric sequence 10, 20, 40, ... . a) 1280      b) 2560      c) 5120      d) 2550
11. _____	11. For a geometric sequence, $r = 3$ and $S_5 = 12.1$ . Find $a_1$ . a) $-0.5$ b) $-0.1$ c) $0.3025$ d) $0.1$
12. _____	12. Find the sum $\sum_{k=1}^{12} -3(2)^k$ . a) $-12,285$ b) $-24,570$ c) $-12,282$ d) $-12,288$
13. _____	13. Find the sum, if it exists: $0.2 + 0.4 + 0.8 + \dots$ . a) 2      b) 10      c) 250      d) Does not exist
14. _____	14. When $1.\overline{38}$ is expressed in simplified fraction notation, what is the numerator? a) 99      b) 138      c) 137      d) 46



TEST FORM F

15. *Loan Repayment.* A family borrows \$ 20,000 . The loan is to be repaid in 5 yr at 8 % interest, compounded annually. How much will be repaid at the end of 5 yr? Round to the nearest dollar.  
 a) \$29,387    b) \$41,600    c) \$21,600    d) \$29,549
16. A garden has 5 plants in the first row, 15 in the second row, 25 in the third row, 35 in the fourth row, and so on for 12 rows. How many plants are there altogether?  
 a) 1320 plants                      b) 720 plants  
 c) 780 plants                        d) 1440 plants
17. *Bouncing Ball.* A ball is dropped from a height of 256 cm and always rebounds  $\frac{3}{4}$  of the distance fallen. How high does it reach the 5th time it rebounds?  
 a) 60.75 cm                          b) 45.5625 cm  
 c) 192 cm                            d) 81 cm
18. If possible, evaluate the statement:  
 $n^2 > (n - 1)^2$ , for  $n = 1, 2, 3, \dots$  .  
 a) It is sometimes true.          b) It is never true.  
 c) It is always true.                d) It is not possible to evaluate.
19. Find and evaluate the third statement,  $S_3$ , in a mathematical induction proof of  $2 + 5 + 8 + \dots + (3n - 1) = \frac{n(3n + 1)}{2}$ , for  $n$  a natural number.  
 a)  $2 = \frac{1(3 \cdot 1 + 1)}{2}$ ; True  
 b)  $2 + 5 + 8 = \frac{3(3 \cdot 3 + 1)}{2}$ ; False  
 c)  $2 + 5 + 8 + \dots + (3n - 1) = \frac{n(3n + 1)}{2}$ ; True  
 d)  $2 + 5 + 8 = \frac{3(3 \cdot 3 + 1)}{2}$ ; True

ANSWERS

15. \_\_\_\_\_

16. \_\_\_\_\_

17. \_\_\_\_\_

18. \_\_\_\_\_

19. \_\_\_\_\_



TEST FORM F

25. *Menu Options.* In planning a banquet menu, the host must choose three of twelve appetizer options, two of five entrée options, and one of three dessert options. In how many ways can this be done?

- a) 79,2300    b) 6                    c) 30                    d) 6600

26. Expand:  $(x + \sqrt{3})^4$ .

- a)  $x^4 + 9$   
 b)  $x^4 + 4\sqrt{3}x^3 + 18x^2 + 12\sqrt{3}x + 9$   
 c)  $x^4 + 12x^3 + 18x^2 + 36x + 9$   
 d)  $x^4 + 4\sqrt{3}x^3 + 48x^2 + 4\sqrt{3}x + 9$

27. Find the 5<sup>th</sup> term of the binomial expansion of  $(m + 2)^5$ .

- a)  $80m$                     b) 32                    c)  $160m$                     d)  $32m$

28. Determine the number of subsets of a set containing 10 members.

- a) 512                    b) 100                    c) 1024                    d) 45

29. *Marbles.* Suppose we select, without looking, one marble from a bag containing 5 red marbles, 4 yellow marbles, and 7 blue marbles. What is the probability of selecting a red or yellow marble?

- a)  $\frac{9}{32}$                     b)  $\frac{9}{16}$                     c)  $\frac{5}{16}$                     d)  $\frac{3}{4}$

ANSWERS

25. \_\_\_\_\_

26. \_\_\_\_\_

27. \_\_\_\_\_

28. \_\_\_\_\_

29. \_\_\_\_\_

## CHAPTER 12

NAME \_\_\_\_\_

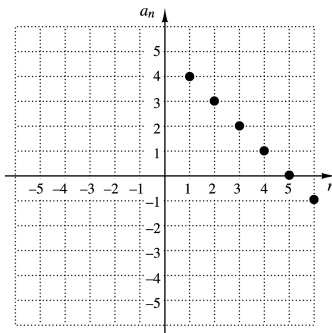
## TEST FORM F

## ANSWERS

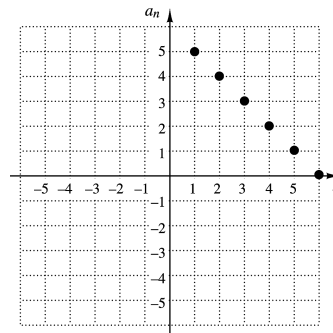
30. \_\_\_\_\_

30. The graph of the sequence whose general term is  $a_n = 5 - n$  is which of the following?

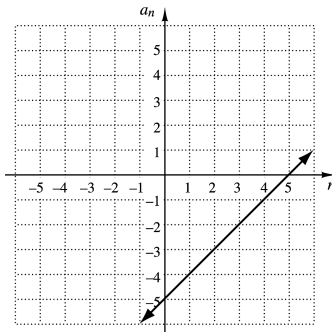
a)



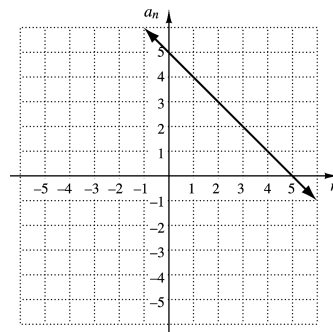
b)



c)



d)



31. \_\_\_\_\_

31. Solve for  $n$ :  ${}_n P_6 = 6 \cdot {}_n P_4$ .

a) 7                      b) 8                      c) 9                      d) 10