

Chapter 1

1. Estimate the slope of $f(x) = 2x^2 + 7$ at $x = 4$.
A) 6 B) 28 C) 16 D) 56
Ans: C Difficulty: Moderate Section: 1.1
2. Estimate the slope of $f(x) = 4x^3 + 9$ at $x = 3$.
A) 12 B) 36 C) 108 D) 27
Ans: C Difficulty: Moderate Section: 1.1
3. Estimate the slope of $f(x) = 2 \sin x$ at $x = \frac{3\pi}{2}$.
A) -2.00 B) 0.00 C) 1.00 D) 1.41
Ans: B Difficulty: Moderate Section: 1.1
4. Estimate the slope of $f(x) = \sqrt{8x+9}$ at $x = 2$.
A) 0.8000 B) 4 C) 100 D) -1.6000
Ans: A Difficulty: Moderate Section: 1.1
5. Estimate the length of the curve $y = \sqrt{x^2 + 2}$ on the interval $[0, 3]$ using three line segments. Round the answer to 3 decimal places.
A) 3.552 B) 3.604 C) 1.902 D) 0.634
Ans: B Difficulty: Moderate Section: 1.1
6. Estimate the length of the curve $y = 2x^2 + 4$ on the interval $[-2, 2]$ using four line segments. Round the answer to 3 decimal places.
A) 16.492 B) 8.000 C) 16.638 D) 16.000
Ans: C Difficulty: Moderate Section: 1.1

7. Complete the tables appropriately and use the numerical evidence to conjecture the value

of $\lim_{x \rightarrow 3} \frac{(x-3)^2}{x^4 + 6x^3 - 54x - 81}$.

x	$\frac{(x-3)^2}{x^4 + 6x^3 - 54x - 81}$
2.9	
2.99	
2.999	
2.9999	

x	$\frac{(x-3)^2}{x^4 + 6x^3 - 54x - 81}$
3.1	
3.01	
3.001	
3.0001	

A) 0 B) 3 C) -3 D) -81

Ans: A Difficulty: Moderate Section: 1.2

8. Complete the tables appropriately and use the numerical evidence to conjecture the value

of $\lim_{x \rightarrow 2} \frac{5x-10}{x^2 - 3x + 2}$.

x	$\lim_{x \rightarrow 2} \frac{5x-10}{x^2 - 3x + 2}$
1.9	
1.99	
1.999	
1.9999	

x	$\lim_{x \rightarrow 2} \frac{5x-10}{x^2 - 3x + 2}$
2.1	
2.01	
2.001	
2.0001	

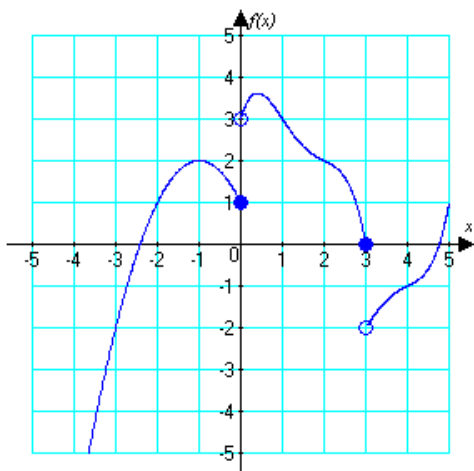
A) 0 B) 5 C) -10 D) 2

Ans: B Difficulty: Moderate Section: 1.2

9. For the function graphed below, identify

$$\lim_{x \rightarrow 0^-} f(x)$$

or state that the limit does not exist.



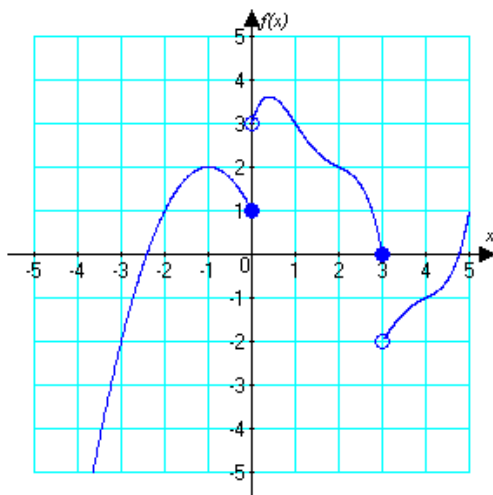
A) 1 B) 2 C) 3 D) does not exist

Ans: A Difficulty: Moderate Section: 1.2

10. For the function graphed below, identify

$$\lim_{x \rightarrow 0^+} f(x)$$

or state that the limit does not exist.



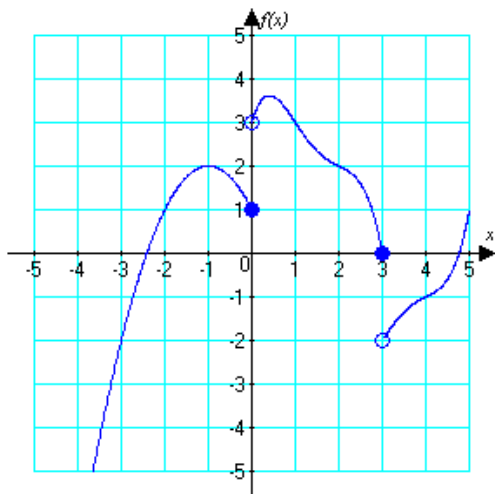
A) 0 B) 1 C) 3 D) does not exist

Ans: C Difficulty: Moderate Section: 1.2

11. For the function graphed below, identify

$$\lim_{x \rightarrow 3^-} f(x)$$

or state that the limit does not exist.



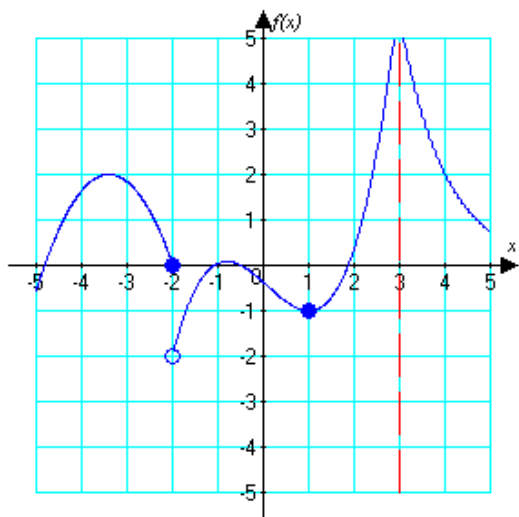
A) 0 B) 2 C) -2 D) does not exist

Ans: A Difficulty: Moderate Section: 1.2

12. For the function graphed below, identify

$$\lim_{x \rightarrow -2^-} f(x)$$

or state that the limit does not exist.



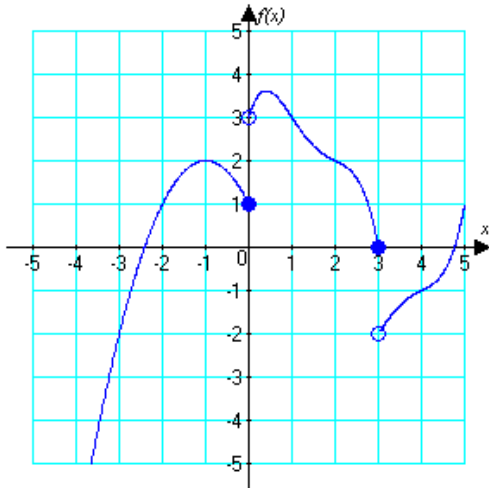
A) 0 B) -1 C) -2 D) does not exist

Ans: A Difficulty: Moderate Section: 1.2

13. For the function graphed below, identify

$$\lim_{x \rightarrow 3^+} f(x)$$

or state that the limit does not exist.



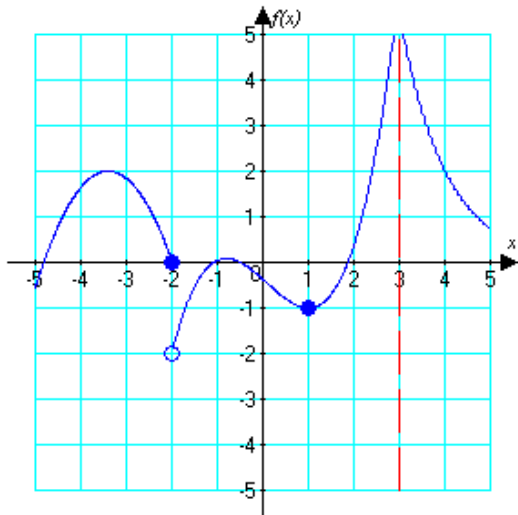
- A) 0 B) 2 C) -2 D) does not exist

Ans: C Difficulty: Moderate Section: 1.2

14. For the function graphed below, identify

$$\lim_{x \rightarrow -2^+} f(x)$$

or state that the limit does not exist.



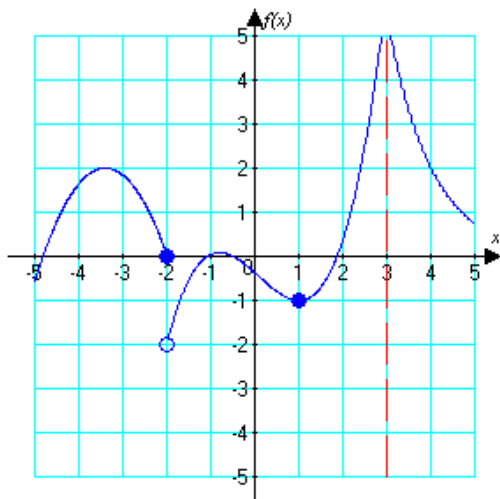
- A) 0 B) -1 C) -2 D) does not exist

Ans: C Difficulty: Moderate Section: 1.2

15. For the function graphed below, identify

$$\lim_{x \rightarrow 1^-} f(x)$$

or state that the limit does not exist.



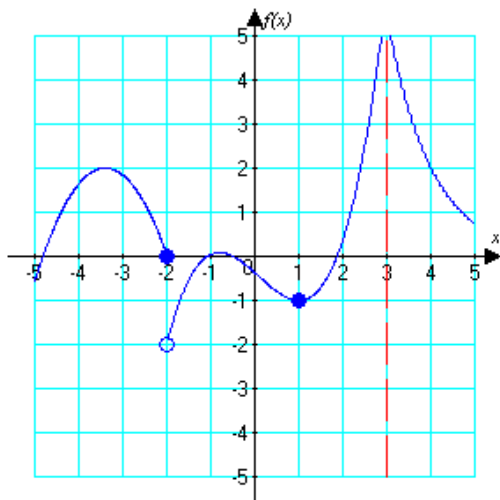
A) 0 B) -1 C) -2 D) does not exist

Ans: B Difficulty: Moderate Section: 1.2

16. For the function graphed below, identify

$$\lim_{x \rightarrow 3^-} f(x)$$

or state that the limit does not exist.



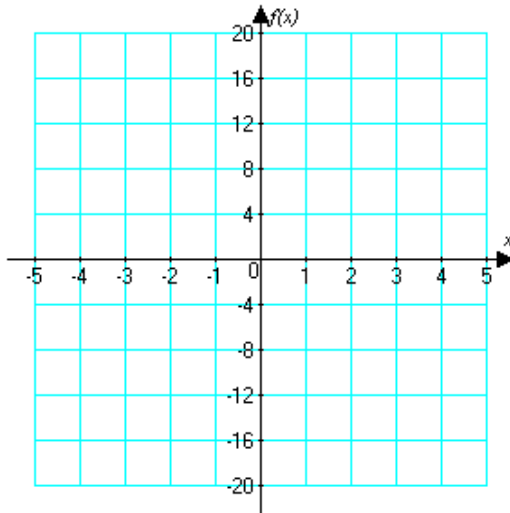
A) 0 B) -1 C) -2 D) does not exist

Ans: D Difficulty: Moderate Section: 1.2

17. Sketch the graph of

$$f(x) = \begin{cases} -4x & \text{if } x > 0 \\ 4x^2 & \text{if } x \leq 0 \end{cases}$$

What is $\lim_{x \rightarrow 4^-} f(x)$?



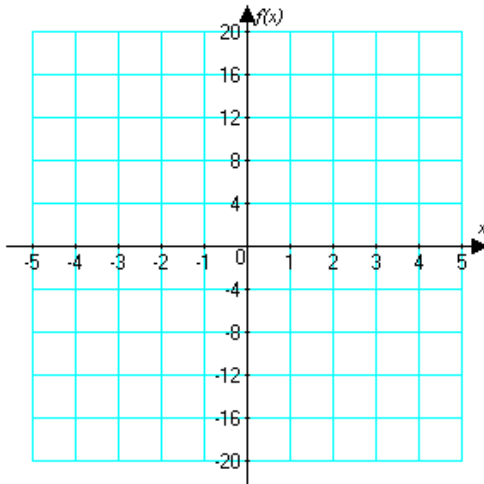
A) 0 B) -16 C) 16 D) does not exist

Ans: B Difficulty: Moderate Section: 1.2

18. Sketch the graph of

$$f(x) = \begin{cases} 2x^3 + 2 & \text{if } x < -2 \\ x^2 + 1 & \text{if } x \geq -2 \end{cases}$$

What is $\lim_{x \rightarrow -2^-} f(x)$?



A) -2 B) 0 C) 5 D) does not exist

Ans: C Difficulty: Moderate Section: 1.2

19. Use graphical and numerical evidence to estimate the limit.

$$\lim_{x \rightarrow 0} \frac{\sin x}{\cos x}$$

A) 0 B) $\frac{\pi}{4}$ C) $\frac{\pi}{2}$ D) π

Ans: A Difficulty: Moderate Section: 1.2

20. Use graphical and numerical evidence to estimate the limit.

$$\lim_{x \rightarrow 8} \frac{x^2 - 64}{x - 8}$$

A) 8 B) -8 C) -16 D) 16

Ans: D Difficulty: Moderate Section: 1.2

21. Use graphical and numerical evidence to determine if

$$\lim_{x \rightarrow 8} \frac{x^2 - 64}{x^2 - 16x + 64}$$

exists. If so, state the limit.

- A) The limit exists and is -8 at $x = 8$.
- B) The limit exists and is 8 at $x = 8$.
- C) The limit does not exist; the function is increasing without bound from the left and decreasing without bound from the right at $x = 8$.
- D) The limit does not exist; the function is decreasing without bound from the left and decreasing without bound from the right at $x = 8$.

Ans: D Difficulty: Moderate Section: 1.2

22. Use graphical and numerical evidence to estimate the limit.

$$\lim_{x \rightarrow \pi/2} \frac{\cos x}{\left(x - \frac{\pi}{2}\right)}$$

- A) -1 B) 0 C) $\frac{\pi}{2}$ D) π

Ans: A Difficulty: Moderate Section: 1.2

23. Use graphical and numerical evidence to determine if

$$\lim_{x \rightarrow 0} \frac{4 \sin x}{x}$$

exists. If so, state the limit.

- A) The limit exists and is -1 at $x = 0$.
- B) The limit exists and is 4 at $x = 0$.
- C) The limit does not exist; the function is increasing without bound at $x = 0$.
- D) The limit does not exist; the function is decreasing without bound at $x = 0$.

Ans: B Difficulty: Moderate Section: 1.2

24. Use graphical and numerical evidence to determine if

$$\lim_{x \rightarrow -8} \frac{x + 8}{|x + 8|}$$

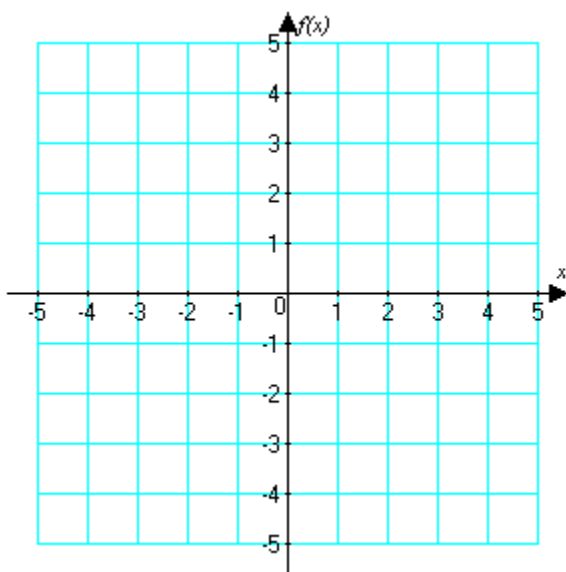
exists. If so, state the limit.

- A) the limit exists and is -1 at $x = -8$
- B) the limit exists and is 0 at $x = -8$
- C) does not exist; the right and left limits at $x = -8$ are different
- D) does not exist; the function is increasing without bound at $x = -8$

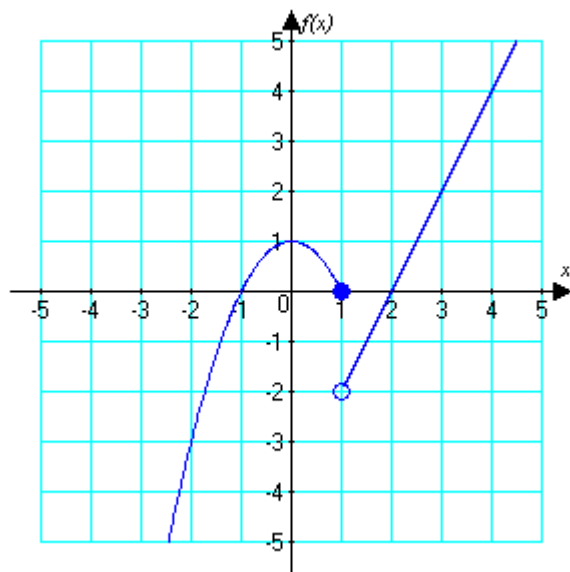
Ans: C Difficulty: Moderate Section: 1.2

25. Sketch the graph of a function with the given properties.

$$f(-1) = 0, f(0) = 1, f(1) = 0, \lim_{x \rightarrow 1} f(x) \text{ does not exist}$$



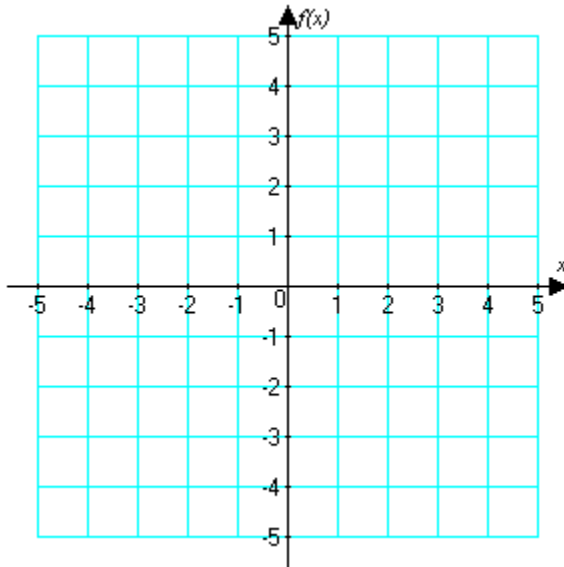
Ans: One possible function that fits the listed criteria is shown here:



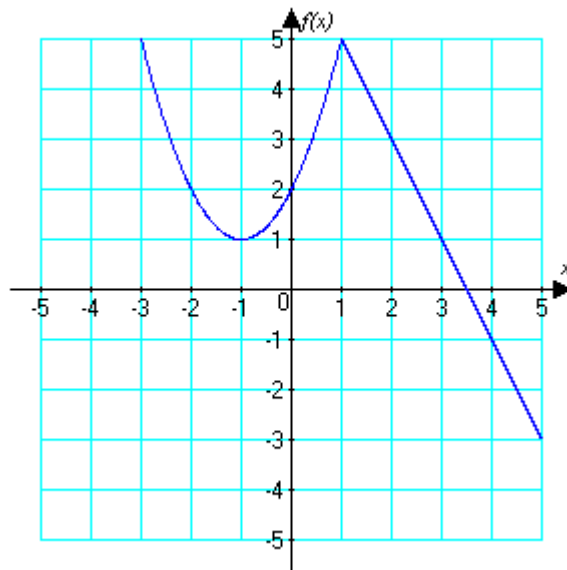
Difficulty: Moderate Section: 1.2

26. Sketch the graph of a function with the given properties.

$$f(0) = 2, f(1) = 5, \lim_{x \rightarrow -1} f(x) = 1, \lim_{x \rightarrow 2} f(x) = 3$$



Ans: One possible function that meets the criteria is:



Difficulty: Moderate Section: 1.2

27. A ski rental shop charges \$7.00 for each hour, or portion of an hour, its ski equipment is rented for up to a maximum of \$56.00 for all day. If $f(t)$ equals the total charge for the ski equipment for t hours, determine the limit $\lim_{t \rightarrow 6.5} f(t)$, if it exists.

A) \$45.50 B) \$42.00 C) \$49.00 D) The limit does not exist.

Ans: C Difficulty: Moderate Section: 1.2

28. Evaluate the limit, if it exists.

$$\lim_{x \rightarrow 4} \sqrt{2x+5}$$

A) 3 B) 13 C) $\sqrt{13}$ D) $3\sqrt{13}$

Ans: C Difficulty: Moderate Section: 1.3

29. Find the limit or explain why it does not exist.

$$\lim_{x \rightarrow 4^-} \sqrt{16-x^2}$$

A) 4

B) 0

C) 16

D) The limit does not exist; the function is not defined for $x < 4$.

Ans: B Difficulty: Moderate Section: 1.3

30. Find the limit or explain why it does not exist.

$$\lim_{x \rightarrow 5^+} \sqrt{25-x^2}$$

A) 5

B) 0

C) The limit does not exist; the function increases without bound as x approaches 5 from the right.

D) The limit does not exist; the function is not defined for $x > 5$.

Ans: D Difficulty: Moderate Section: 1.3

31. Find the limit or explain why it does not exist.

$$\lim_{x \rightarrow -2^+} \sqrt{x^2+3x+2}$$

A) -2

B) 0

C) 2

D) The limit does not exist; the function is not defined for $x < -2$.

Ans: B Difficulty: Moderate Section: 1.3

32. Evaluate the limit, if it exists.

$$\lim_{x \rightarrow 3\pi/2} x^2 \cos x$$

A) 0 B) 36 C) 1 D) does not exist

Ans: A Difficulty: Moderate Section: 1.3

33. Evaluate the limit, if it exists.

$$\lim_{x \rightarrow 3} \frac{x-7}{x^2+9}$$

A) $-\frac{2}{9}$ B) -4 C) 18 D) does not exist

Ans: A Difficulty: Moderate Section: 1.3

34. Evaluate the limit, if it exists.

$$\lim_{x \rightarrow 3} \frac{x^2 + 4x - 21}{x^2 - 10x + 21}$$

A) 10 B) $-\frac{5}{2}$ C) 3 D) does not exist

Ans: B Difficulty: Moderate Section: 1.3

35. Evaluate the limit, if it exists. Assume that $\lim_{x \rightarrow 0} \frac{\sin x}{x} = 1$.

$$\lim_{x \rightarrow 0} \frac{10 \tan x}{\sin x}$$

A) 0 B) 10 C) $\frac{1}{10}$ D) The limit does not exist.

Ans: B Difficulty: Moderate Section: 1.3

36. Evaluate the limit, if it exists.

$$\lim_{x \rightarrow 0^+} x^3 \sec^3 x$$

A) 0 B) 1 C) $\frac{\pi}{2}$ D) does not exist

Ans: A Difficulty: Moderate Section: 1.3

37. Evaluate the limit, if it exists.

$$\lim_{x \rightarrow 0} \frac{\sqrt{x^2 + 3x + 36} - 6}{x^2 + 3x}$$

A) $\frac{1}{12}$ B) 6 C) 36 D) does not exist

Ans: A Difficulty: Moderate Section: 1.3

38. Evaluate the limit, if it exists.

$$\lim_{x \rightarrow 0} \frac{6x}{2 - \sqrt{x+4}}$$

- A) 12 B) 24 C) -24 D) does not exist
 Ans: C Difficulty: Moderate Section: 1.3

39. Evaluate the indicated limit, if it exists.

$$\lim_{x \rightarrow 3} \left(\frac{1}{x+3} + \frac{6}{x^2-9} \right)$$

- A) $-\frac{1}{6}$ B) $\frac{1}{6}$ C) 0 D) does not exist
 Ans: A Difficulty: Moderate Section: 1.3

40. Evaluate $\lim_{x \rightarrow -1} f(x)$ where

$$f(x) = \begin{cases} 3x^2 + 3 & \text{if } x < -1 \\ 2x + 3 & \text{if } x \geq -1 \end{cases}$$

- A) 0 B) 6 C) 1 D) does not exist
 Ans: D Difficulty: Moderate Section: 1.3

41. Evaluate $\lim_{x \rightarrow 3} f(x)$ where

$$f(x) = \begin{cases} 4x - 2 & \text{if } x < -3 \\ 14 & \text{if } -3 < x < 3 \\ 4x + 2 & \text{if } x > 3 \end{cases}$$

- A) 14 B) 12 C) 10 D) does not exist
 Ans: A Difficulty: Moderate Section: 1.3

42. Evaluate the limit, if it exists.

$$\lim_{h \rightarrow 0} \frac{(3+h)^3 - 27}{h}$$

- A) 9 B) 27 C) 18 D) does not exist
 Ans: B Difficulty: Moderate Section: 1.3

47. Given

$$\lim_{x \rightarrow a} f(x) = 1 \text{ and } \lim_{x \rightarrow a} g(x) = -5,$$

find

$$\lim_{x \rightarrow a} [6f(x) - 4g(x)].$$

A) 6 B) 11 C) 2 D) 26

Ans: D Difficulty: Moderate Section: 1.3

48. Given

$$\lim_{x \rightarrow a} f(x) = 5 \text{ and } \lim_{x \rightarrow a} g(x) = -5,$$

find

$$\lim_{x \rightarrow a} [2f(x) \cdot 3g(x)].$$

A) -25 B) -150 C) 6 D) The limit does not exist.

Ans: B Difficulty: Moderate Section: 1.3

49. Given

$$\lim_{x \rightarrow a} f(x) = 1, \lim_{x \rightarrow a} g(x) = -5 \text{ and } \lim_{x \rightarrow a} h(x) = 0,$$

find

$$\lim_{x \rightarrow a} \frac{[6f(x) + 4g(x)]}{h(x)}.$$

A) -4 B) -14 C) 10 D) The limit does not exist.

Ans: D Difficulty: Moderate Section: 1.3

50. Suppose that a state's tax code states that tax liability is 12% on the first 18,000 of taxable earnings and 19% on the remainder. Find the constants a and b in the tax function $T(x)$

$$T(x) = \begin{cases} a + 0.12x & \text{if } x \leq 18,000 \\ b + 0.19(x - 18,000) & \text{if } x > 18,000 \end{cases}$$

such that $\lim_{x \rightarrow 0^+} T(x) = 0$ and $\lim_{x \rightarrow 18,000} T(x)$ exists.

A) $a \neq 0$ and $b = 0$ C) $a = 18,000$ and $b = 2,160$ B) $a = 0$ and $b = 2,160$ D) $a \neq 0$ and $b = 18,000$

Ans: B Difficulty: Moderate Section: 1.3

51. Find all discontinuities.

$$f(x) = \frac{4x-24}{x^2-36}$$

- A) discontinuous at $x = 0$ C) discontinuous at $x = 36$
 B) discontinuous at $x = \pm 6$ D) continuous for all x

Ans: B Difficulty: Moderate Section: 1.4

52. Find all discontinuities.

$$f(x) = \frac{6x-12}{x^2-4}$$

For each discontinuity that is removable, define a new function that removes the discontinuity.

Ans: discontinuous at $x = \pm 2$

The discontinuity at $x = 2$ is removable:

$$f(x) = \frac{6}{x+2}$$

Difficulty: Moderate Section: 1.4

53. Find all discontinuities.

$$f(x) = \frac{3x}{x^2+2x-15}$$

- A) discontinuous at $x = -3, 5$ C) discontinuous at $x = 3, -5$
 B) discontinuous at $x = -15$ D) continuous for all x

Ans: C Difficulty: Moderate Section: 1.4

54. Find all discontinuities.

$$f(x) = \frac{2x}{x^2+4}$$

- A) discontinuous at $x = 4$ C) discontinuous at $x = -2, 2$
 B) discontinuous at $x = -2$ D) continuous for all x

Ans: D Difficulty: Moderate Section: 1.4

55. Determine where f is continuous.

$$\frac{2x^2}{\sqrt{5x^3-x^2}}$$

- A) $x \neq 0$ B) $x > 0$ C) $x > \frac{1}{5}$ D) continuous on all reals

Ans: C Difficulty: Moderate Section: 1.4

56. Find all discontinuities.

$$f(x) = \begin{cases} 3x & \text{if } x < 1 \\ 7x^2 & \text{if } x \geq 1 \end{cases}$$

- A) discontinuous at $x = 1$ C) discontinuous at $x = -3, -7$
 B) discontinuous at $x = 3, 7$ D) continuous for all x

Ans: A Difficulty: Moderate Section: 1.4

57. Explain why the function fails to be continuous at $x = 1$ by indicating which of the conditions in the definition of continuity are not met.

$$f(x) = \begin{cases} x^2 - 2 & \text{if } x < 1 \\ 8 & \text{if } x = 1 \\ 3x - 4 & \text{if } x > 1 \end{cases}$$

- A) $f(1)$ exists but $\lim_{x \rightarrow 1} f(x)$ does not exist
 B) $\lim_{x \rightarrow 1} f(x)$ exists but $f(1)$ does not exist
 C) neither $f(1)$ nor $\lim_{x \rightarrow 1} f(x)$ exist
 D) $f(1)$ exists and $\lim_{x \rightarrow 1} f(x)$ exists but $\lim_{x \rightarrow 1} f(x) \neq f(1)$

Ans: D Difficulty: Moderate Section: 1.4

58. Determine the intervals where f is continuous.

$$f(x) = \sqrt{2x + 12}$$

- A) $(-6, \infty)$ B) $[-6, \infty)$ C) $(-\infty, -6]$ D) $(-\infty, -6)$

Ans: B Difficulty: Moderate Section: 1.4

59. Determine the intervals where f is continuous.

$$f(x) = (x - 5)^{3/2}$$

- A) $(-\infty, 5]$ B) $[5, \infty)$ C) $[5, \infty)$ D) $(-\infty, 5)$

Ans: C Difficulty: Moderate Section: 1.4

60. Determine the intervals where f is continuous.

$$f(x) = \sin(3x + 3)$$

- A) $(-\infty, \infty)$ B) $[3, 3\pi]$ C) $[-3, 3\pi]$ D) $[0, 2\pi]$

Ans: A Difficulty: Moderate Section: 1.4

61. Suppose that a state's tax code states that tax liability is 11% on the first 19,000 of taxable earnings and 19% on the remainder. Find the constants a and b in the tax function $T(x)$ that make the function $T(x)$ continuous.

$$T(x) = \begin{cases} 0 & \text{if } x = 0 \\ a + 0.11x & \text{if } 0 < x \leq 19,000 \\ b + 0.19(x - 19,000) & \text{if } x > 19,000 \end{cases}$$

- A) $a = 0.11$ and $b = 3,610$ C) $a = 0$ and $b = 3,610$
 B) $a = 0.11$ and $b = 2,090$ D) $a = 0$ and $b = 2,090$

Ans: D Difficulty: Moderate Section: 1.4

62. Use the Intermediate Value Theorem to determine if f has a zero in the interval $[1, 7]$.

$$f(x) = x^2 - 34$$

Ans: Since $f(x)$ is continuous on the interval $[1, 7]$, $f(x)$ must take on all values between $f(1)$ and $f(7)$. $f(1) = -33$ and $f(7) = 15$, which have opposite signs. Therefore, $f(x)$ must equal 0 somewhere on the interval $[1, 7]$.

Difficulty: Moderate Section: 1.4

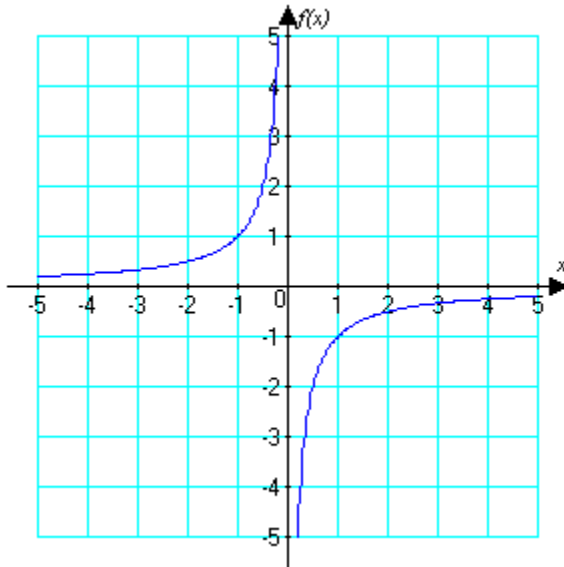
63. Use the Intermediate Value Theorem to determine if f has a zero in the interval $[2, 7]$.

$$f(x) = x^3 - 20x - 54$$

Ans: Since $f(x)$ is continuous on the interval $[2, 7]$, $f(x)$ must take on all values between $f(2)$ and $f(7)$. $f(2) = -86$ and $f(7) = 149$, which have opposite signs. Therefore, $f(x)$ must equal 0 somewhere on the interval $[2, 7]$.

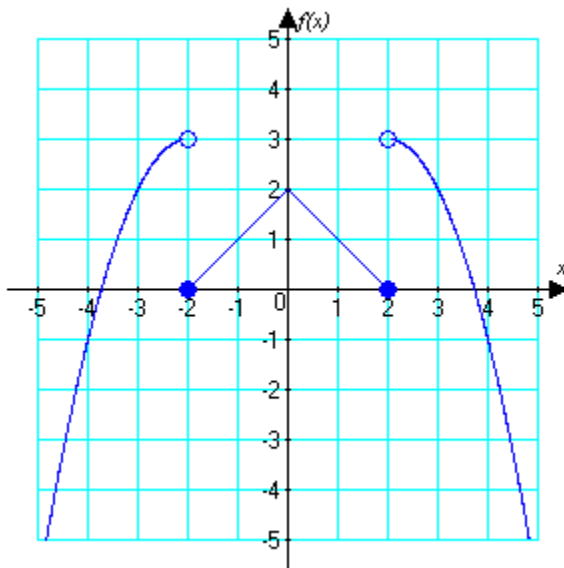
Difficulty: Moderate Section: 1.4

64. Use the graph to identify all discontinuities of f .



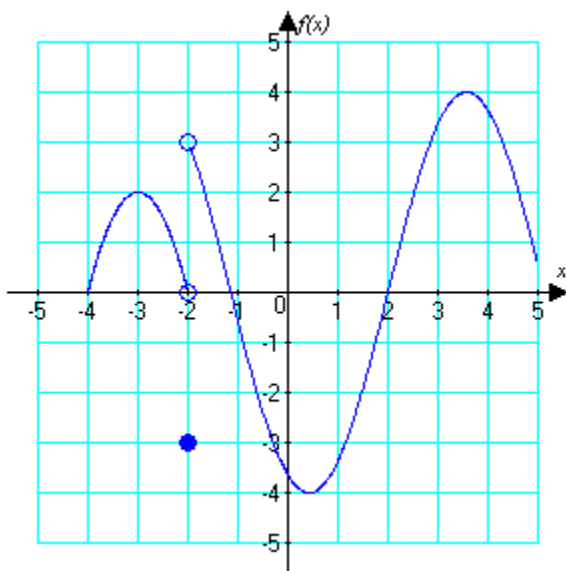
Ans: The function is discontinuous at $x = 0$.
 Difficulty: Moderate Section: 1.4

65. Use the graph to identify all discontinuities of f .



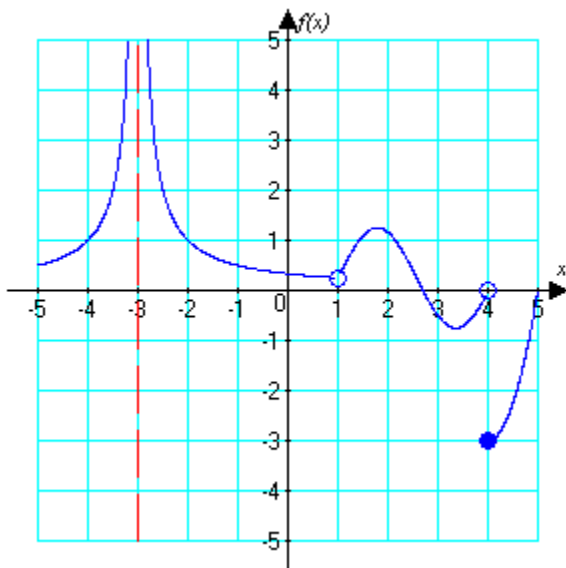
Ans: The function is discontinuous at $x = \pm 2$.
 Difficulty: Moderate Section: 1.4

66. Use the graph to identify all discontinuities of f .



Ans: The function is discontinuous at $x = -2$.
Difficulty: Moderate Section: 1.4

67. Use the graph to identify all discontinuities of f .



Ans: The function is discontinuous at $x = -3, 1, 4$.
Difficulty: Moderate Section: 1.4

68. Determine the values of a and b that make $f(x)$ continuous.

$$f(x) = \begin{cases} 3 \frac{\sin x}{x} & \text{if } x < 0 \\ a & \text{if } x = 0 \\ b \cos 6x & \text{if } x > 0 \end{cases}$$

Use $\lim_{x \rightarrow 0} \frac{\sin x}{x} = 1$.

- A) $a = 3, b = 6$
- B) $a = 3, b = 3$
- C) $a = -3, b = 3$
- D) No values of a and b will make $f(x)$ continuous.

Ans: B Difficulty: Moderate Section: 1.4

69. Determine if f is continuous at $x = 14$ from the right.

$$f(x) = \begin{cases} 4x^2 & \text{if } x < 14 \\ 2x - 28 & \text{if } x \geq 14 \end{cases}$$

- A) $\lim_{x \rightarrow 14} f(x) \neq f(14)$, but $f(x)$ is continuous from the right
- B) $\lim_{x \rightarrow 14} f(x) = f(14)$, so $f(x)$ is continuous from the right
- C) $\lim_{x \rightarrow 14} f(x) \neq f(14)$, so $f(x)$ is not continuous from the right
- D) $\lim_{x \rightarrow 14} f(x) = f(14)$, but $f(x)$ is not continuous from the right

Ans: B Difficulty: Moderate Section: 1.4

70. Determine if f is continuous at $x = 4$ from the right.

$$f(x) = \begin{cases} 5x^2 & \text{if } x \leq 4 \\ 6x - 24 & \text{if } x > 4 \end{cases}$$

- A) $\lim_{x \rightarrow 4} f(x) \neq f(4)$ but $f(x)$ is continuous from the right
- B) $\lim_{x \rightarrow 4} f(x) = f(4)$ so $f(x)$ is continuous from the right
- C) $\lim_{x \rightarrow 4} f(x) \neq f(4)$ so $f(x)$ is not continuous from the right
- D) $\lim_{x \rightarrow 4} f(x) = f(4)$ but $f(x)$ is not continuous from the right

Ans: C Difficulty: Moderate Section: 1.4

71. Determine the limit.

$$\lim_{x \rightarrow 3^+} \frac{2-9x}{x^2-9}$$

Answer with a number, ∞ , $-\infty$ or that the limit does not exist.

A) ∞ B) $-\infty$ C) 0 D) 9 E) The limit does not exist.

Ans: B Difficulty: Moderate Section: 1.5

72. Determine the limit.

$$\lim_{x \rightarrow -5} \frac{5-8x}{x^2-25}$$

Answer with a number, ∞ , $-\infty$ or that the limit does not exist.

A) ∞ B) $-\infty$ C) 25 D) The limit does not exist.

Ans: D Difficulty: Moderate Section: 1.5

73. Determine the limit.

$$\lim_{x \rightarrow 4} \frac{x-7}{x^2-8x+16}$$

Answer with a number, ∞ , $-\infty$ or that the limit does not exist.

A) $-\infty$ B) 0 C) $-\frac{11}{64}$ D) ∞ E) The limit does not exist.

Ans: C Difficulty: Moderate Section: 1.5

74. Determine the limit.

$$\lim_{x \rightarrow 10^+} \frac{3-x}{(x-10)^2}$$

Answer with a number, ∞ , $-\infty$ or that the limit does not exist.

A) 0 B) $-\frac{13}{400}$ C) ∞ D) $-\infty$ E) The limit does not exist.

Ans: D Difficulty: Moderate Section: 1.5

75. Determine the limit.

$$\lim_{x \rightarrow -3^-} \frac{9-x}{x+3}$$

Answer with a number, ∞ , $-\infty$ or that the limit does not exist.

A) 0 B) $-\frac{1}{3}$ C) ∞ D) $-\infty$ E) The limit does not exist.

Ans: D Difficulty: Moderate Section: 1.5

76. Determine the limit (answer as appropriate, with a number, ∞ , $-\infty$, or does not exist).

$$\lim_{x \rightarrow \pi/2} x^4 \sec^6 x$$

A) 0 B) ∞ C) $-\infty$ D) does not exist

Ans: B Difficulty: Moderate Section: 1.5

77. Determine the limit (answer as appropriate, with a number, ∞ , $-\infty$, or does not exist).

$$\lim_{x \rightarrow \infty} \ln \left(\frac{x^2 + 10}{x + 3} \right)$$

- A) $\ln \left(\frac{10}{3} \right)$ B) ∞ C) $-\infty$ D) does not exist

Ans: B Difficulty: Moderate Section: 1.5

78. Determine the limit.

$$\lim_{x \rightarrow \infty} \frac{4x^2 + 3x + 8}{3x^2 + 4x + 3}$$

Answer with a number, ∞ , $-\infty$ or that the limit does not exist.

- A) $\frac{8}{3}$ B) $\frac{4}{3}$ C) ∞ D) $-\infty$ E) The limit does not exist.

Ans: B Difficulty: Moderate Section: 1.5

79. Determine the limit (answer as appropriate, with a number, ∞ , $-\infty$, or does not exist).

$$\lim_{x \rightarrow \infty} \frac{3 - 4/x}{9 - 5/x}$$

- A) $\frac{4}{5}$ B) $\frac{1}{3}$ C) ∞ D) $-\infty$ E) does not exist

Ans: B Difficulty: Moderate Section: 1.5

80. Determine the limit (answer as appropriate, with a number, ∞ , $-\infty$, or does not exist).

$$\lim_{x \rightarrow \infty} \frac{3x^2 \cos x}{x^2 + 3}$$

- A) 3 B) $\frac{1}{3}$ C) ∞ D) $-\infty$ E) does not exist

Ans: E Difficulty: Moderate Section: 1.5

81. Find all horizontal and vertical asymptotes of $f(x)$.

$$f(x) = \frac{3x}{\sqrt{5+x^2}}$$

For each vertical asymptote, determine whether $f(x) \rightarrow \infty$ or $f(x) \rightarrow -\infty$ on either side of the vertical asymptote.

- A) horizontal asymptotes at $y = \pm 3$; there are no vertical asymptotes.
 B) horizontal asymptote at $y = 3$, vertical asymptote at $x = -3$; $f(x) \rightarrow \infty$ on both sides of $x = -3$
 C) horizontal asymptote at $y = -3$, vertical asymptote at $x = 3$; $f(x) \rightarrow -\infty$ on both sides of $x = 3$
 D) horizontal asymptotes at $y = \pm 3$, vertical asymptote at $x = 0$; $\lim_{x \rightarrow 0^-} f(x) = \infty$ and

$$\lim_{x \rightarrow 0^+} f(x) = -\infty$$

Ans: A Difficulty: Moderate Section: 1.5

82. Find all horizontal and vertical asymptotes of $f(x)$.

$$f(x) = \frac{4x}{36-x^2}$$

For each vertical asymptote, determine whether $f(x) \rightarrow \infty$ or $f(x) \rightarrow -\infty$ on either side of the vertical asymptote.

- A) horizontal asymptote $y = 0$; there are no vertical asymptotes.
 B) horizontal asymptote at $y = 0$, vertical asymptotes at $x = \pm 6$;

$$\lim_{x \rightarrow -6^-} f(x) = \infty \quad \lim_{x \rightarrow -6^+} f(x) = \infty$$

$$\lim_{x \rightarrow -6^-} f(x) = -\infty \quad \lim_{x \rightarrow -6^+} f(x) = -\infty$$

- C) horizontal asymptote at $y = 0$, vertical asymptotes at $x = \pm 6$;

$$\lim_{x \rightarrow -6^-} f(x) = \infty \quad \lim_{x \rightarrow -6^+} f(x) = -\infty$$

$$\lim_{x \rightarrow -6^-} f(x) = \infty \quad \lim_{x \rightarrow -6^+} f(x) = -\infty$$

- D) horizontal asymptote at $y = 0$, vertical asymptotes at $x = \pm 6$;

$$\lim_{x \rightarrow -6^-} f(x) = -\infty \quad \lim_{x \rightarrow -6^+} f(x) = -\infty$$

$$\lim_{x \rightarrow -6^-} f(x) = \infty \quad \lim_{x \rightarrow -6^+} f(x) = \infty$$

Ans: C Difficulty: Moderate Section: 1.5

83. Find all horizontal and vertical asymptotes of $f(x)$.

$$f(x) = \sin\left(\frac{x^2 + 4}{x^2 - 4}\right)$$

For each vertical asymptote, determine whether $f(x) \rightarrow \infty$ or $f(x) \rightarrow -\infty$ on either side of the vertical asymptote.

A) horizontal asymptote at $y = 1$, vertical asymptotes at $x = \pm 2$,

$$\lim_{x \rightarrow -2^-} f(x) = -\infty \quad \lim_{x \rightarrow -2^+} f(x) = \infty$$

$$\lim_{x \rightarrow 2^-} f(x) = \infty \quad \lim_{x \rightarrow 2^+} f(x) = -\infty$$

B) horizontal asymptote at $y = 1$, vertical asymptotes at $x = \pm 2$,

$$\lim_{x \rightarrow -2^-} f(x) = -\infty \quad \lim_{x \rightarrow -2^+} f(x) = \infty$$

$$\lim_{x \rightarrow 2^-} f(x) = \infty \quad \lim_{x \rightarrow 2^+} f(x) = -\infty$$

C) horizontal asymptote at $y = \sin(1)$, vertical asymptotes at $x = \pm 2$,
Limits from both sides of each vertical asymptote are undefined.

D) horizontal asymptote at $y = \sin(1)$, vertical asymptotes at $x = \pm 2$,

$$\lim_{x \rightarrow -2^-} f(x) = -\infty \quad \lim_{x \rightarrow -2^+} f(x) = \infty$$

$$\lim_{x \rightarrow 2^-} f(x) = \infty \quad \lim_{x \rightarrow 2^+} f(x) = -\infty$$

Ans: C Difficulty: Moderate Section: 1.5

84. Determine all vertical and slant asymptotes.

$$y = \frac{x^3}{64 - x^2}$$

A) vertical asymptotes: $x = -8$, $x = 8$; slant asymptote: $y = -x$

B) vertical asymptote: $x = 8$; slant asymptote: $y = -8x$

C) vertical asymptote: $x = 8$; slant asymptote: $y = -x$

D) vertical asymptotes: $x = -8$, $x = 8$; slant asymptote: $y = -8x$

Ans: A Difficulty: Moderate Section: 1.5

85. Determine all vertical and slant asymptotes.

$$y = \frac{x^4}{x^3 + 6}$$

A) vertical asymptotes: $x = -\sqrt{6}$, $x = \sqrt{6}$; slant asymptote: $y = 6x$

B) vertical asymptotes: $x = -\sqrt[3]{6}$, $x = \sqrt[3]{6}$; slant asymptote: $y = x$

C) vertical asymptote: $x = -\sqrt[3]{6}$; slant asymptote: $y = x$

D) vertical asymptote: none; slant asymptote: $y = 6x$

Ans: C Difficulty: Moderate Section: 1.5

86. Suppose that the size of the pupil of a certain animal is given by $f(x)$ (mm), where x is the intensity of the light on the pupil. If $f(x) = \frac{80x^{-0.5} + 30}{4x^{-0.5} + 15}$, find the size of the pupil with no light and the size of the pupil with an infinite amount of light.

A) no light: 20 mm; infinite light: 2 mm C) no light: 80 mm; infinite light: 0 mm
 B) no light: 2 mm; infinite light: 20 mm D) no light: 80 mm; infinite light: 4 mm
 Ans: A Difficulty: Moderate Section: 1.5

87. Complete the table appropriately and use the numerical evidence to conjecture the value

of $\lim_{x \rightarrow -\infty} \frac{8x^4 + 8x^2 + 7}{x^4 + 2x \cos x}$.

x	$\frac{8x^4 + 8x^2 + 7}{x^4 + 2x \cos x}$
-10	
-100	
-1000	
-10,000	

A) 8 B) $\frac{7}{2}$ C) ∞ D) $-\infty$

Ans: A Difficulty: Moderate Section: 1.5

88. Consider

$$f(x) = x(\sqrt{49x^2 + 6} - 7x).$$

a. Use a graph and numerical values of the function to conjecture a value of $\lim_{x \rightarrow \infty} f(x)$.

x	$f(x)$
10^4	
10^5	
10^6	
10^7	
10^8	

b. Rewrite the function to avoid loss-of-significance error.

Ans: a. Graphs should show significant oscillation as x gets large; table should exhibit loss-of-significance error around 10^6 and larger.

b. After multiplying and dividing by the conjugate expression and reducing,

$$f(x) = \frac{6x}{\sqrt{49x^2 + 6} + 7x}$$

Difficulty: Moderate Section: 1.5

89. Find the limit exactly (Hint: multiply and divide by the conjugate expression and simplify).

$$\lim_{x \rightarrow \infty} (\sqrt{x^2 + 4} - x)$$

A) 4 B) -4 C) 0 D) the limit does not exist

Ans: C Difficulty: Moderate Section: 1.5

90. Find the limit exactly (Hint: multiply and divide by the conjugate expression and simplify).

$$\lim_{x \rightarrow \infty} (\sqrt{16x^2 - 2x + 1} - 4x)$$

A) -4 B) 0 C) 6 D) $-\frac{1}{4}$

Ans: D Difficulty: Moderate Section: 1.5

91. Find the limit exactly (Hint: multiply and divide by the conjugate expression and simplify).

$$\lim_{x \rightarrow \infty} \left(\sqrt{5x^2 + 7x + 5} - \sqrt{5x^2 + 3x + 1} \right)$$

- A) $\sqrt{5}$ B) $\frac{2\sqrt{5}}{5}$ C) 5 D) The limit does not exist.

Ans: B Difficulty: Moderate Section: 1.5

92. Suppose the length of an animal t days after birth is given by $h(t)$.

$$h(t) = \frac{95}{3 + 8(0.4)^t} \text{ mm}$$

What is the length of the animal at birth?

- A) 0 mm B) 95 mm C) $\frac{95}{11}$ mm D) $\frac{95}{3}$ mm

Ans: C Difficulty: Moderate Section: 1.5

93. Suppose the length of an animal t days after birth is given by $h(t)$.

$$h(t) = \frac{87}{2 + 8(0.4)^t} \text{ mm}$$

What is the eventual length of the animal (i.e., $h(t)$ as $t \rightarrow \infty$)?

- A) 0 mm B) ∞ mm C) $\frac{87}{10}$ mm D) $\frac{87}{2}$ mm

Ans: D Difficulty: Moderate Section: 1.5

94. Find δ in terms of ε for $\lim_{x \rightarrow 0} 4x = 0$.

- A) $\frac{\varepsilon}{4}$ B) 4 C) 4ε D) 0

Ans: A Difficulty: Moderate Section: 1.6

95. Find δ in terms of ε for $\lim_{x \rightarrow 2} (4x + 8) = 16$.

- A) $\frac{\varepsilon}{8}$ B) 4ε C) $\frac{\varepsilon}{4}$ D) 2ε

Ans: C Difficulty: Moderate Section: 1.6

96. Find δ in terms of ε for $\lim_{x \rightarrow -2} \frac{x^2 - 4}{x + 2} = -4$.

- A) 2 B) ε C) 4 D) $\frac{\varepsilon}{2}$

Ans: B Difficulty: Moderate Section: 1.6

97. Find δ in terms of ε for $\lim_{x \rightarrow 0} (x^3 + 5) = 5$.

- A) ε^3 B) 5ε C) $\sqrt[3]{\varepsilon}$ D) $\frac{\varepsilon}{5}$

Ans: C Difficulty: Moderate Section: 1.6

98. Find a δ corresponding to $M = 100$ for $\lim_{x \rightarrow 6^+} \frac{8}{x-6} = \infty$.

- A) $\frac{2}{25}$ B) 800 C) 600 D) $\frac{50}{3}$

Ans: A Difficulty: Moderate Section: 1.6

99. Find a δ corresponding to $M = 100$ for $\lim_{x \rightarrow 6^-} \frac{9}{\sqrt{36-x^2}} = \infty$.

- A) $\frac{81}{10,000}$ B) 10,000 C) 0.0008 D) $\frac{9}{100}$

Ans: C Difficulty: Moderate Section: 1.6

100. Find N corresponding to $\varepsilon = 0.1$ for $\lim_{x \rightarrow \infty} \frac{5x^2 - 5}{x^2 + 1} = 5$.

- A) $\sqrt{99}$ B) 50 C) $-\sqrt{99}$ D) -50

Ans: C Difficulty: Moderate Section: 1.6

101. Prove that the limit is correct using the appropriate definition. Show all work.

$$\lim_{x \rightarrow \infty} \left(\frac{1}{x^2 + 6} - 4 \right) = -4$$

$$\text{Ans: } \left| \frac{1}{x^2 + 6} - 4 + 4 \right| < \varepsilon \text{ if } N = \sqrt{\frac{1}{\varepsilon} - 6}$$

Difficulty: Moderate Section: 1.6

102. Prove that the limit is correct using the appropriate definition. Show all work.

$$\lim_{x \rightarrow \infty} \left(\frac{1}{(x-9)^2} \right) = 0$$

$$\text{Ans: } \left| \frac{1}{(x-9)^2} \right| < \varepsilon \text{ if } M = \sqrt{\frac{1}{\varepsilon}} + 9$$

Difficulty: Moderate Section: 1.6

103. Prove that the limit is correct using the appropriate definition. Assume k is an integer and is greater than 0. Show all work.

$$\lim_{x \rightarrow \infty} \frac{4}{x^k} = 0$$

Ans: $\left| \frac{4}{x^k} \right| < \varepsilon$ if $M = \sqrt[k]{\frac{4}{\varepsilon}}$

Difficulty: Moderate Section: 1.6

104. Given $f(x)$, identify a specific $\varepsilon > 0$ for which no $\delta > 0$ exists to satisfy the definition of a limit.

$$f(x) \begin{cases} 7x & \text{if } x < 1 \\ x^2 + 4 & \text{if } x > 1 \end{cases} \text{ and } \lim_{x \rightarrow 1} f(x) \neq 7.$$

Ans: $\varepsilon < 1$

Difficulty: Difficult Section: 1.6

105. A metal washer of (outer) radius r inches weighs $4r^2$ ounces. A company manufactures 5-inch washers for different customers who have different error tolerances. If the customer demands a washer of weight $100 \pm \varepsilon$ ounces, what is the error tolerance for the radius? That is, find δ such that a radius of r within the interval $(5 - \delta, 5 + \delta)$ guarantees a weight within $(100 - \varepsilon, 100 + \varepsilon)$.

A) $\delta = \min\{4\varepsilon, \varepsilon\}$

C) $\delta = \min\left\{1, \frac{\varepsilon}{44}\right\}$

B) $\delta = \max\{4\varepsilon, \varepsilon\}$

D) $\delta = \max\left\{1, \frac{\varepsilon}{44}\right\}$

Ans: C Difficulty: Moderate Section: 1.6