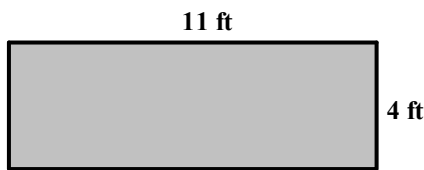


# Chapter 1 PreTest – Form A

Name: \_\_\_\_\_

Date: \_\_\_\_\_

1. Determine the place value of the digit 6 in the whole number 60792. 1. \_\_\_\_\_
2. Write the whole number 37129 in words. 2. \_\_\_\_\_
3. Add:  $345 + 23$  3. \_\_\_\_\_
4. Subtract:  $654 - 234$  4. \_\_\_\_\_
5. Subtract:  $1276 - 834$  5. \_\_\_\_\_
6. Karl found one suit that costs \$198 and another that costs \$112.  
How much more does the first one cost than the second? 6. \_\_\_\_\_
7. Round 32599 to the nearest ten. 7. \_\_\_\_\_
8. Round each number to the nearest hundred to find an estimated sum.  
 $324 + 678 + 10886 + 212$  8. \_\_\_\_\_
9. Use the Distributive Property to rewrite the following expression.  
 $43(34 + 23)$  9. \_\_\_\_\_
10. Multiply:  $213 \times 11$  10. \_\_\_\_\_
11. Multiply:  $6231 \cdot 100$  11. \_\_\_\_\_
12. Find the perimeter and area of the following rectangle. 12. \_\_\_\_\_  
\_\_\_\_\_



13. There are 16 grams of fat in a serving of peanut butter.  
How many grams of fat are in 24 servings? 13. \_\_\_\_\_

Divide and then check by multiplying.

14.  $1043 \div 7$  14. \_\_\_\_\_
15.  $\frac{1476}{123}$  15. \_\_\_\_\_
16.  $0 \div 12$  16. \_\_\_\_\_

## Chapter 1 PreTest – Form A (cont'd)

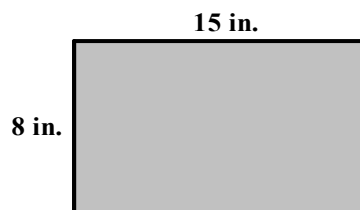
17. Four friends put up \$34,616 to start a new business. If they each put up the same amount, how much did each friend contribute? 17. \_\_\_\_\_
18. Evaluate:  $5^5$  18. \_\_\_\_\_
19. Evaluate:  $\sqrt{36}$  19. \_\_\_\_\_
20. Simplify:  $2(5-3)^2 + \sqrt{25}$  20. \_\_\_\_\_

# Chapter 1 PreTest – Form B

Name: \_\_\_\_\_

Date: \_\_\_\_\_

1. Determine the place value of the digit 9 in the whole number 19002. **1.** \_\_\_\_\_
2. Write the whole number 22,405 in words. **2.** \_\_\_\_\_
3. Add:  $56 + 43$  **3.** \_\_\_\_\_
4. Subtract:  $349 - 205$  **4.** \_\_\_\_\_
5. Subtract:  $1361 - 716$  **5.** \_\_\_\_\_
6. Olga has a coupon for \$24 off any suit. How much would a suit marked \$89 cost with the coupon? **6.** \_\_\_\_\_
7. Round 8706 to the nearest ten. **7.** \_\_\_\_\_
8. Round each number to the nearest hundred to find an estimated sum. **8.** \_\_\_\_\_  
$$\begin{array}{r} 567 \\ 356 \\ 1192 \\ + 134 \\ \hline \end{array}$$
9. Use the Distributive Property to rewrite the following expression. **9.** \_\_\_\_\_  
$$7(4 + 9)$$
10. Multiply: 
$$\begin{array}{r} 321 \\ \times 9 \\ \hline \end{array}$$
 **10.** \_\_\_\_\_
11. Multiply:  $7,240 \cdot 1000$  **11.** \_\_\_\_\_
12. A manufacturer packs 12 small appliances in a box. Find how many appliances are in 26 boxes. **12.** \_\_\_\_\_
13. It costs \$384,000 to produce 8 cars. How much does it cost to produce each car? **13.** \_\_\_\_\_
14. Find the perimeter and area of the following rectangle. **14.** \_\_\_\_\_  
\_\_\_\_\_



## Chapter 1 PreTest – Form B (cont'd)

Divide and then check by multiplying.

15.  $5337 \div 9$

15. \_\_\_\_\_

16.  $\frac{1352}{13}$

16. \_\_\_\_\_

17.  $63 \div 0$

17. \_\_\_\_\_

18. Evaluate:  $11^3$

18. \_\_\_\_\_

19. Evaluate:  $\sqrt{64}$

19. \_\_\_\_\_

20. Simplify:  $8 \div 2 - (\sqrt{4} + 1)$

20. \_\_\_\_\_

# Chapter 1 Test – Form A

Name: \_\_\_\_\_

Date: \_\_\_\_\_

1. Write 73,456 in words. 1. \_\_\_\_\_

2. Write “three hundred five thousand, five hundred forty-nine”  
in standard form. 2. \_\_\_\_\_

Simplify.

3.  $49 + 94$  3. \_\_\_\_\_

4.  $745 - 457$  4. \_\_\_\_\_

5.  $321 \times 21$  5. \_\_\_\_\_

6.  $12,167 \div 24$  6. \_\_\_\_\_

7.  $3^4 \cdot 5^1$  7. \_\_\_\_\_

8.  $\sqrt{9} \cdot \sqrt{36}$  8. \_\_\_\_\_

9.  $0 \div 36$  9. \_\_\_\_\_

10.  $342 \div 1$  10. \_\_\_\_\_

11.  $12(6^2 - 4)$  11. \_\_\_\_\_

12.  $16 + (16 \div 4) \cdot 3 + 4$  12. \_\_\_\_\_

13.  $\frac{56 \div 8 \cdot 2}{(\sqrt{4} - 1)^2 + 6}$  13. \_\_\_\_\_

14.  $6[(12 - 2)^2 + (26 - 16)^3 - 600]$  14. \_\_\_\_\_

15.  $7345 \cdot 1000$  15. \_\_\_\_\_

16. Round 83,433 to the nearest thousand. 16. \_\_\_\_\_

Estimate each sum or difference by rounding each number to the nearest hundred.

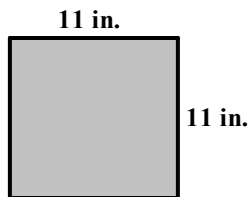
17.  $1423 + 6234 + 1867$  17. \_\_\_\_\_

18.  $8734 - 2398$  18. \_\_\_\_\_

## Chapter 1 Test – Form A (cont'd)

Solve.

19. Find the sum of 20 and 110. 19. \_\_\_\_\_
20. Thirty-eight cans of paint cost \$684. How much was each can? 20. \_\_\_\_\_
21. Rotchel Company had taxable income of \$23,345,000 last year. If its income taxes were \$780,450, what was their net income last year? 21. \_\_\_\_\_
22. James earns \$340 per week. What is his total income in 7 weeks? 22. \_\_\_\_\_
23. Jessica buys 5 shirts for \$21 each and 2 sweaters for \$39 each. Find the total cost for these items. 23. \_\_\_\_\_
24. Henry made \$70 mowing lawns on Wednesday, \$35 on Thursday, and \$70 on Friday. How many dollars did he earn? 24. \_\_\_\_\_
25. Find the area and perimeter of the figure. 25. \_\_\_\_\_
- \_\_\_\_\_



# Chapter 1 Test – Form B

Name: \_\_\_\_\_

Date: \_\_\_\_\_

1. Write 351,204 in words.

1. \_\_\_\_\_

2. Write “two million, three hundred thirty thousand” in standard form.

2. \_\_\_\_\_

Simplify.

3.  $39 + 43$

3. \_\_\_\_\_

4.  $303 - 192$

4. \_\_\_\_\_

5.  $456 \times 234$

5. \_\_\_\_\_

6.  $43,821 \div 79$

6. \_\_\_\_\_

7.  $3^2 \cdot 2^3$

7. \_\_\_\_\_

8.  $\sqrt{16} \cdot \sqrt{25}$

8. \_\_\_\_\_

9.  $13 \div 0$

9. \_\_\_\_\_

10.  $0 \div 635$

10. \_\_\_\_\_

11.  $2^3 \cdot 2^5 - 3 \cdot 5$

11. \_\_\_\_\_

12.  $12 + 40 \div 8 - 45 \div 9$

12. \_\_\_\_\_

13.  $\frac{8(6-5)-4}{5^2-23}$

13. \_\_\_\_\_

14.  $4[3(22 - 18)^2 - 2 \cdot 5]$

14. \_\_\_\_\_

15.  $6329 \cdot 100$

15. \_\_\_\_\_

16. Round 48,489 to the nearest thousand.

16. \_\_\_\_\_

Estimate each sum or difference by rounding each number to the nearest hundred.

17.  $3467 + 1573 + 2765$

17. \_\_\_\_\_


18.  $8734 - 2576$

18. \_\_\_\_\_

## Chapter 1 Test – Form B (cont'd)

Solve.

19. Find the quotient of 85 and 5. 19. \_\_\_\_\_
20. A store paid \$385 for 35 small decorative pictures.  
How much did it pay for each? 20. \_\_\_\_\_
21. Jerry bought a new car listed at \$24,325. He received a  
discount of \$1399. How much did he pay for the car? 21. \_\_\_\_\_
22. James earns \$440 per week. What is his total income in  
8 weeks? 22. \_\_\_\_\_
23. Jessica buys 4 shirts for \$29 each and 2 sweaters for \$42 each.  
Find the total cost for these items. 23. \_\_\_\_\_
24. James's income tax for the last year was \$2300 and for this year  
was \$1800. How much is his total income tax for two years? 24. \_\_\_\_\_
25. Find the area and perimeter of the figure. 25. \_\_\_\_\_





# Chapter 1 Test – Form C

Name: \_\_\_\_\_

Date: \_\_\_\_\_

1. Write 74,508 in words.

1. \_\_\_\_\_

2. Write “six hundred eight thousand, two hundred twenty-one” in standard form.

2. \_\_\_\_\_

Simplify.

3.  $46 + 34$

3. \_\_\_\_\_

4.  $888 - 569$

4. \_\_\_\_\_

5.  $342 \times 23$

5. \_\_\_\_\_

6.  $34,204 \div 39$

6. \_\_\_\_\_

7.  $3^4 \cdot 4^2$

7. \_\_\_\_\_

8.  $\sqrt{4} \cdot \sqrt{36}$

8. \_\_\_\_\_

9.  $0 \div 450$

9. \_\_\_\_\_

10.  $135 \div 0$

10. \_\_\_\_\_

11.  $(3^3 - 10) \cdot 2$

11. \_\_\_\_\_

12.  $20^2 \div 8 + 4 \cdot 12$

12. \_\_\_\_\_

13.  $\frac{6 \cdot 3 - 3 \cdot \sqrt{16}}{2(\sqrt{100} - 3^2)}$

13. \_\_\_\_\_

14.  $7[(19 - 17)^2 + 2^2]$

14. \_\_\_\_\_

15.  $1335 \times 1000$

15. \_\_\_\_\_

16. Round 49,813 to the nearest thousand.

16. \_\_\_\_\_

Estimate each sum or difference by rounding each number to the nearest hundred.

17.  $1483 + 3211 + 5234$

17. \_\_\_\_\_

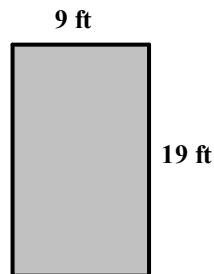
18.  $9107 - 5432$

18. \_\_\_\_\_

## Chapter 1 Test – Form C (cont'd)

Solve.

19. Find the product of 35 and 111. **19.** \_\_\_\_\_
20. One foot is 12 inches. How many feet are in 780 inches? **20.** \_\_\_\_\_
21. Marvin earns \$432 a week. Shirley earns \$329 a week for a similar job. How much more does Marvin earn per week than Shirley? **21.** \_\_\_\_\_
22. A store received 21 boxes of shampoo with 32 bottles of shampoo in each. How many bottles of shampoo did it receive in all? **22.** \_\_\_\_\_
23. Jessica buys 6 shirts for \$23 each and 3 sweaters for \$32 each. Find the total cost for these items. **23.** \_\_\_\_\_
24. In 2004 there were 23,046 people living in a town. The following year 162 people moved into the town. What is the new population? **24.** \_\_\_\_\_
25. Find the area and perimeter of the figure. **25.** \_\_\_\_\_  
\_\_\_\_\_



# Chapter 1 Test – Form D

Name: \_\_\_\_\_

Date: \_\_\_\_\_

1. Write 6,045,213 in words.

1. \_\_\_\_\_

2. Write “six hundred thousand, fifty-four” in standard form.

2. \_\_\_\_\_

Simplify.

3.  $66 + 57$

3. \_\_\_\_\_

4.  $800 - 707$

4. \_\_\_\_\_

5.  $194 \times 32$

5. \_\_\_\_\_

6.  $19912 \div 31$

6. \_\_\_\_\_

7.  $3^3 \cdot 12^1$

7. \_\_\_\_\_

8.  $\sqrt{36} \cdot \sqrt{100}$

8. \_\_\_\_\_

9.  $0 \div 32$

9. \_\_\_\_\_

10.  $3422 \div 1$

10. \_\_\_\_\_

11.  $(7^2 - 9) \div 4$

11. \_\_\_\_\_

12.  $13 + 26 \div 13 - 3$

12. \_\_\_\_\_

13.  $\frac{2 \cdot 12 - 1 \cdot \sqrt{100}}{7(\sqrt{25} - 2^2)}$

13. \_\_\_\_\_

14.  $2[(7 - 2)^2 - (7 - 4)^2 + 7 \cdot 5 \cdot 4]$

14. \_\_\_\_\_

15.  $16452 \times 100$

15. \_\_\_\_\_

16. Round 5,877 to the nearest ten.

16. \_\_\_\_\_

Estimate each sum or difference by rounding each number to the nearest hundred.

17.  $458 + 5690 + 3812$

17. \_\_\_\_\_

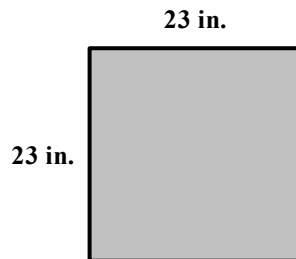
18.  $4587 - 3487$

18. \_\_\_\_\_

## Chapter 1 Test – Form D (cont'd)

Solve.

19. Subtract 13 from 109. 19. \_\_\_\_\_
20. The total cost of a washing machine is \$266 when paid for in monthly installments of \$19 each. How many months will it take to pay off the washing machine? 20. \_\_\_\_\_
21. Alice bought a new car listed for \$28,056. She received a manager's discount of \$1699. What final price did she pay? 21. \_\_\_\_\_
22. Marcus is planning a party for 12 people. The cost of a restaurant is \$21 per person. How much money will Marcus spend? 22. \_\_\_\_\_
23. Jessica buys 5 shirts for \$24 each and 4 sweaters for \$33 each. Find the total cost for these items. 23. \_\_\_\_\_
24. In 2004 there were 43,556 people living in a town. The following year 362 people moved into the town. What is the new population? 24. \_\_\_\_\_
25. Find the area and perimeter of the figure. 25. \_\_\_\_\_
- \_\_\_\_\_



# Chapter 1 Test – Form E

Name:

Date:

- Write 3,046 in words.
  - three thousand, four hundred six
  - three thousand, forty-six
  - thirty thousand, four hundred six
  - three thousand, four hundred sixty
- Write “three hundred five thousand, one hundred” in standard form.
  - 351,000
  - 305,010
  - 350,100
  - 305,100

Simplify.

- $75 + 18$ 
  - 88
  - 78
  - 83
  - 93
- $400 - 244$ 
  - 156
  - 165
  - 256
  - 265
- $112 \times 90$ 
  - 1,088
  - 10,080
  - 998
  - 9,980
- $71,426 \div 91$ 
  - 784 R:72
  - 784 R:82
  - 782 R:72
  - 782 R:82
- $2^4 \cdot 2^1$ 
  - 50
  - 1000
  - 250
  - 32
- $\sqrt{9} \cdot \sqrt{100}$ 
  - 900
  - 300
  - 30
  - 90
- $0 \div 98$ 
  - 0
  - 1
  - 98
  - undefined
- $347 \div 347$ 
  - 0
  - 1
  - 347
  - undefined
- $7(9 - 5)$ 
  - 63
  - 58
  - 28
  - 35
- $26 - (42 \div 7) + 15$ 
  - 27
  - 17
  - 35
  - 22
- $\frac{36 \div 4 \cdot 2}{(\sqrt{16} - \sqrt{4})^2 + 5}$ 
  - 4
  - 1
  - 2
  - 3

## Chapter 1 Test – Form E (cont'd)

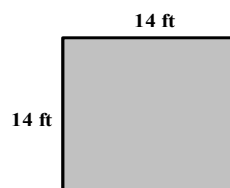
14.  $4[(22 - 20)^2 + (17 - 12)^2 - 20]$   
a. 4                                      b. 96                                      c. 32                                      d. 36
15.  $3412 \times 1000$   
a. 3,412,000                              b. 34,120                                      c. 341,200                                      d. 34,120,000
16. Round 51,279 to the nearest thousand.  
a. 51,000                                      b. 52,000                                      c. 51,300                                      d. 51,200

Estimate each sum or difference by rounding each number to the nearest hundred.

17.  $1456 + 4572 + 1072$   
a. 7,000                                      b. 7,300                                      c. 7,200                                      d. 7,100
18.  $7193 - 1251$   
a. 5800                                      b. 5900                                      c. 6000                                      d. 6100

Solve.

19. Subtract 12 from 103.  
a. 81                                      b. 101                                      c. 71                                      d. 91
20. Carol Marcus and Tom Henderson are paying off a loan of \$3492. Their monthly payment is \$97. How many months will it take them to pay off the loan?  
a. 36 months                                      b. 30 months                                      c. 48 months                                      d. 40 months
21. Alex had \$799 and gave his friend \$65. How much money did Alex have left?  
a. \$634                                      b. \$734                                      c. \$744                                      d. \$746
22. A carton can hold 16 electric mixers packed for shipping. A factory shipped 25 cartons one day. How many mixers did it ship?  
a. 320 mixers                                      b. 400 mixers                                      c. 41 mixers                                      d. 360 mixers
23. A group of 2 adults and 2 children went to the movies. Each adult's ticket cost \$9 and each child's ticket cost \$6. How much money total did the tickets cost?  
a. \$30                                      b. \$15                                      c. \$18                                      d. \$12
24. Tonya earns \$1185 per month plus \$450 in tips. What is her total income per month?  
a. \$1635                                      b. \$1645                                      c. \$1535                                      d. \$1365
25. Find the perimeter of the figure.  
a. 124 feet                                      b. 62 feet                                      c. 484 feet                                      d. 56 feet



# Chapter 1 Test – Form F

Name:

Date:

- Write 74,605 in words.
  - seventy-four thousand, six hundred five
  - seventy-four thousand, six hundred fifty
  - seven hundred forty-six thousand, five
  - seventy-four thousand, sixty-five
- Write “thirty-eight thousand, fifteen” in standard form.
  - 380,015
  - 38,150
  - 38,015
  - 380,150

Simplify.

- $66 + 225$ 
  - 265
  - 281
  - 291
  - 292
- $700 - 451$ 
  - 249
  - 241
  - 259
  - 349
- $192 \times 80$ 
  - 15,260
  - 1,526
  - 1,536
  - 15,360
- $53,941 \div 68$ 
  - 791 R:27
  - 791, R:17
  - 793 R: 27
  - 793 R:17
- $4^3 \cdot 2^1$ 
  - 24
  - 128
  - 348
  - 64
- $\sqrt{100} \cdot \sqrt{25}$ 
  - 50
  - 2500
  - 500
  - 250
- $0 \div 37$ 
  - 81
  - 27
  - 0
  - undefined
- $812 \div 1$ 
  - 1
  - 812
  - 0
  - undefined
- $12(4^2 - 4)$ 
  - 140
  - 144
  - 244
  - 114
- $23 - 35 \div 7 + 4 \cdot 4$ 
  - 44
  - 24
  - 43
  - 32
- $\frac{5 \cdot 4 - 2 \cdot \sqrt{9}}{2(\sqrt{25} - 2^2)}$ 
  - 7
  - 4
  - 1
  - 6